

Name

Date



















CHRISTMAS SQUARE ADDING PUZZLE 3B

Each picture below has a value shown in the box beside it.

	<div style="border: 1px solid black; padding: 5px; display: inline-block;">60</div>		<div style="border: 1px solid black; padding: 5px; display: inline-block;">20</div>		<div style="border: 1px solid black; padding: 5px; display: inline-block;">40</div>		<div style="border: 1px solid black; padding: 5px; display: inline-block;">30</div>
---	---	---	---	---	---	---	---

Work out the total of each horizontal and vertical line of the puzzle.

				= 120
				= _____
				= _____
				= _____
= _____	= _____	= _____	= _____	

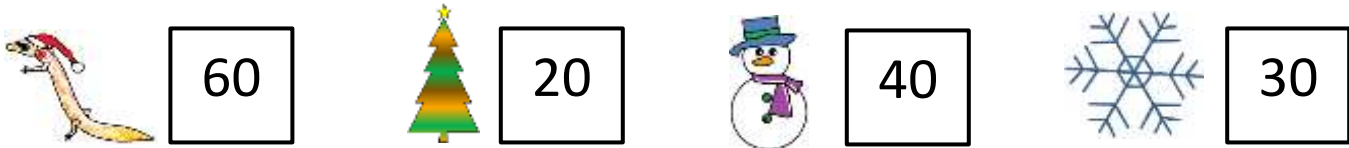
Name

Date



















CHRISTMAS SQUARE ADDING PUZZLE 3B ANSWERS

Each picture below has a value shown in the box beside it.



Work out the total of each horizontal and vertical line of the puzzle.

				= 120
				= <u>180</u>
				= <u>130</u>
				= <u>170</u>
= <u>170</u>	= <u>110</u>	= <u>160</u>	= <u>160</u>	