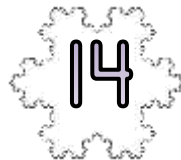
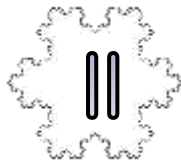


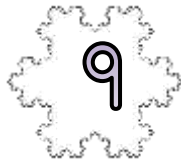




SNOWFLAKE ADDING MAZE 3B: TARGET 40

- Start the maze with zero.
- Add on the number on each snowflake as you go.
- You have to get to the finish with a total of 40.
- You must follow one of the arrows each time.

START



END

Write down the numbers in the route here:

$$\underline{\quad} + \underline{\quad} + \underline{\quad} + \underline{\quad} = 40$$

Extra Challenge

Find the route with the **highest** total. $\underline{\quad} + \underline{\quad} + \underline{\quad} + \underline{\quad} = \underline{\quad}$

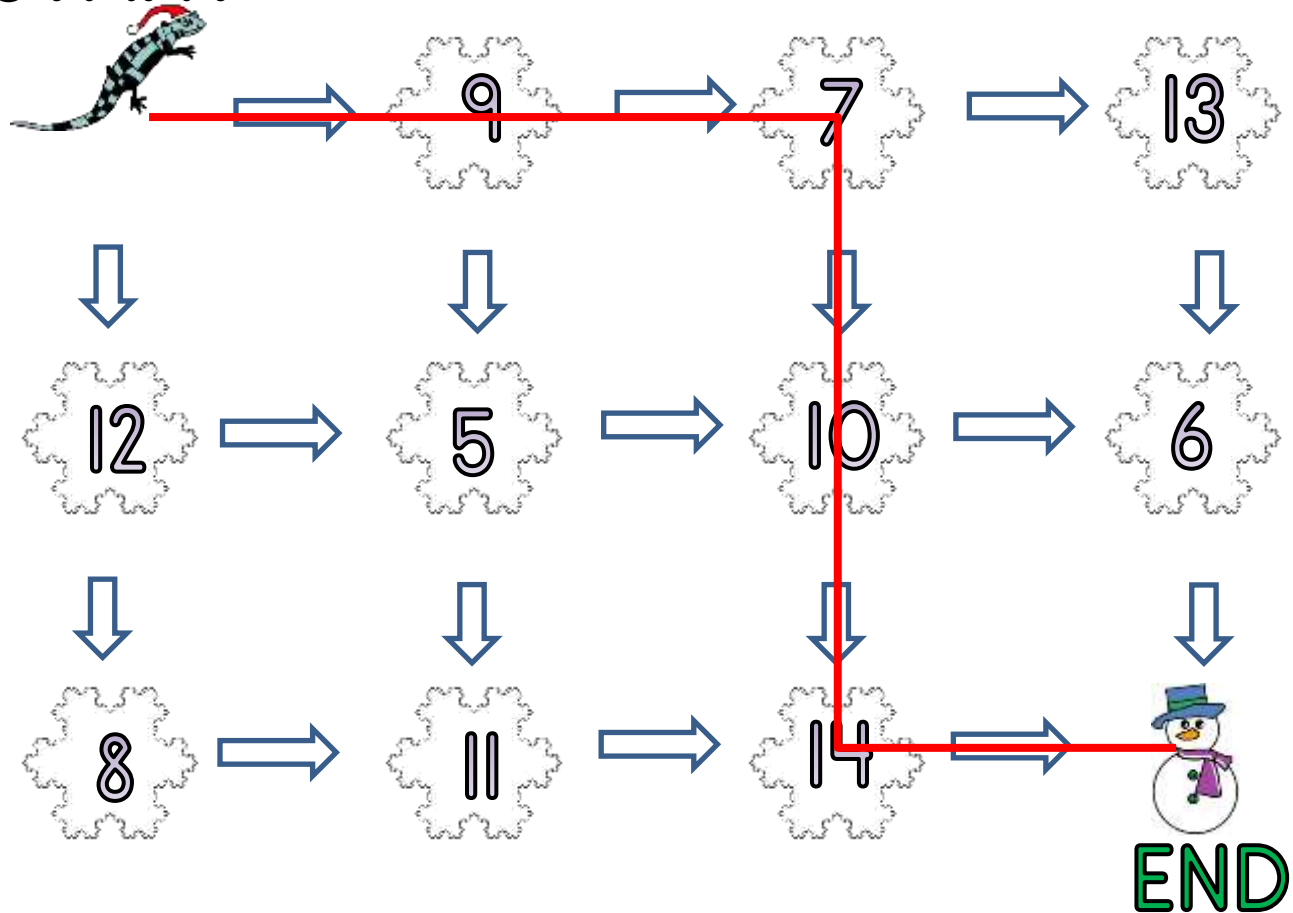
Find the route with the **lowest** total. $\underline{\quad} + \underline{\quad} + \underline{\quad} + \underline{\quad} = \underline{\quad}$



SNOWFLAKE ADDING MAZE 3B: ANSWERS

- Start the maze with zero.
- Add on the number on each snowflake as you go.
- You have to get to the finish with a total of 40.
- You must follow one of the arrows each time.

START



Write down the numbers in the route here:

$$\underline{9} + \underline{7} + \underline{10} + \underline{14} = 40$$

Extra Challenge

Find the route with the **highest** total. $\underline{12} + \underline{8} + \underline{11} + \underline{14} = \underline{45}$

Find the route with the **lowest** total. $\underline{9} + \underline{5} + \underline{10} + \underline{6} = \underline{30}$