







SNOWFLAKE ADDING MAZE 3C: TARGET 240

- Start the maze with zero.
- Add on the number on each snowflake as you go.
- You have to get to the finish with a total of 240.
- You must follow one of the arrows each time.

START



END

Write down the numbers in the route here:

$$\underline{\quad} + \underline{\quad} + \underline{\quad} + \underline{\quad} = 240$$

Extra Challenge

Find the route with the **highest** total. $\underline{\quad} + \underline{\quad} + \underline{\quad} + \underline{\quad} = \underline{\quad}$

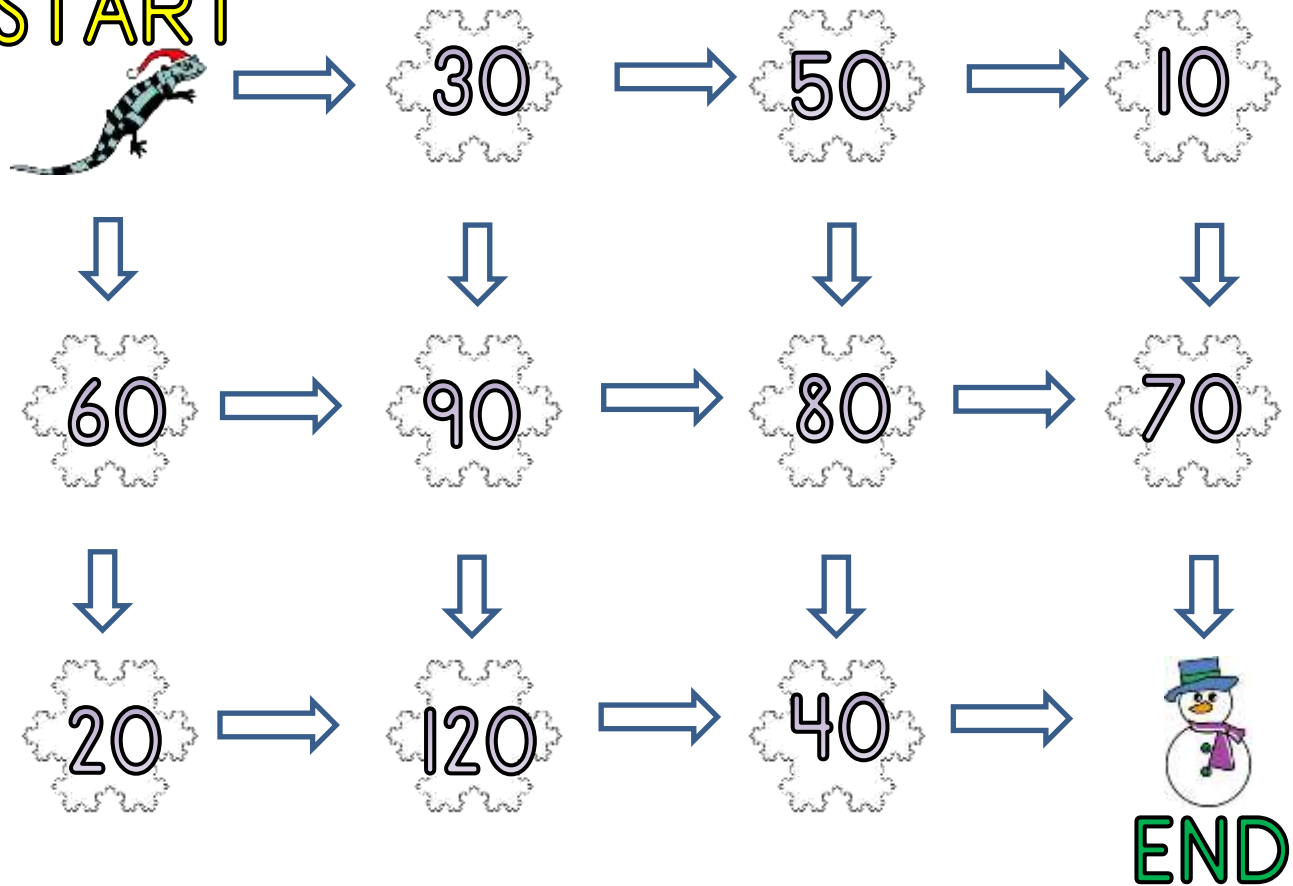
Find the route with the **lowest** total. $\underline{\quad} + \underline{\quad} + \underline{\quad} + \underline{\quad} = \underline{\quad}$



SNOWFLAKE ADDING MAZE 3C: ANSWERS

- Start the maze with zero.
- Add on the number on each snowflake as you go.
- You have to get to the finish with a total of 240.
- You must follow one of the arrows each time.

START



Write down the numbers in the route here:

$$\underline{30} + \underline{90} + \underline{80} + \underline{40} = 240$$

Extra Challenge

Find the route with the **highest** total. $\underline{60} + \underline{90} + \underline{120} + \underline{40} = \underline{310}$

Find the route with the **lowest** total. $\underline{30} + \underline{50} + \underline{10} + \underline{70} = \underline{160}$