





Name _____

Date _____



















CHRISTMAS SQUARE ADDING PUZZLE 4B

Each picture below has a value shown in the box beside it.

	$1 \frac{1}{2}$		$2 \frac{1}{4}$		$\frac{3}{4}$		$3 \frac{1}{2}$
---	-----------------	---	-----------------	---	---------------	---	-----------------

Work out the total of each horizontal and vertical line of the puzzle.

				= $9 \frac{1}{4}$
				= _____
				= _____
				= _____
= _____	= _____	= _____	= _____	


Name

Date



CHRISTMAS SQUARE ADDING PUZZLE 4B ANSWERS

Each picture below has a value shown in the box beside it.



Work out the total of each horizontal and vertical line of the puzzle.

				= $9 \frac{1}{4}$
				= <u>$5 \frac{1}{4}$</u>
				= <u>$8 \frac{3}{4}$</u>
				= <u>$8 \frac{3}{4}$</u>
= <u>6</u>	= <u>$7 \frac{1}{4}$</u>	= <u>$10 \frac{3}{4}$</u>	= <u>8</u>	