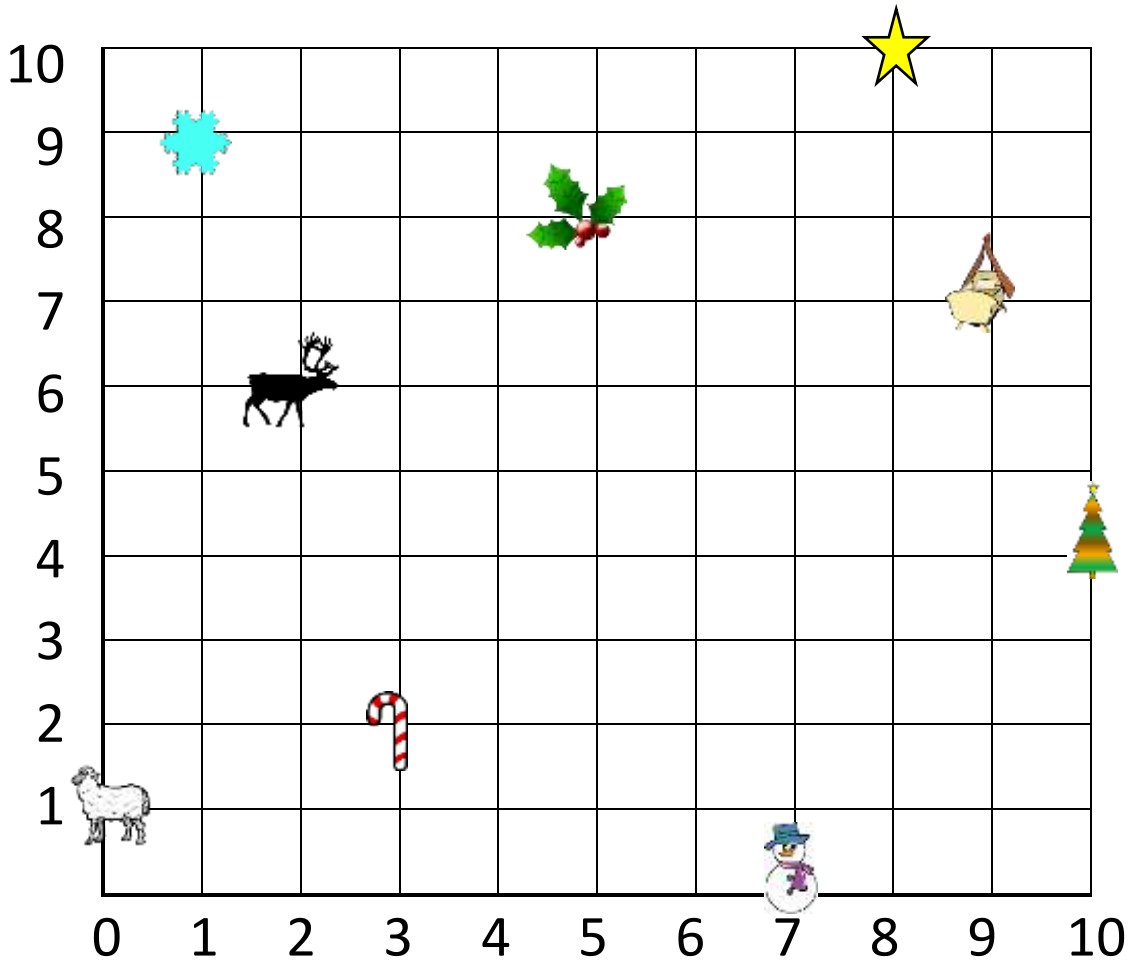


Name _____




Date _____









FIND THE CHRISTMAS COORDINATES 2



1) Write down the coordinates of each of the items on the grid.

	(__ , __)
	(__ , __)
	(__ , __)

	(__ , __)
	(__ , __)
	(__ , __)

	(__ , __)
	(__ , __)
	(__ , __)

2) Use the clues to find the location of Santa's secret grotto.

- It is north of the tree and south of the star.
- It is east of the reindeer and west of the holly leaf.
- It is in a direct line north-east of the sheep.

Secret Grotto's Coordinates: (__ , __)
--

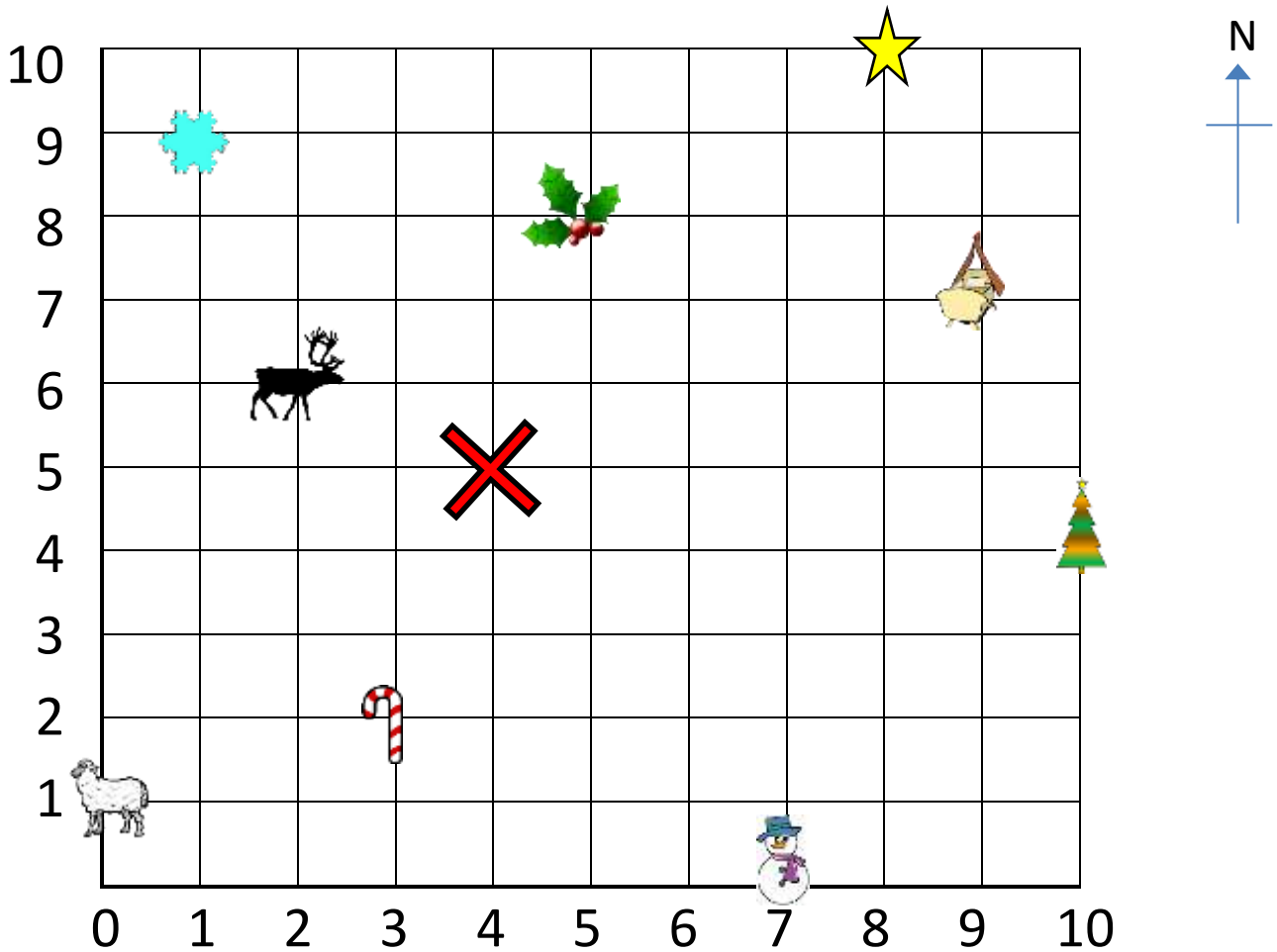


Name _____




Date _____









FIND THE CHRISTMAS COORDINATES 2 ANSWERS



1) Write down the coordinates of each of the items on the grid.

	(<u>10</u> , <u>4</u>)
	(<u>3</u> , <u>2</u>)
	(<u>0</u> , <u>1</u>)

	(<u>7</u> , <u>0</u>)
	(<u>5</u> , <u>8</u>)
	(<u>9</u> , <u>7</u>)

	(<u>1</u> , <u>9</u>)
	(<u>8</u> , <u>10</u>)
	(<u>2</u> , <u>6</u>)

2) Use the clues to find the location of Santa's secret grotto.

- It is north of the tree and south of the star.
- It is east of the reindeer and west of the holly leaf.
- It is in a direct line north-east of the sheep.

Secret Grotto's
Coordinates:
(4 , 5)

