

Name

Date



CHRISTMAS SQUARE ADDING PUZZLE 1B

Each picture below has a value shown in the boxes below.



4



3



















2



1

Work out the total of each horizontal and vertical line of the puzzle.

= 10

= _____

= _____

= _____

= 13

= _____

= _____

= _____

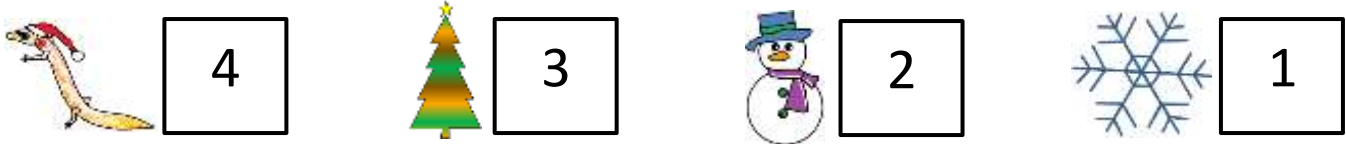
Name

Date



CHRISTMAS SQUARE ADDING PUZZLE 1B ANSWERS

Each picture below has a value shown in the boxes below.



Work out the total of each horizontal and vertical line of the puzzle.

				= 10
				= <u>12</u>
				= <u>7</u>
				= <u>11</u>
= 13	= <u>7</u>	= <u>12</u>	= <u>8</u>	