

Name \_\_\_\_\_

Date \_\_\_\_\_



# EQUIVALENT FRACTIONS WITH CIRCLES SHEET 4

Shade in the correct fraction of the circle and complete the equivalent fractions.

The first one is done for you.

1)		=		6)		=	
	$\frac{3}{5}$		$\frac{6}{10}$		—		—
2)		=		7)		=	
	—		—		—		—
3)		=		8)		=	
	—		—		—		—
4)		=		9)		=	
	—		—		—		—
5)		=		10)		=	
	—		—		—		—

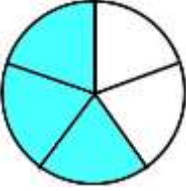
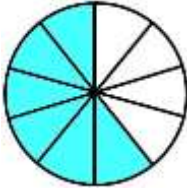

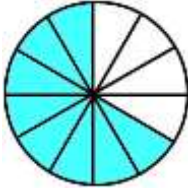
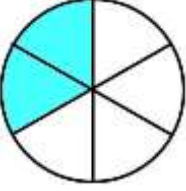
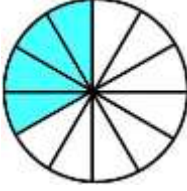
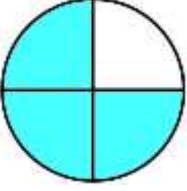
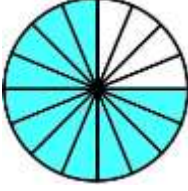
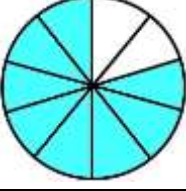
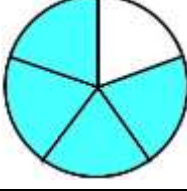
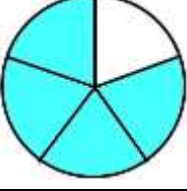
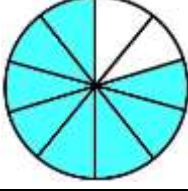
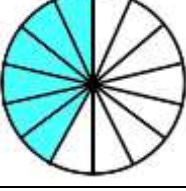
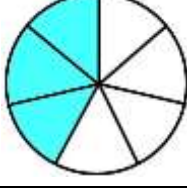
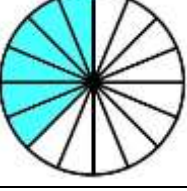
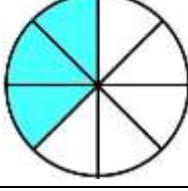
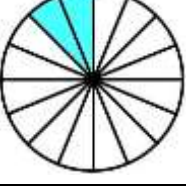
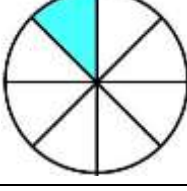
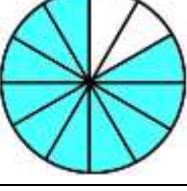
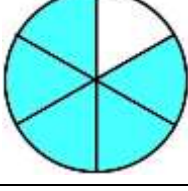


Name

Date



# EQUIVALENT FRACTIONS WITH CIRCLES SHEET 4 ANSWERS

1)		=		6)		=	
	$\frac{3}{5}$		$\frac{6}{10}$		$\frac{2}{3}$		$\frac{8}{12}$
2)		=		7)		=	
	$\frac{2}{6}$		$\frac{4}{12}$		$\frac{3}{4}$		$\frac{12}{16}$
3)		=		8)		=	
	$\frac{8}{10}$		$\frac{4}{5}$		$\frac{4}{5}$		$\frac{8}{10}$
4)		=		9)		=	
	$\frac{6}{14}$		$\frac{3}{7}$		$\frac{6}{16}$		$\frac{3}{8}$
5)		=		10)		=	
	$\frac{2}{16}$		$\frac{1}{8}$		$\frac{10}{12}$		$\frac{5}{6}$

