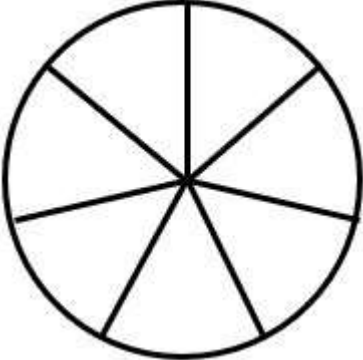
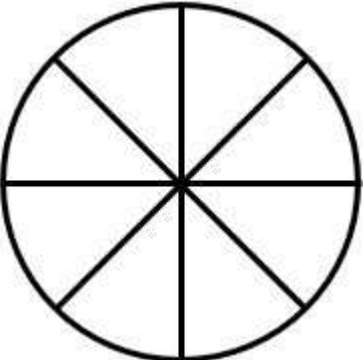
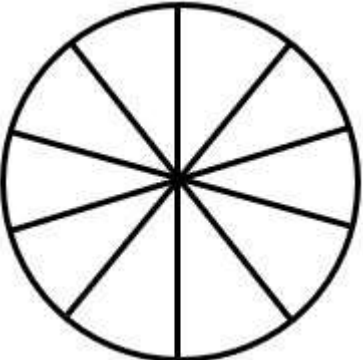


Name _____

Date _____



FRACTION CIRCLES 2

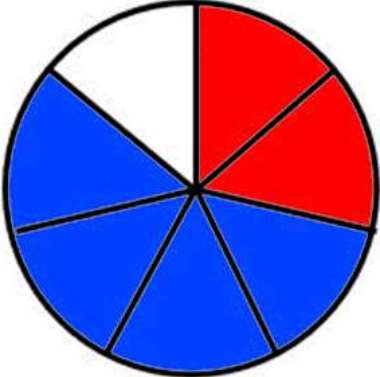
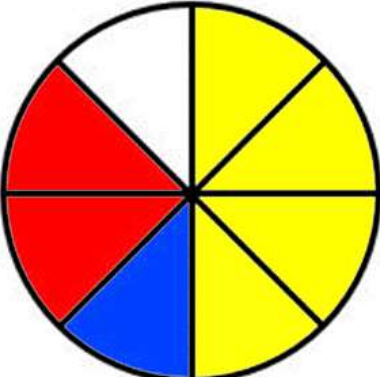
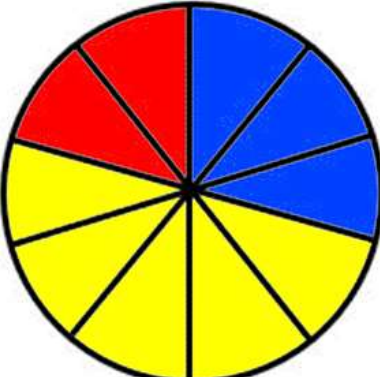
	<p>Shade 2 parts red. Shade 3 parts blue.</p> <p>What fraction is red? _____</p> <p>What fraction is blue? _____</p> <p>What fraction is unshaded? _____</p>
	<p>Shade 4 parts yellow. Shade 1 part blue. Shade 2 parts red.</p> <p>What fraction is yellow? _____</p> <p>What fraction is blue? _____</p> <p>What fraction is red? _____</p>
	<p>Shade 3 parts blue. Shade 5 parts yellow. Shade 1 part red.</p> <p>What fraction is blue? _____</p> <p>What fraction is yellow? _____</p> <p>What fraction is red? _____</p> <p>What fraction is unshaded? _____</p>

Name

Date



FRACTION CIRCLES 2 ANSWERS

	<p>Shade 2 parts red. Shade 3 parts blue.</p> <p>What fraction is red? $\frac{2}{5}$</p> <p>What fraction is blue? $\frac{3}{5}$</p> <p>What fraction is unshaded? $\frac{1}{5}$</p>
	<p>Shade 4 parts yellow. Shade 1 part blue. Shade 2 parts red.</p> <p>What fraction is yellow? $\frac{4}{8}$ or $\frac{1}{2}$</p> <p>What fraction is blue? $\frac{1}{8}$</p> <p>What fraction is red? $\frac{2}{8}$ or $\frac{1}{4}$</p> <p>What fraction is unshaded? $\frac{1}{8}$</p>
	<p>Shade 3 parts blue. Shade 5 parts yellow. Shade 2 parts red.</p> <p>What fraction is blue? $\frac{3}{10}$</p> <p>What fraction is yellow? $\frac{5}{10}$ or $\frac{1}{2}$</p> <p>What fraction is red? $\frac{2}{10}$ or $\frac{1}{5}$</p>