

Name

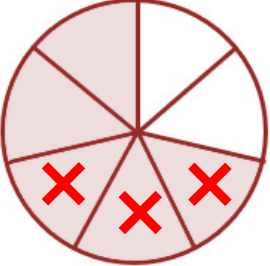
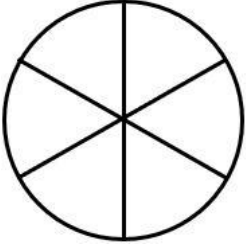

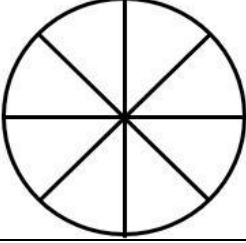
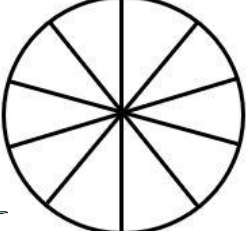
Date



# SUBTRACT FRACTIONS WITH LIKE DENOMINATORS

## USING CIRCLES SHEET 2

Shade the correct fraction of the pizza, cross out the amount eaten and then fill in the fraction sentence.

FRACTION	PROBLEM	FRACTION SENTENCE
1) 	Captain has $\frac{5}{7}$ of the pizza. He eats $\frac{3}{7}$ .  What fraction is left? $\frac{\square}{7}$	$\frac{5}{7} - \frac{3}{7} = \underline{\quad}$
2) 	Newton has $\frac{5}{6}$ of the pizza. He eats $\frac{4}{6}$ .  What fraction is left? $\frac{\square}{6}$	$\frac{\quad}{6} - \frac{\quad}{6} = \frac{\quad}{6}$
3) 	Sally has $\frac{4}{5}$ of the pizza. She eats $\frac{3}{5}$ .  What fraction is left? $\frac{\square}{\square}$	$\frac{\quad}{\quad} - \frac{\quad}{\quad} = \frac{\quad}{\quad}$
4) 	Flame has $\frac{7}{8}$ of the pizza. She eats $\frac{2}{8}$ .  What fraction is left? $\frac{\square}{\square}$	$\frac{\quad}{\quad} - \frac{\quad}{\quad} = \frac{\quad}{\quad}$
5) 	Frazer has $\frac{8}{10}$ of the pizza. He eats $\frac{5}{10}$ .  What fraction is left? $\frac{\square}{\square}$	$\frac{\quad}{\quad} - \frac{\quad}{\quad} = \frac{\quad}{\quad}$




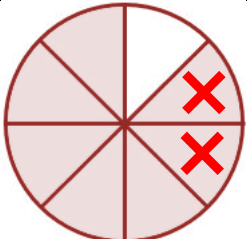
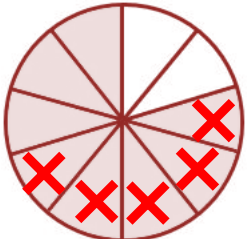
Name

Date



# SUBTRACT FRACTIONS WITH LIKE DENOMINATORS

## USING CIRCLES SHEET 2 ANSWERS

FRACTION	PROBLEM	FRACTION SENTENCE
1) 	Captain has $\frac{5}{7}$ of the pizza. He eats $\frac{3}{7}$ .  What fraction is left? $\frac{2}{7}$	$\frac{5}{7} - \frac{3}{7} = \frac{2}{7}$
2) 	Newton has $\frac{5}{6}$ of the pizza. He eats $\frac{4}{6}$ .  What fraction is left? $\frac{1}{6}$	$\frac{5}{6} - \frac{4}{6} = \frac{1}{6}$
3) 	Sally has $\frac{4}{5}$ of the pizza. She eats $\frac{3}{5}$ .  What fraction is left? $\frac{1}{5}$	$\frac{4}{5} - \frac{3}{5} = \frac{1}{5}$
4) 	Flame has $\frac{7}{8}$ of the pizza. She eats $\frac{2}{8}$ .  What fraction is left? $\frac{5}{8}$	$\frac{7}{8} - \frac{2}{8} = \frac{5}{8}$
5) 	Frazer has $\frac{8}{10}$ of the pizza. He eats $\frac{5}{10}$ .  What fraction is left? $\frac{3}{10}$	$\frac{8}{10} - \frac{5}{10} = \frac{3}{10}$