

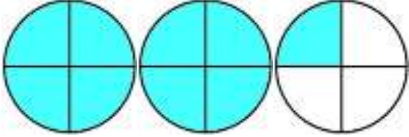
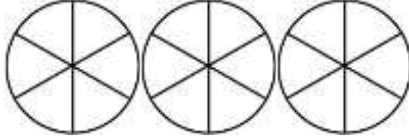

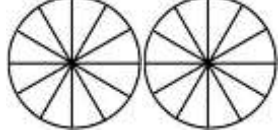
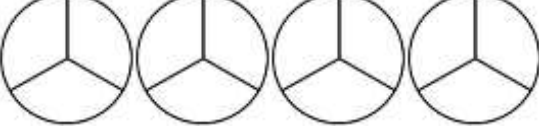
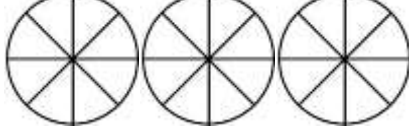
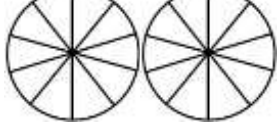
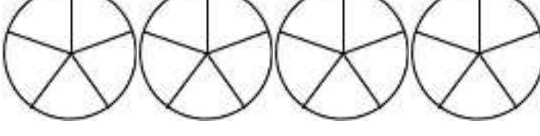
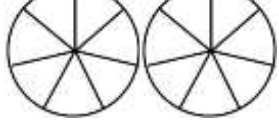
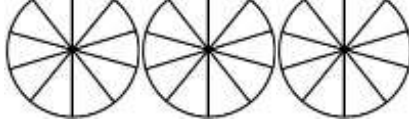
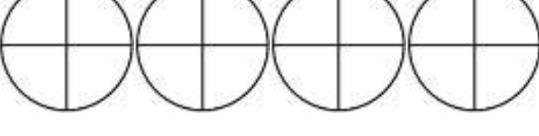

Name

Date



CONVERT IMPROPER FRACTIONS SHEET 2

Shade the fraction diagrams to work out the missing number. The first one is done for you.

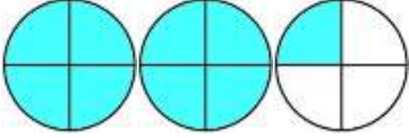
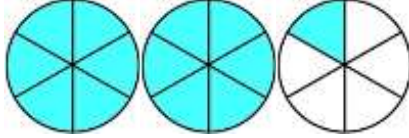
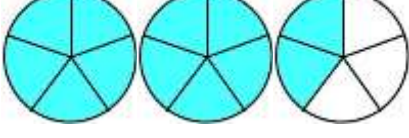
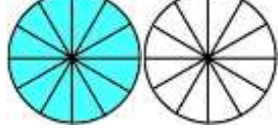
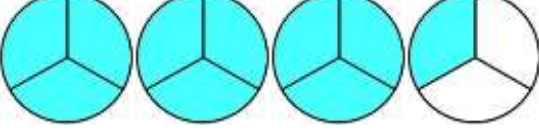
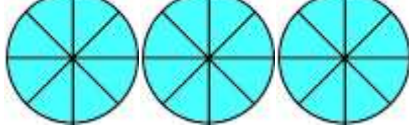
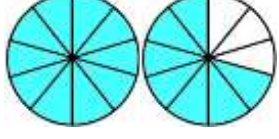
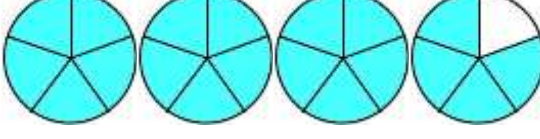
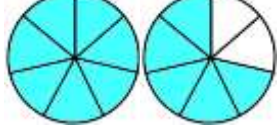
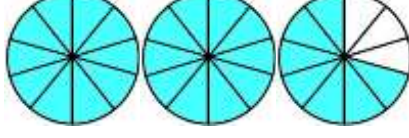
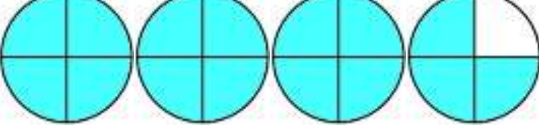
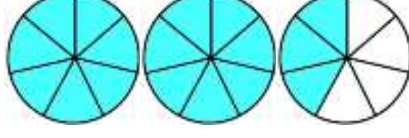
1)  $2 \frac{1}{4} = \frac{9}{4}$	7)  $\frac{13}{6} =$
2)  $\frac{12}{5} =$	8)  $1 \frac{5}{12} =$
3)  $3 \frac{1}{3} =$	9)  $\frac{24}{8} =$
4)  $\frac{17}{10} =$	10)  $3 \frac{4}{5} =$
5)  $1 \frac{5}{7} =$	11)  $2 \frac{7}{10} =$
6)  $3 \frac{3}{4} =$	12)  $\frac{19}{7} =$

Name

Date



CONVERT IMPROPER FRACTIONS SHEET 2 ANSWERS

<p>1) </p> $2 \frac{1}{4} = \frac{9}{4}$	<p>7) </p> $\frac{13}{6} = 2 \frac{1}{6}$
<p>2) </p> $\frac{12}{5} = 2 \frac{2}{5}$	<p>8) </p> $1 \frac{5}{12} = \frac{17}{12}$
<p>3) </p> $3 \frac{1}{3} = \frac{10}{3}$	<p>9) </p> $\frac{24}{8} = 3$
<p>4) </p> $\frac{17}{10} = 1 \frac{7}{10}$	<p>10) </p> $3 \frac{4}{5} = \frac{19}{5}$
<p>5) </p> $1 \frac{5}{7} = \frac{12}{7}$	<p>11) </p> $2 \frac{7}{10} = \frac{27}{10}$
<p>6) </p> $3 \frac{3}{4} = \frac{15}{4}$	<p>12) </p> $\frac{17}{7} = 2 \frac{3}{7}$