

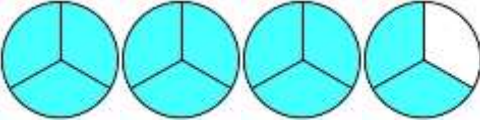
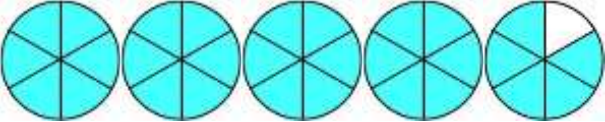
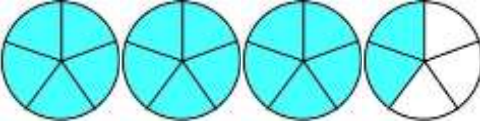
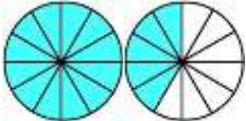
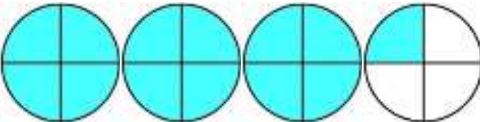
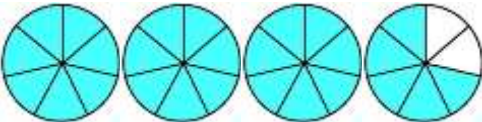
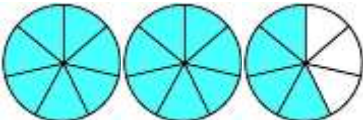
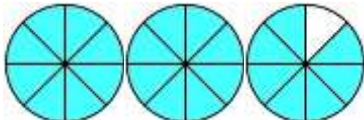
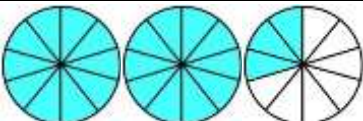

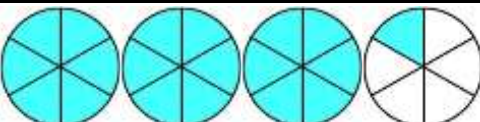
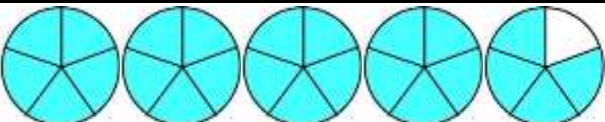
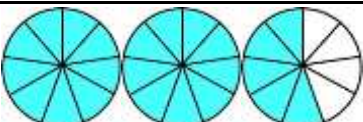
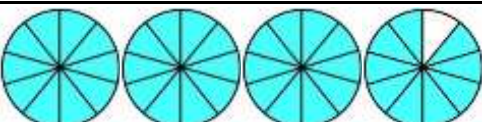
Name

Date



# CONVERT IMPROPER FRACTIONS SHEET 5

Use the fraction diagrams to fill in the missing fractions.

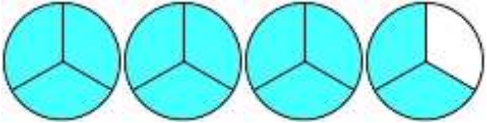
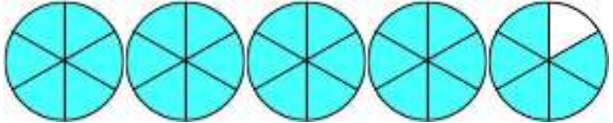
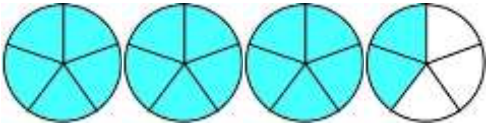
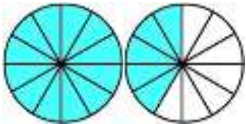
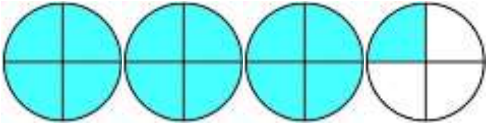
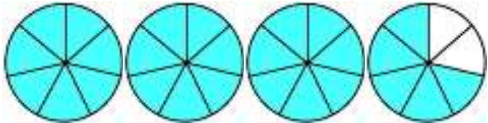
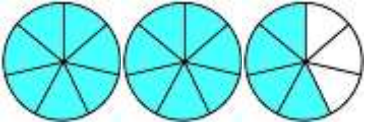
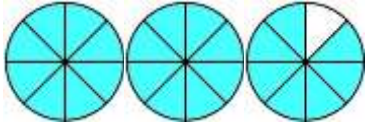
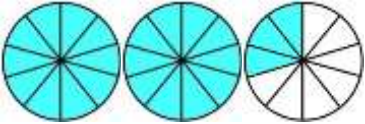

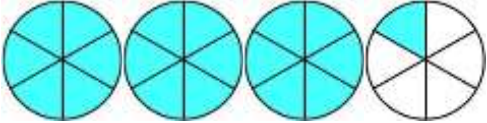

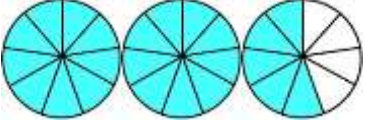
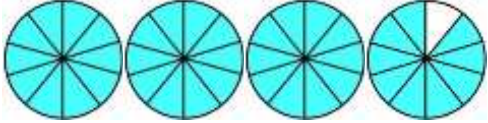
1)  $3 \frac{2}{3} = \frac{11}{3}$	7)  =
2)  $3 \frac{2}{5} =$	8)  =
3)  =	9)  =
4)  =	10)  =
5)  =	11)  =
6)  =	12)  =
6)  =	12)  =

Name

Date



# CONVERT IMPROPER FRACTIONS SHEET 5 ANSWERS

1)  $3 \frac{2}{3} = \frac{11}{3}$	8)  $4 \frac{5}{6} = \frac{29}{6}$
2)  $3 \frac{2}{5} = \frac{17}{5}$	9)  $1 \frac{5}{12} = \frac{17}{12}$
3)  $3 \frac{1}{4} = \frac{13}{4}$	10)  $3 \frac{6}{7} = \frac{26}{7}$
4)  $2 \frac{4}{7} = \frac{18}{7}$	11)  $2 \frac{7}{8} = \frac{23}{8}$
5)  $2 \frac{3}{10} = \frac{23}{10}$	12)  $4 \frac{1}{3} = \frac{13}{3}$
6)  $3 \frac{1}{6} = \frac{19}{6}$	13)  $4 \frac{4}{5} = \frac{24}{5}$
7)  $2 \frac{5}{9} = \frac{23}{9}$	14)  $3 \frac{9}{10} = \frac{39}{10}$