

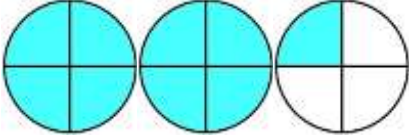
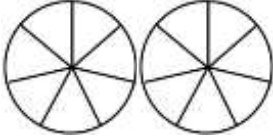
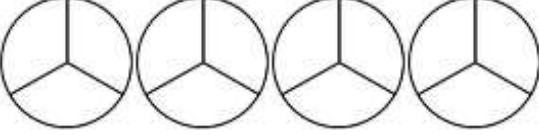
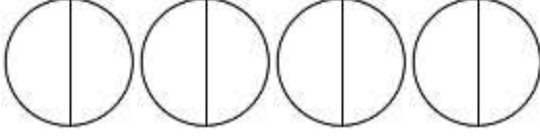
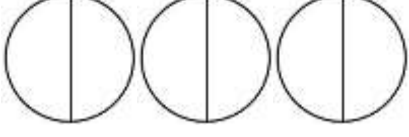
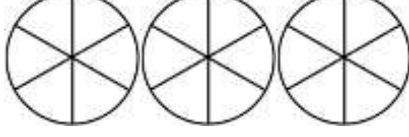
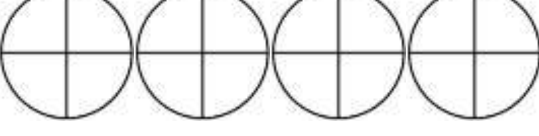


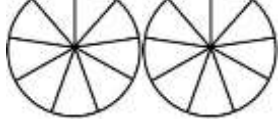
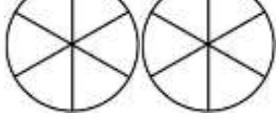

Name

Date



IMPROPER FRACTION TO MIXED NUMBER SHEET 2

Shade the fraction diagrams to work out the mixed numbers. The first one is done for you.

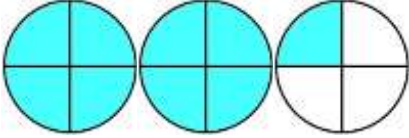
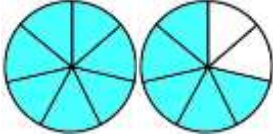
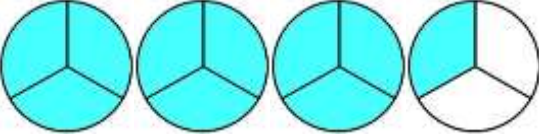
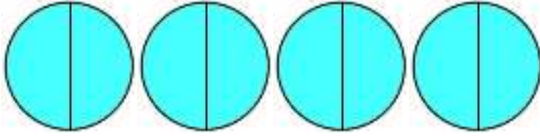
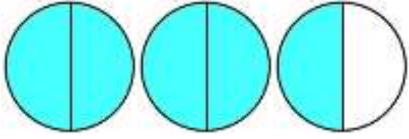
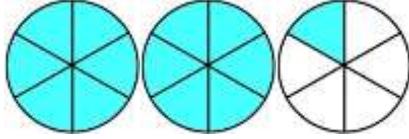
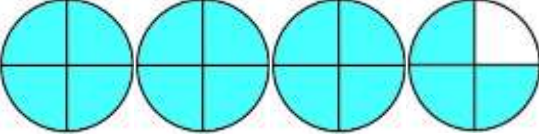
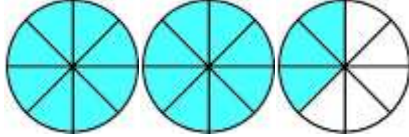
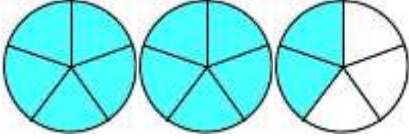
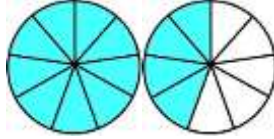
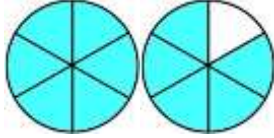
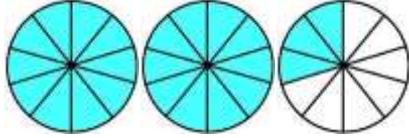
1)  $\frac{9}{4} = 2 \frac{1}{4}$	7)  $\frac{12}{7} =$
2)  $\frac{10}{3} =$	8)  $\frac{8}{2} =$
3)  $\frac{5}{2} =$	9)  $\frac{13}{6} =$
4)  $\frac{15}{4} =$	10)  $\frac{19}{8} =$
5)  $\frac{12}{5} =$	11)  $\frac{13}{9} =$
6)  $\frac{11}{6} =$	12)  $\frac{23}{10} =$

Name

Date



IMPROPER FRACTION TO MIXED NUMBER SHEET 2 ANSWERS

<p>1) </p> $\frac{9}{4} = 2 \frac{1}{4}$	<p>7) </p> $\frac{12}{7} = 1 \frac{5}{7}$
<p>2) </p> $\frac{10}{3} = 3 \frac{1}{3}$	<p>8) </p> $\frac{8}{2} = 4$
<p>3) </p> $\frac{5}{2} = 2 \frac{1}{2}$	<p>9) </p> $\frac{13}{6} = 2 \frac{1}{6}$
<p>4) </p> $\frac{15}{4} = 3 \frac{3}{4}$	<p>10) </p> $\frac{19}{8} = 2 \frac{3}{8}$
<p>5) </p> $\frac{12}{5} = 2 \frac{2}{5}$	<p>11) </p> $\frac{13}{9} = 1 \frac{4}{9}$
<p>6) </p> $\frac{11}{6} = 1 \frac{5}{6}$	<p>12) </p> $\frac{23}{10} = 2 \frac{3}{10}$