

Name _____

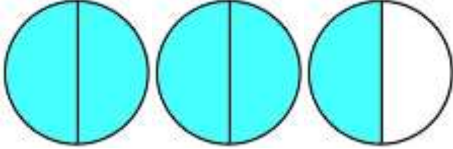

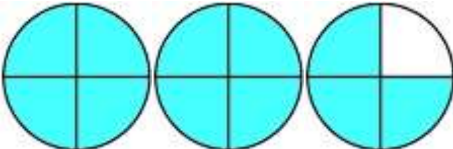
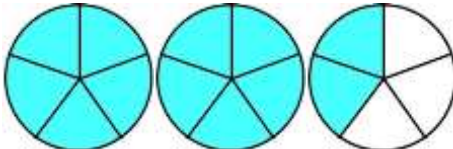
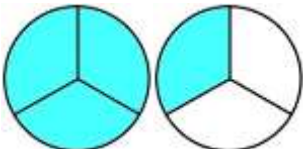
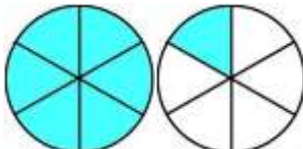
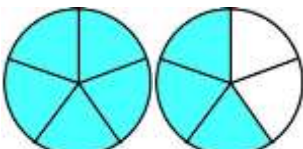
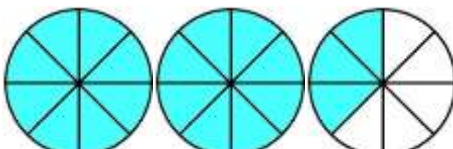
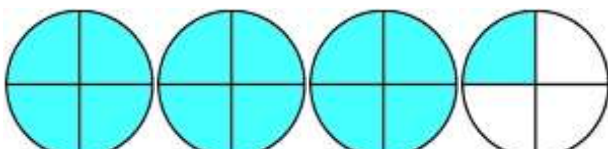
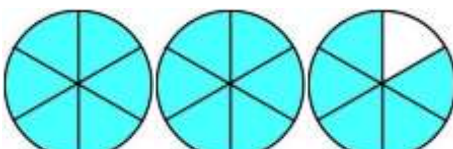
Date _____



MIXED NUMBER TO IMPROPER FRACTION SHEET 1

Use the fraction diagrams to work out the improper fraction.

The first one has been done for you.

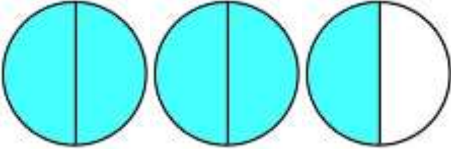
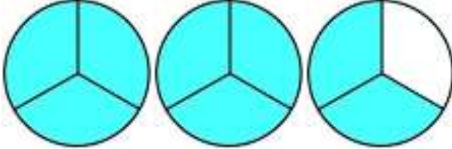
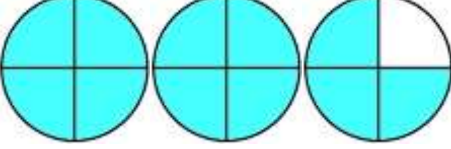
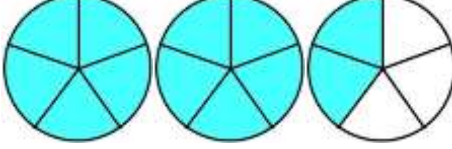
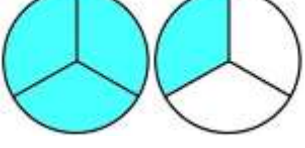
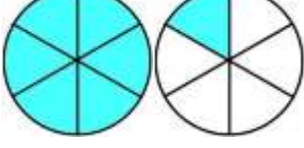
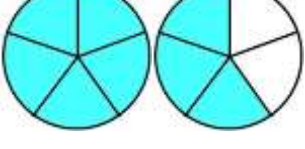
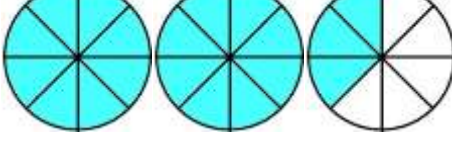
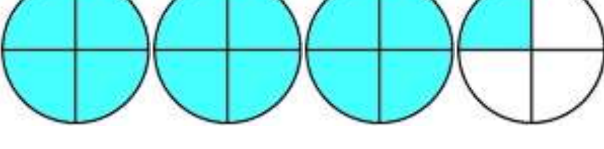
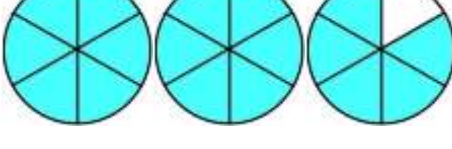
<p>1) </p> $2 \frac{1}{2} = \frac{5}{2}$	<p>6) </p> $2 \frac{2}{3} = \underline{\quad}$
<p>2) </p> $2 \frac{3}{4} = \frac{\quad}{4}$	<p>7) </p> $2 \frac{2}{5} = \underline{\quad}$
<p>3) </p> $1 \frac{1}{3} = \frac{\quad}{3}$	<p>8) </p> $1 \frac{1}{6} = \underline{\quad}$
<p>4) </p> $1 \frac{3}{5} = \frac{\quad}{5}$	<p>9) </p> $2 \frac{3}{8} = \underline{\quad}$
<p>5) </p> $3 \frac{1}{4} = \frac{\quad}{4}$	<p>10) </p> $2 \frac{5}{6} = \underline{\quad}$

Name

Date



MIXED NUMBER TO IMPROPER FRACTION SHEET 1 ANSWERS

<p>1) </p> $2 \frac{1}{2} = \frac{5}{2}$	<p>6) </p> $2 \frac{2}{3} = \frac{8}{3}$
<p>2) </p> $2 \frac{3}{4} = \frac{11}{4}$	<p>7) </p> $2 \frac{2}{5} = \frac{12}{5}$
<p>3) </p> $1 \frac{1}{3} = \frac{4}{3}$	<p>8) </p> $1 \frac{1}{6} = \frac{7}{6}$
<p>4) </p> $1 \frac{3}{5} = \frac{8}{5}$	<p>9) </p> $2 \frac{3}{8} = \frac{19}{8}$
<p>5) </p> $3 \frac{1}{4} = \frac{13}{4}$	<p>10) </p> $2 \frac{5}{6} = \frac{17}{6}$