


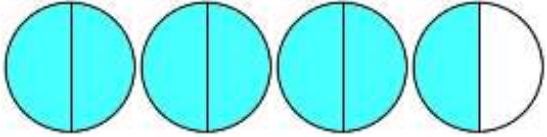
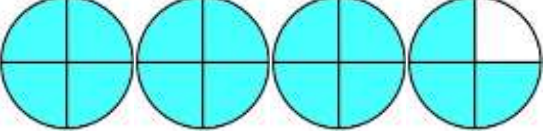
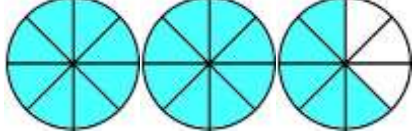
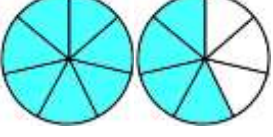
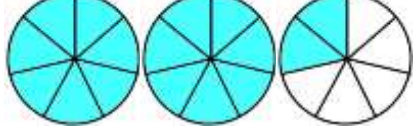
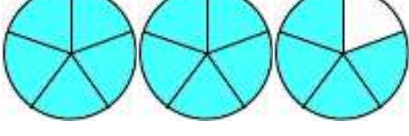
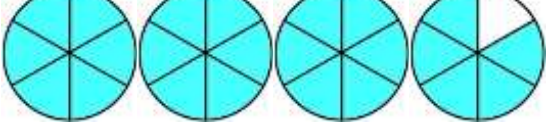
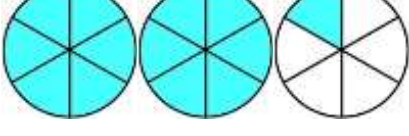
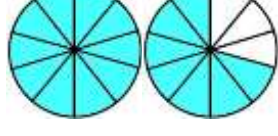
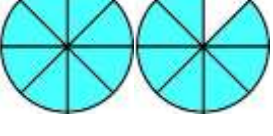
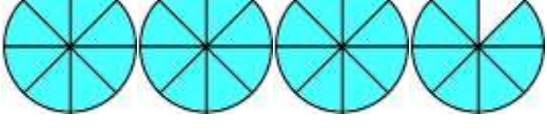
Name \_\_\_\_\_

Date \_\_\_\_\_



## MIXED NUMBER TO IMPROPER FRACTION SHEET 2

Use the fraction diagrams to work out the improper fraction.


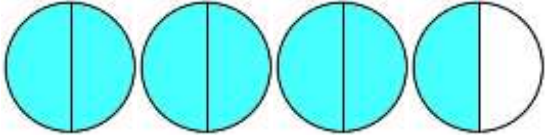
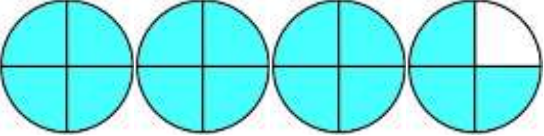
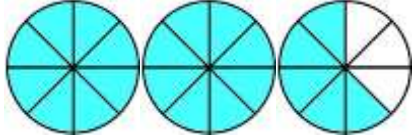
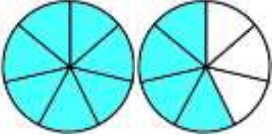
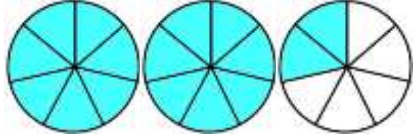
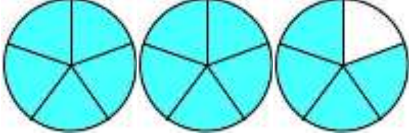
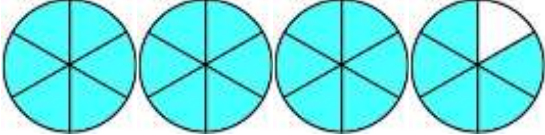
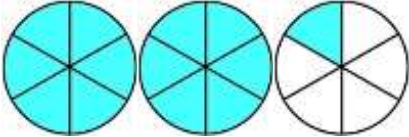
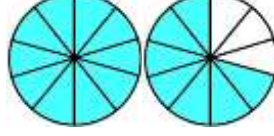
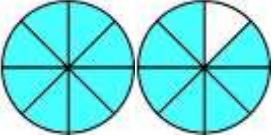
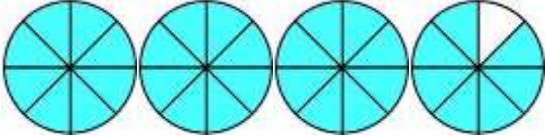
<p>1) </p> <p><math>2 \frac{1}{3} = \underline{\quad}</math></p>	<p>7) </p> <p><math>3 \frac{1}{2} = \underline{\quad}</math></p>
<p>2) </p> <p><math>3 \frac{3}{4} = \underline{\quad}</math></p>	<p>8) </p> <p><math>2 \frac{5}{8} = \underline{\quad}</math></p>
<p>3) </p> <p><math>1 \frac{4}{7} = \underline{\quad}</math></p>	<p>9) </p> <p><math>2 \frac{2}{7} = \underline{\quad}</math></p>
<p>4) </p> <p><math>2 \frac{4}{5} = \underline{\quad}</math></p>	<p>10) </p> <p><math>3 \frac{5}{6} = \underline{\quad}</math></p>
<p>5) </p> <p><math>2 \frac{1}{6} = \underline{\quad}</math></p>	<p>11) </p> <p><math>1 \frac{7}{10} = \underline{\quad}</math></p>
<p>6) </p> <p><math>1 \frac{7}{8} = \underline{\quad}</math></p>	<p>12) </p> <p><math>3 \frac{7}{8} = \underline{\quad}</math></p>

Name

Date



# MIXED NUMBER TO IMPROPER FRACTION SHEET 2 ANSWERS

<p>1) </p> $2 \frac{1}{3} = \frac{7}{3}$	<p>7) </p> $3 \frac{1}{2} = \frac{7}{2}$
<p>2) </p> $3 \frac{3}{4} = \frac{15}{4}$	<p>8) </p> $2 \frac{5}{8} = \frac{21}{8}$
<p>3) </p> $1 \frac{4}{7} = \frac{11}{7}$	<p>9) </p> $2 \frac{2}{7} = \frac{16}{7}$
<p>4) </p> $2 \frac{4}{5} = \frac{14}{5}$	<p>10) </p> $3 \frac{5}{6} = \frac{23}{6}$
<p>5) </p> $2 \frac{1}{6} = \frac{13}{6}$	<p>11) </p> $1 \frac{7}{10} = \frac{17}{10}$
<p>6) </p> $1 \frac{7}{8} = \frac{15}{8}$	<p>12) </p> $3 \frac{7}{8} = \frac{31}{8}$