



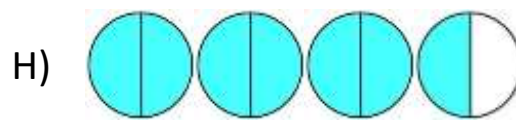
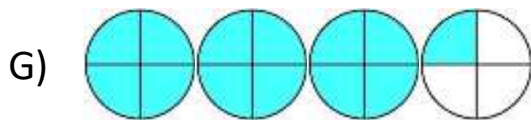
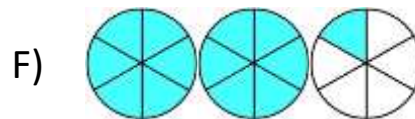
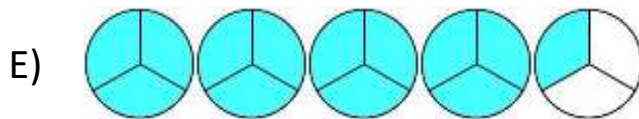
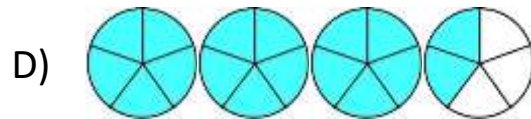
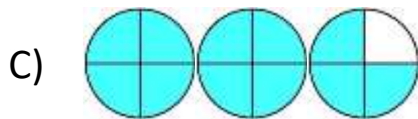
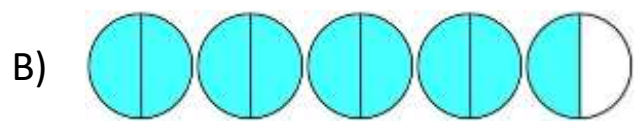
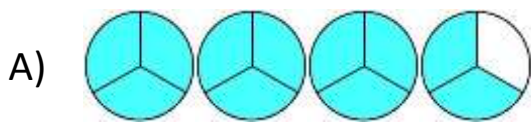
## UNDERSTANDING MIXED NUMBERS 3

Each of the answers to these three riddles is one of the mixed fraction diagrams below. Work out the answers to each of these riddles using the clues provided.

1) I am more than 2.  
I am not split into thirds.  
I am less than  $2\frac{1}{2}$ .  
Who am I?  
Answer \_\_\_\_\_

2) I am more than 3.  
My fraction part is more than one-half.  
I am less than 4.  
Who am I? Answer \_\_\_\_\_

3) I am not split into halves.  
If you double me, I am more than 7 but less than 9.  
If you round me to the nearest whole, I round down.  
  
Who am I? Answer \_\_\_\_\_





## UNDERSTANDING MIXED NUMBERS 3 ANSWERS

Each of the answers to these three riddles is one of the mixed fraction diagrams below. Work out the answers to each of these riddles using the clues provided.

1) I am more than 2.  
I am not split into thirds.  
I am less than  $2\frac{1}{2}$ .  
Who am I?  
Answer F

2) I am more than 3.  
My fraction part is more than one-half.  
I am less than 4.  
Who am I? Answer A

3) I am not split into quarters.  
If you double me, I am more than 7 but less than 9.  
If you round me to the nearest whole, I round down.  
  
Who am I? Answer E

