

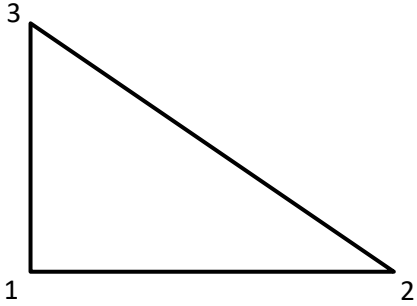
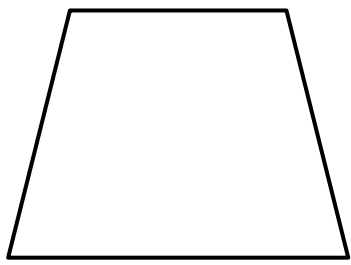
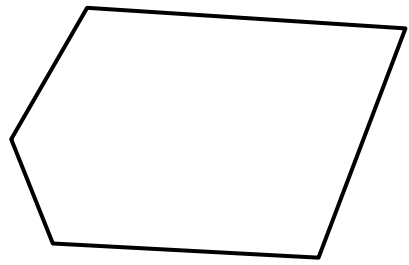
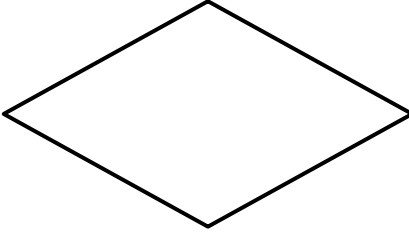
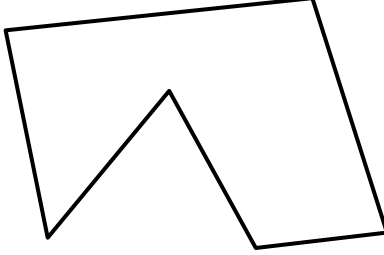
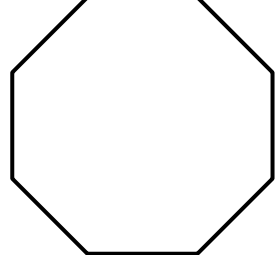
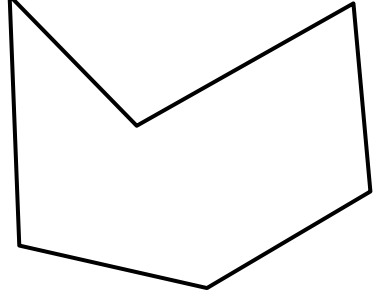

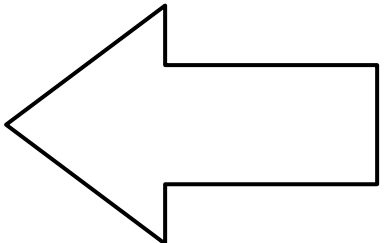
Name _____

Date _____



COUNT THE CORNERS 2


Number the corners on each of the shapes and write down the total.

 <p>Number of corners: 3</p>	 <p>Number of corners: _____</p>	 <p>Number of corners: _____</p>
 <p>Number of corners: _____</p>	 <p>Number of corners: _____</p>	 <p>Number of corners: _____</p>
 <p>Number of corners: _____</p>	 <p>Number of corners: _____</p>	 <p>Number of corners: _____</p>



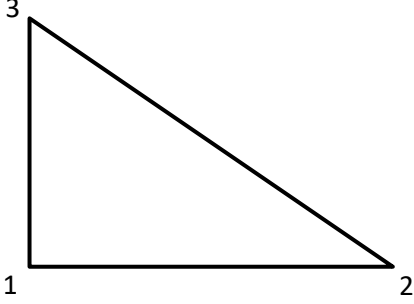
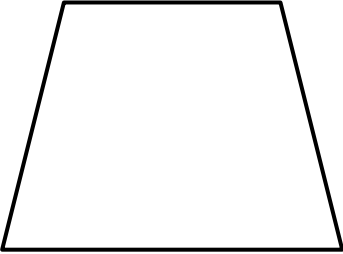
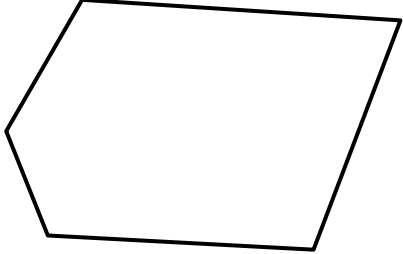
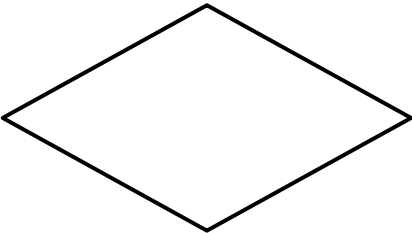
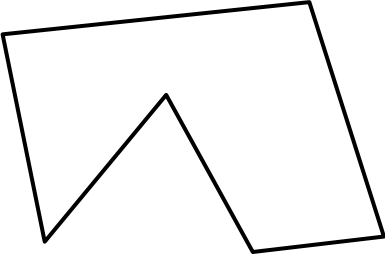
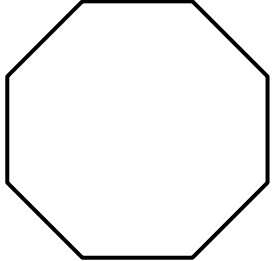
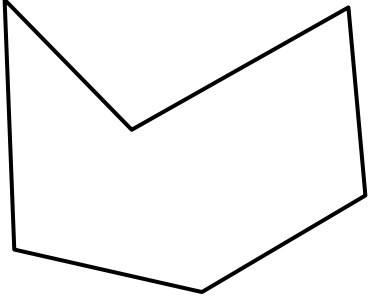

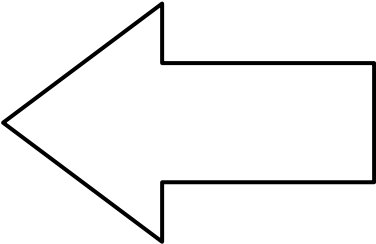
Name

Date



COUNT THE CORNERS 2 ANSWERS

Number the corners on each of the shapes and write down the total.

 <p>Number of corners: 3</p>	 <p>Number of corners: <u>4</u></p>	 <p>Number of corners: <u>5</u></p>
 <p>Number of corners: <u>4</u></p>	 <p>Number of corners: <u>6</u></p>	 <p>Number of corners: <u>8</u></p>
 <p>Number of corners: <u>6</u></p>	 <p>Number of corners: <u>5</u></p>	 <p>Number of corners: <u>7</u></p>