


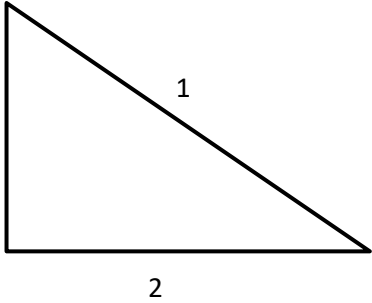
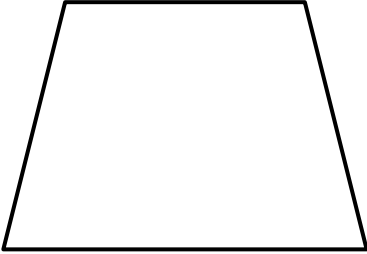

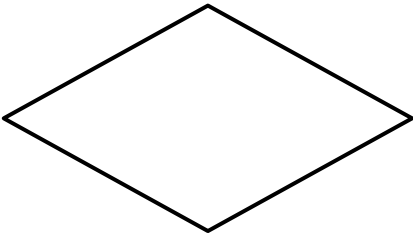
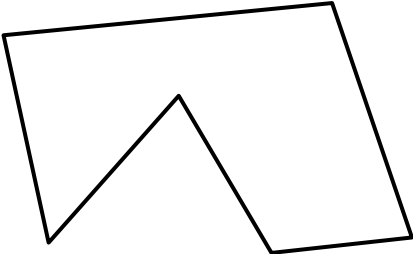
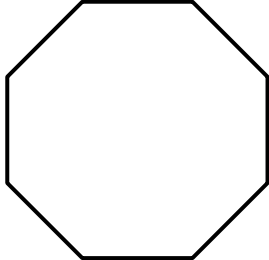
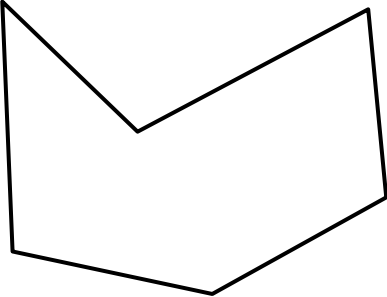

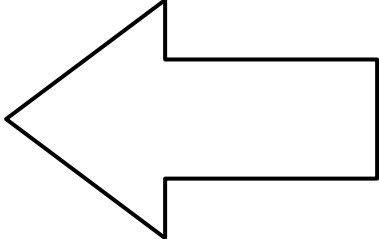
Name _____

Date _____



COUNT THE SIDES 2

Number the sides on each of the shapes and write down the total.
The first one has been done for you.

 <p>Number of sides: 3</p>	 <p>Number of sides: ____</p>	 <p>Number of sides: ____</p>
 <p>Number of sides: ____</p>	 <p>Number of sides: ____</p>	 <p>Number of sides: ____</p>
 <p>Number of sides: ____</p>	 <p>Number of sides: ____</p>	 <p>Number of sides: ____</p>

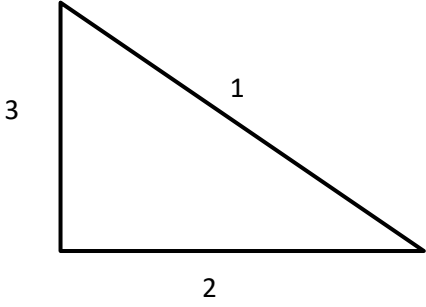
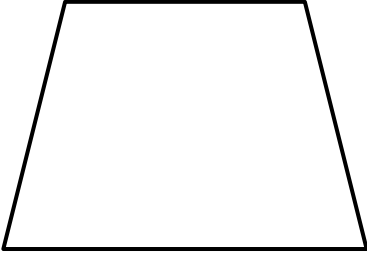

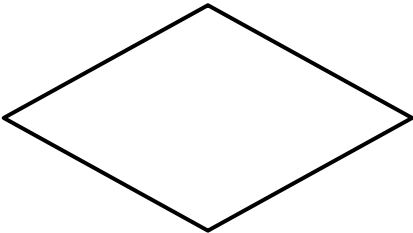
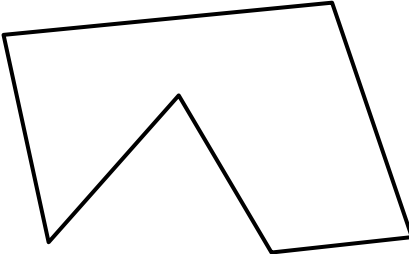
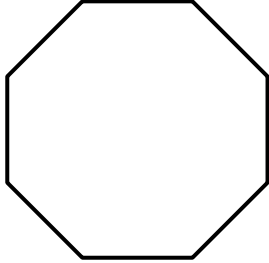
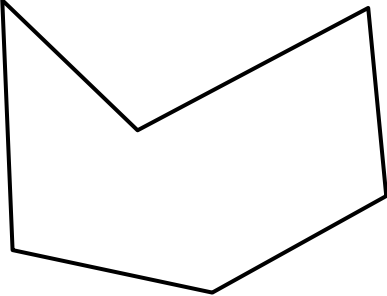

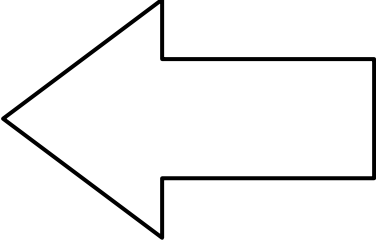


Name

Date



COUNT THE SIDES 2 ANSWERS

 <p>Number of sides: 3</p>	 <p>Number of sides: <u>4</u></p>	 <p>Number of sides: <u>5</u></p>
 <p>Number of sides: <u>4</u></p>	 <p>Number of sides: <u>6</u></p>	 <p>Number of sides: <u>8</u></p>
 <p>Number of sides: <u>6</u></p>	 <p>Number of sides: <u>5</u></p>	 <p>Number of sides: <u>7</u></p>