


MATH SALAMANDERS GRADE 2

MATH GRAB PACK 1 ANSWERS



Here are answers to the worksheets in Grade 2 Math Grab Pack 1.

CONTENTS (ANSWER SHEETS)			
1	3 Digit Addition	6	Reading Scales 2C
2	Place Value Blocks up to hundreds	7	Counting Money to \$1 Sheet 1
3	Make 30	8	Number Bonds to 20
4	Fun Multiplication to 5x5	9	Number Riddles 2A
5	Colour by number Subtraction to 10	10	Mental Math Sheet A1

Please give us feedback on our pack – both what you liked and what sheets you would like to see more of by leaving a comment on the link below.

<https://www.math-salamanders.com/math-grab-packs.html>



Free Math Sheets, Math Games and Math Help

MATH-SALAMANDERS.COM



3-DIGIT ADDITION SHEET 1 ANSWERS

Have a go at these 3-digit addition problems with regrouping in the ones only.

$$\begin{array}{r}
 1) \quad \begin{array}{r} 1 \\ 247 \\ + 126 \\ \hline 373 \end{array} \quad
 2) \quad \begin{array}{r} 1 \\ 126 \\ + 115 \\ \hline 241 \end{array} \quad
 3) \quad \begin{array}{r} 1 \\ 207 \\ + 134 \\ \hline 341 \end{array} \quad
 4) \quad \begin{array}{r} 1 \\ 428 \\ + 132 \\ \hline 560 \end{array}
 \end{array}$$

$$\begin{array}{r}
 5) \quad \begin{array}{r} 1 \\ 357 \\ + 206 \\ \hline 563 \end{array} \quad
 6) \quad \begin{array}{r} 1 \\ 133 \\ + 115 \\ \hline 248 \end{array} \quad
 7) \quad \begin{array}{r} 1 \\ 445 \\ + 216 \\ \hline 661 \end{array} \quad
 8) \quad \begin{array}{r} 1 \\ 502 \\ + 254 \\ \hline 756 \end{array}
 \end{array}$$

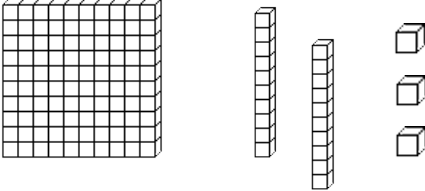
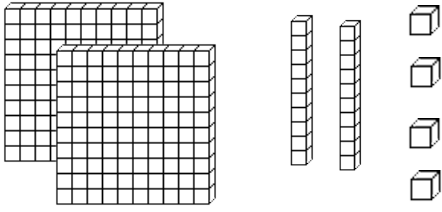
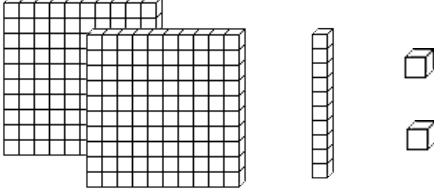
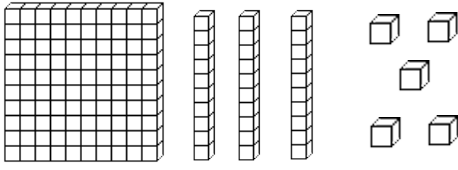
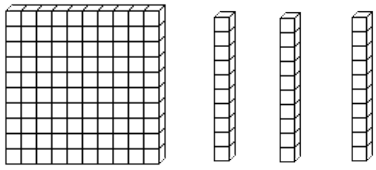
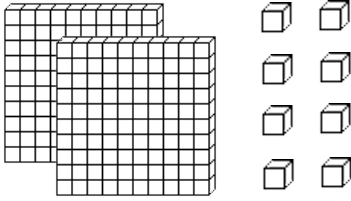
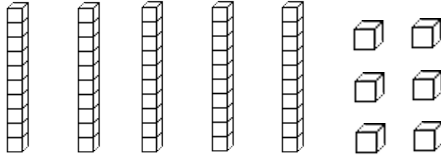
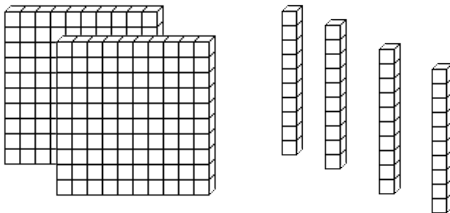
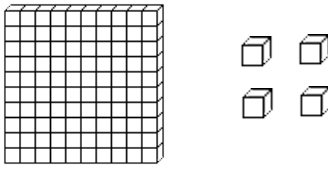
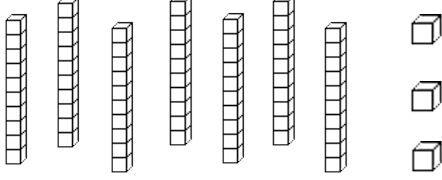
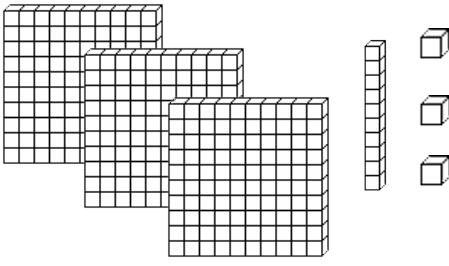
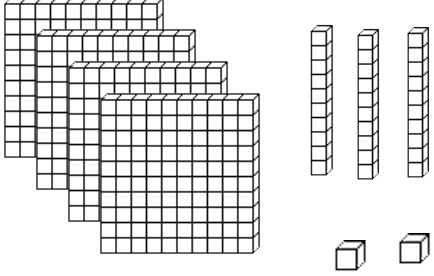
$$\begin{array}{r}
 9) \quad \begin{array}{r} 1 \\ 328 \\ + 215 \\ \hline 543 \end{array} \quad
 10) \quad \begin{array}{r} 1 \\ 267 \\ + 128 \\ \hline 395 \end{array} \quad
 11) \quad \begin{array}{r} 1 \\ 135 \\ + 27 \\ \hline 162 \end{array} \quad
 12) \quad \begin{array}{r} 1 \\ 352 \\ + 236 \\ \hline 588 \end{array}
 \end{array}$$

$$\begin{array}{r}
 13) \quad \begin{array}{r} 1 \\ 335 \\ + 107 \\ \hline 442 \end{array} \quad
 14) \quad \begin{array}{r} 1 \\ 572 \\ + 306 \\ \hline 878 \end{array} \quad
 15) \quad \begin{array}{r} 1 \\ 358 \\ + 216 \\ \hline 574 \end{array} \quad
 16) \quad \begin{array}{r} 1 \\ 208 \\ + 35 \\ \hline 243 \end{array}
 \end{array}$$

$$\begin{array}{r}
 17) \quad \begin{array}{r} 1 \\ 634 \\ + 255 \\ \hline 889 \end{array} \quad
 18) \quad \begin{array}{r} 1 \\ 537 \\ + 47 \\ \hline 584 \end{array} \quad
 19) \quad \begin{array}{r} 1 \\ 407 \\ + 269 \\ \hline 676 \end{array} \quad
 20) \quad \begin{array}{r} 1 \\ 358 \\ + 139 \\ \hline 497 \end{array}
 \end{array}$$



PLACE VALUE BLOCKS: UP TO HUNDREDS SHEET 2 ANSWERS

	<p>How many?</p> <p><u>123</u></p>		<p>How many?</p> <p><u>224</u></p>
	<p>How many?</p> <p><u>212</u></p>		<p>How many?</p> <p><u>135</u></p>
	<p>How many?</p> <p><u>130</u></p>		<p>How many?</p> <p><u>208</u></p>
	<p>How many?</p> <p><u>56</u></p>		<p>How many?</p> <p><u>240</u></p>
	<p>How many?</p> <p><u>104</u></p>		<p>How many?</p> <p><u>73</u></p>
	<p>How many?</p> <p><u>313</u></p>		<p>How many?</p> <p><u>432</u></p>



MAKE 30 ANSWERS

Use the numbers in the grid each time.

6	7	12	25	21
9	10	19	13	18
16	14	23	11	5

Challenge 1

Find **pairs** of numbers that add up to 30.

Try to find 6 different pairs.

21+9 16+14 23+7 18+12 25+5 19+11

Challenge 2

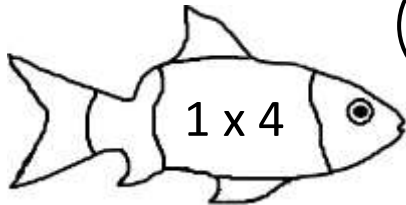
Try to find sets of **3** numbers that add up to make 30.

Try to find 6 different answers.

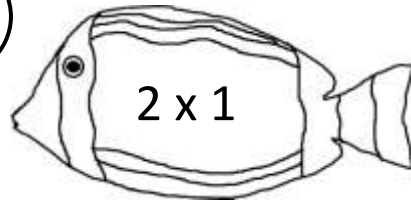
There are many different combinations...here are 6 of them:

5+6+19 5+7+18 6+11+13 6+10+14 7+10+13 9+10+11

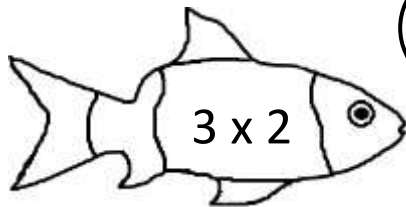
FUN MULTIPLICATION TO 5x5 SHEET 1 ANSWERS



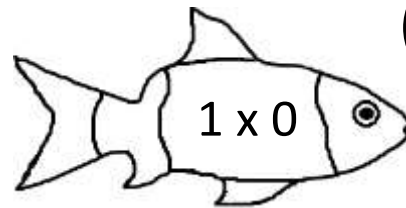
4



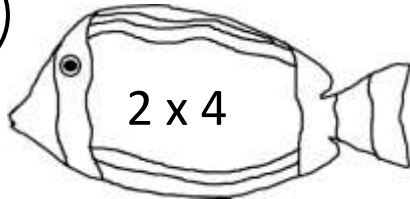
2



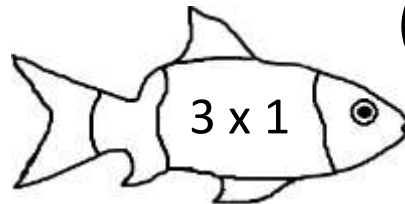
6



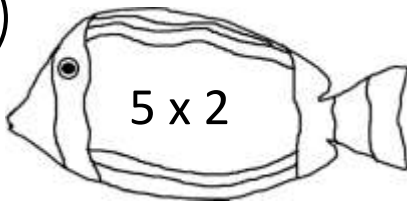
0



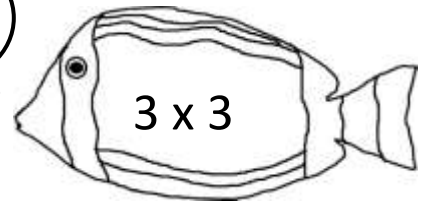
8



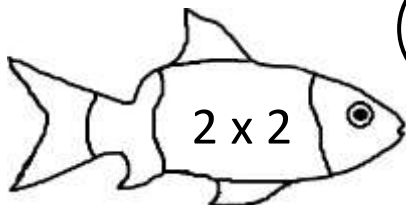
3



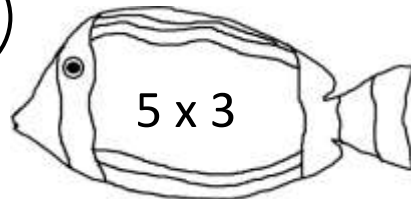
10



9



4



15



EASTER COLOUR BY NUMBER: RABBIT JUMPING SUBTRACTION TO 10 COMPLETED

9-4	5-0	6-1	9-9	6-4	8-6	5-5	3-1	7-6	9-8	5-4	1-0	10-9	4-3	2-2	7-6
8-3	7-2	10-5	8-7	6-4	2-0	7-5	6-5	10-3	8-1	10-7	10-9	8-6	5-3	4-3	8-8
9-4	6-1	4-3	7-7	6-5	7-5	9-7	6-6	7-0	9-2	10-3	7-4	4-2	2-0	1-0	10-9
0-0	7-7	6-5	4-3	9-7	6-4	3-2	4-3	8-6	8-1	7-0	5-2	7-7	5-4	3-1	6-4
8-8	9-7	5-4	7-6	5-4	2-0	6-6	3-0	6-3	10-7	9-2	10-3	6-3	3-2	5-3	6-5
8-7	4-2	3-1	1-0	7-7	5-2	3-0	10-7	7-4	8-5	4-1	10-7	10-0	7-4	6-5	8-7
6-4	7-4	8-5	10-8	10-7	4-1	6-3	8-5	3-0	7-4	9-6	4-1	6-3	10-7	9-0	5-5
10-8	3-0	5-2	7-4	9-6	6-3	8-5	5-2	8-5	6-3	10-7	7-4	7-0	9-6	10-2	6-4
9-7	7-0	4-1	8-5	5-2	10-7	3-0	7-4	9-6	5-2	3-0	9-6	7-4	5-4	6-5	10-8
7-6	5-5	9-6	10-7	6-3	8-5	10-3	8-1	2-0	4-2	9-2	4-1	9-6	5-2	9-7	8-7
9-9	8-5	10-7	3-0	7-0	9-2	3-1	5-5	8-6	10-8	6-4	8-7	7-4	5-2	8-5	10-9
6-5	7-4	3-0	5-2	10-3	1-1	5-3	7-7	10-6	6-2	10-5	7-2	6-5	9-2	6-3	7-5
3-2	3-0	10-7	8-5	6-4	5-5	10-2	10-4	6-0	7-3	9-5	8-3	9-4	7-6	3-1	1-0
10-9	7-4	9-6	8-6	7-5	10-1	9-0	10-2	8-2	7-1	5-1	6-1	5-0	8-8	1-0	6-4
5-3	8-1	9-2	6-5	7-6	10-4	6-0	9-1	8-0	9-3	10-6	5-1	8-3	1-1	4-2	6-5
8-7	10-8	5-5	6-4	10-5	8-2	9-3	7-1	9-0	10-1	10-4	4-0	6-2	8-7	9-8	10-9
6-6	5-3	7-6	4-2	8-3	9-4	10-4	6-0	10-2	8-0	7-1	8-2	8-4	3-1	4-2	8-7
10-9	5-3	7-6	4-3	6-1	10-5	5-0	8-2	7-1	9-1	10-1	6-0	8-6	10-8	9-7	6-5
8-4	9-5	4-0	5-1	10-6	8-3	9-4	7-2	6-0	10-4	10-2	7-3	9-5	4-0	8-4	5-1
10-6	6-2	9-5	7-3	5-1	8-4	10-5	8-3	6-1	7-3	10-6	4-0	5-1	6-2	9-5	10-6

KEY

0 to 2 blue

3 white

4 green

5 yellow

6 orange

7 gray

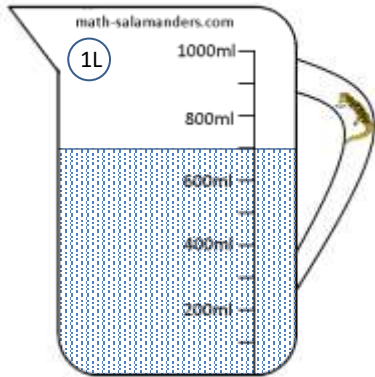
8 or 9 pink

10 black

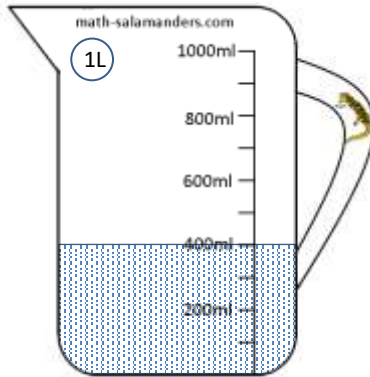


READING SCALES 2C ANSWERS

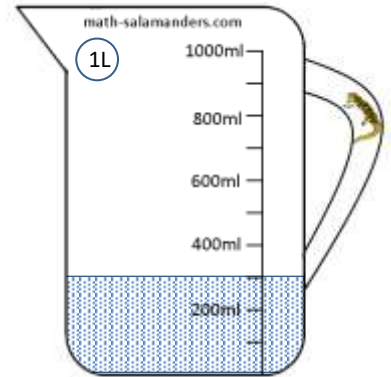
1) How many ml? 700



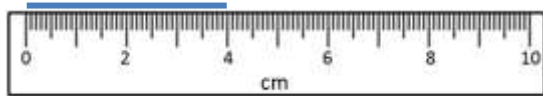
2) How many ml? 400




3) How many ml? 300




4) How long is the line? 4 cm



5) How long is the line? 9 cm



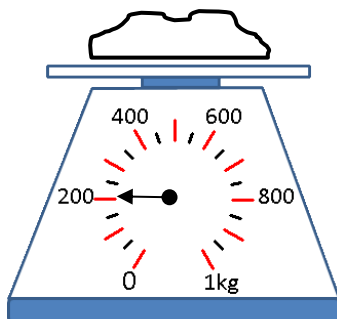
6) How long is the line? 10 mm



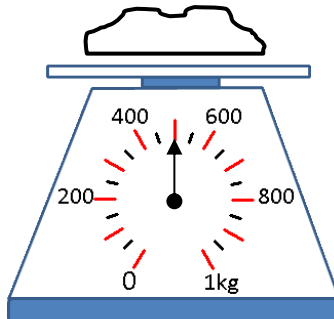
7) How long is the line? 70 mm



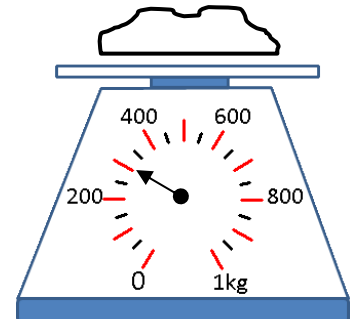
8) How many g? 200



9) How many g? 500



10) How many g? 300



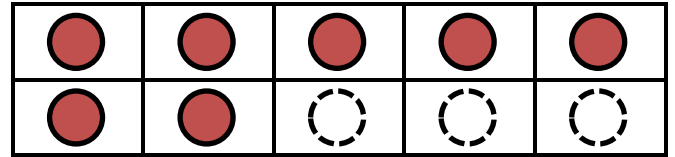
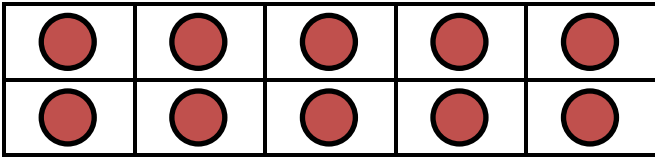
COUNTING MONEY TO \$1 SHEET 1 ANSWERS

Count the coins and work out the amounts in cents.

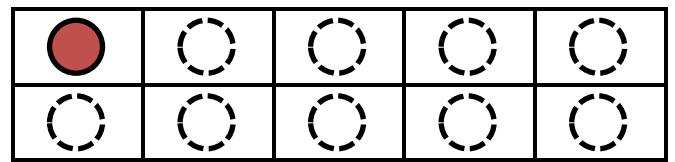
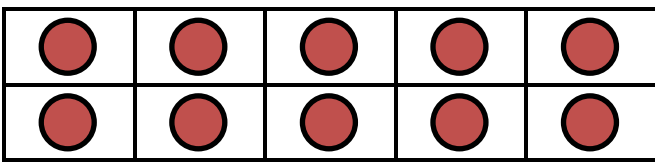


NUMBER BONDS TO 20 SHEET 1 ANSWERS

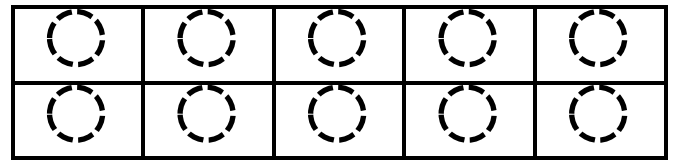
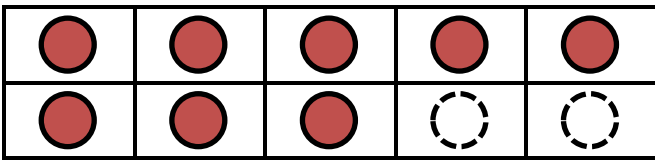
Complete the tens frame to find the missing number to make 20.



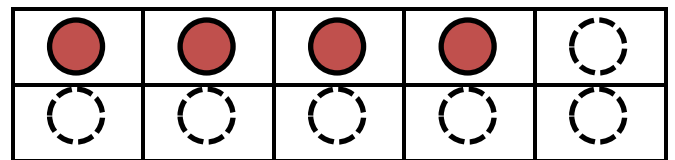
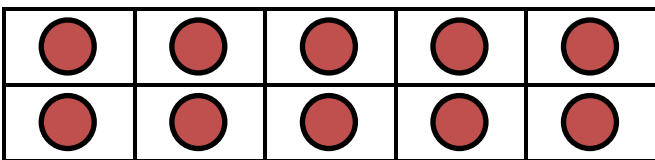
$$17 + 3 = 20$$



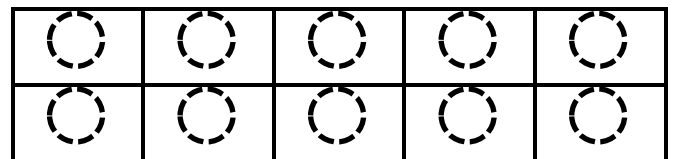
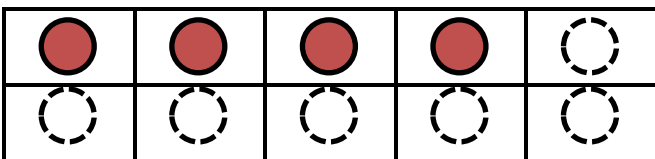
$$11 + 9 = 20$$



$$8 + 12 = 20$$



$$14 + 6 = 20$$



$$4 + 16 = 20$$



NUMBER RIDDLES 2A ANSWERS

1) I am a 3-digit number.

My hundreds digit is odd but I am an even number.

I am more than 6 hundreds.

My tens digit is one less than my hundreds digit.

Who am I?

387	765	572	986
874	628	729	1320

2) I am less 5 hundreds.

My hundreds digit is even.

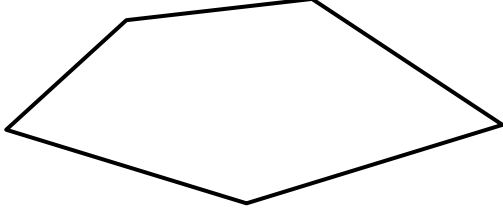

My tens digit is in the 3 times table.

I am odd.

Who am I?

425	719	382	873
463	258	337	236

MENTAL MATH SHEET A1 ANSWERS

1)	$5 + 7$	12
2)	Half of 10	5
3)	How many sides? 	5
4)	$12 - 5$	7
5)	Write down the number eighty two	82
6)	$40 + 6$	46
7)	Double 8	16
8)	5×3	15
9)	What is the next number? 24, 23, 22, 21, 20, ____	19
10)	What is the value of the digit 5 in the number 57?	50
11)	How many 5 cent coins make 20¢?	4
12)	A football costs \$10. How much do 3 footballs cost?	30
13)	How many minutes in an hour?	60
14)	What is 10 more than 23?	33
15)	How much money? 	25¢
16)	I am facing north. I turn a half-turn. What direction am I facing now?	south