


# MATH SALAMANDERS GRADE 1

## MATHS GRAB PACK 2 ANSWERS



Here are the answers to all the sheets in our Grade 1 Maths Grab Pack 2.

CONTENTS			
1	2-Digit Place Value Expand It 1	7	Number Maze Target 15
2	Colour by number Subtraction to 10	8	Parking Spaces 1
3	At The Shops 1	9	Ordering Numbers to 100 Sheet 1
4	Counting by 1s and 10s	10	Mental Math Sheet 1:2
5	Easter Egg Shape Colour In 2	11	Blast Off! Maths Game
6	In the Box		

Please give us feedback on our pack – both what you liked and what sheets you would like to see more of by leaving a comment on the link below.

<https://www.math-salamanders.com/maths-grab-packs.html>



# PLACE VALUE 2-DIGITS: EXPAND IT 1 ANSWERS

Write these numbers in expanded form.

---

 $1) \quad 47 \quad = \quad 40 + 7$ 

---

$2) \quad 62 \quad = \quad \underline{60} + 2$ 

---

$3) \quad 81 \quad = \quad \underline{80} + 1$ 

---

$4) \quad 95 \quad = \quad \underline{90} + 5$ 

---

$5) \quad 36 \quad = \quad \underline{30} + 6$ 

---

$6) \quad 24 \quad = \quad \underline{20} + 4$ 

---

$7) \quad 32 \quad = \quad \underline{30} + 2$ 

---

$8) \quad 17 \quad = \quad \underline{10} + 7$ 

---

$9) \quad 84 \quad = \quad \underline{80} + 4$ 

---

$10) \quad 77 \quad = \quad \underline{70} + 7$ 

---

$11) \quad 61 \quad = \quad \underline{60} + 1$ 

---

$12) \quad 19 \quad = \quad \underline{10} + 9$ 

---

$13) \quad 23 \quad = \quad \underline{20} + 3$ 

---

$14) \quad 65 \quad = \quad \underline{60} + 5$ 

---

$15) \quad 91 \quad = \quad \underline{90} + 1$ 

---

$16) \quad 78 \quad = \quad \underline{70} + 8$ 

---

$17) \quad 56 \quad = \quad \underline{50} + 6$ 

---

$18) \quad 48 \quad = \quad \underline{40} + 8$ 

---






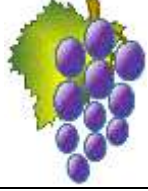




## EASTER COLOR BY NUMBER: RABBIT WITH EGG SUBTRACTION TO 10 COMPLETED

9-9	4-3	7-6	7-5	6-4	10-8	4-3	10-9	6-5	2-1	4-3	3-1	5-3	2-0	7-7	6-5
3-2	7-6	10-9	4-2	10-8	7-4	2-0	6-5	4-4	2-1	5-3	8-5	6-4	8-6	0-0	4-4
6-5	8-7	10-8	6-4	2-0	2-1	5-2	5-3	6-6	3-1	6-3	4-1	5-3	8-6	7-5	9-8
8-7	2-1	6-4	2-0	7-5	7-7	6-5	10-8	6-4	2-0	4-4	6-5	7-5	9-7	3-1	10-9
3-2	5-5	5-3	9-7	2-0	4-3	2-1	4-2	7-5	9-7	4-3	6-6	4-2	8-6	2-0	7-6
4-3	5-3	8-6	3-1	10-7	2-2	7-5	10-8	8-5	3-1	7-5	10-9	4-1	5-3	8-6	4-2
7-7	5-4	3-1	9-6	9-8	8-6	10-8	10-0	7-4	10-0	9-7	4-2	4-3	6-3	7-5	6-6
8-7	2-1	1-0	9-8	10-9	5-3	9-7	3-1	8-5	10-8	7-5	6-4	5-4	3-2	9-9	5-4
3-2	4-3	8-8	7-6	9-9	6-5	4-2	3-1	4-0	7-5	8-6	4-3	1-0	2-2	4-3	7-7
3-3	2-1	7-6	9-7	2-0	4-2	7-5	6-4	10-7	5-3	9-7	10-9	5-5	8-7	4-3	2-1
10-9	4-4	6-5	10-8	3-1	10-5	6-1	8-3	2-0	8-6	7-5	3-1	4-3	2-1	7-6	6-5
6-6	4-3	2-1	8-6	6-1	7-2	9-4	10-2	10-1	8-3	4-2	7-5	7-7	4-4	3-2	8-7
9-8	6-4	10-9	7-6	7-2	8-0	9-1	9-0	8-3	G	G	4-2	5-5	4-3	2-1	7-6
9-7	10-6	4-2	2-1	10-1	9-1	9-4	5-0	7-2	G	10-5	6-1	0-0	6-4	10-8	6-5
9-5	5-1	5-3	7-5	7-2	10-5	5-0	G	G	8-3	6-1	G	7-7	9-7	6-2	4-2
8-6	6-4	2-0	7-5	5-0	G	G	G	10-5	7-2	G	G	6-1	6-4	6-2	10-6
4-4	2-0	5-3	8-4	G	G	5-0	8-3	9-4	G	G	6-1	8-3	6-2	7-5	8-7
6-5	3-2	9-7	10-6	7-3	10-5	7-2	G	G	G	6-1	7-2	8-0	10-8	5-5	4-3
2-1	4-4	7-6	3-1	4-0	5-0	G	G	10-5	8-3	9-4	10-2	9-5	6-4	10-9	6-5
2-2	7-6	9-8	4-4	10-6	7-3	10-9	7-2	6-1	5-0	9-1	10-5	8-6	2-2	7-7	5-4

KEY			
0 or 1 dark blue	2 gray	3 white	4 pink
5 yellow	6 or 7 white	8 or 9 red	10 black



## AT THE SHOPS 1 ANSWERS

			
Orange 50c	Banana 60c	Pear 10c	Grapes 20c
			
Apple 30c	Plum 40c	Peach 80c	Juice 70c

Tyger buys 2 items from the shop. It costs him \$1.

Which items could he have bought? One has been found for you.

1)	Orange	Orange
2)	Peach	Grapes
3)	Juice	Apple
4)	Banana	Plum

There are 3 more possibilities.  
Can you find them?

Sally buys three **different** items from the shop. It costs her \$1. Which items could she have bought? There are 4 possibilities.

1)	Juice	Grapes	Pear
2)	Banana	Apple	Pear
3)	Orange	Plum	Pear
4)	Orange	Apple	Grapes



## COUNTING BY 1s AND 10s SHEET 1 ANSWERS

Each of these sequences goes up in either ones or tens.

Fill in the missing numbers.

1)

36	<u>37</u>	38	<u>39</u>	<u>40</u>	41	<u>42</u>	<u>43</u>
----	-----------	----	-----------	-----------	----	-----------	-----------

2)

14	24	<u>34</u>	<u>44</u>	54	<u>64</u>	<u>74</u>	84
----	----	-----------	-----------	----	-----------	-----------	----

3)

58	<u>59</u>	<u>60</u>	61	<u>62</u>	<u>63</u>	<u>64</u>	65
----	-----------	-----------	----	-----------	-----------	-----------	----

4)

22	<u>32</u>	42	<u>52</u>	<u>62</u>	72	<u>82</u>	<u>92</u>
----	-----------	----	-----------	-----------	----	-----------	-----------

5)

15	<u>25</u>	<u>35</u>	45	<u>55</u>	<u>65</u>	<u>75</u>	85
----	-----------	-----------	----	-----------	-----------	-----------	----

6)

18	<u>19</u>	<u>20</u>	<u>21</u>	22	<u>23</u>	24	<u>25</u>
----	-----------	-----------	-----------	----	-----------	----	-----------

7)


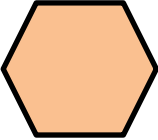
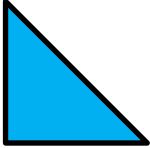



<u>86</u>	87	<u>88</u>	<u>89</u>	<u>90</u>	91	<u>92</u>	93
-----------	----	-----------	-----------	-----------	----	-----------	----

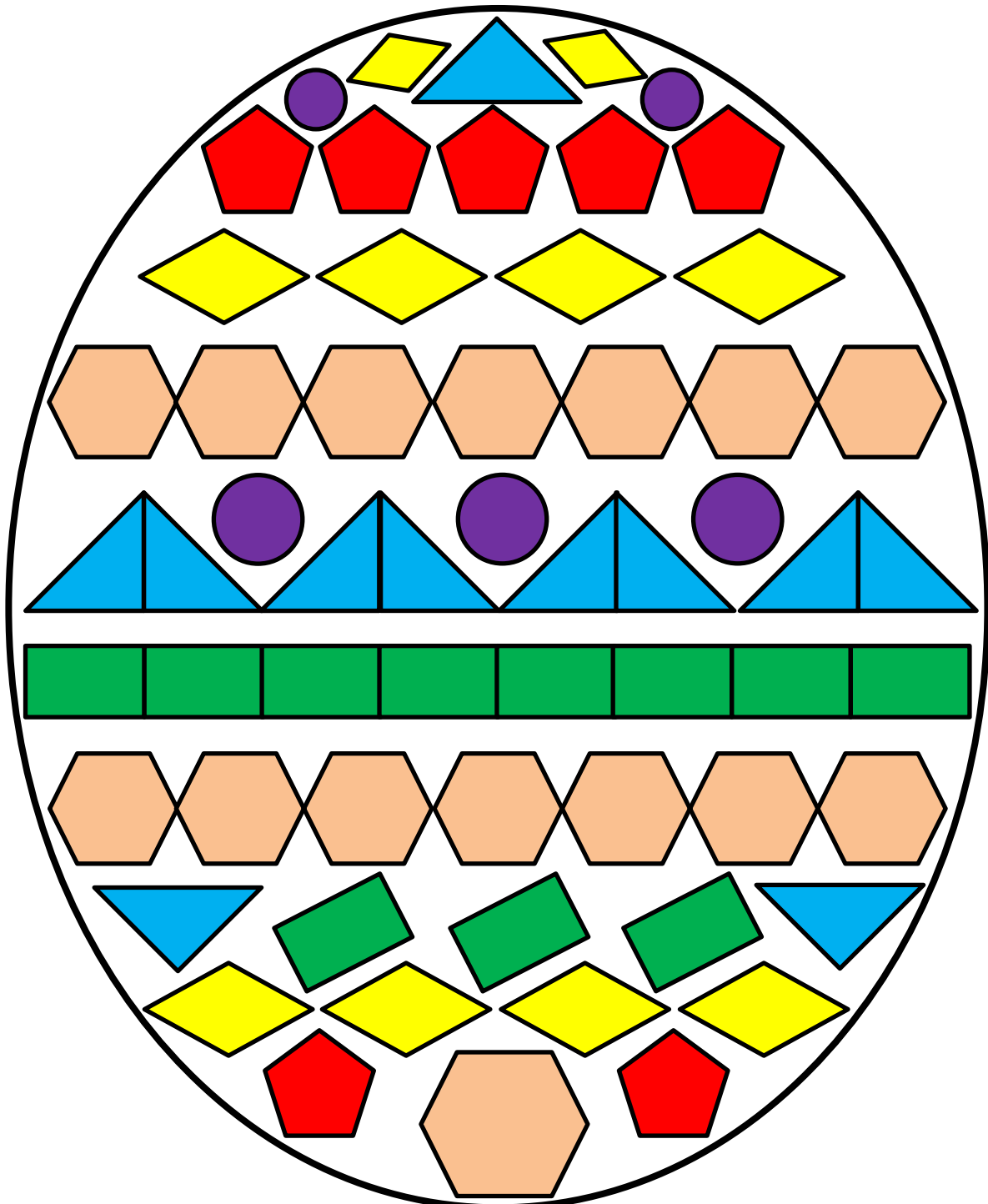
8)

<u>21</u>	31	<u>41</u>	<u>51</u>	61	<u>71</u>	<u>81</u>	91
-----------	----	-----------	-----------	----	-----------	-----------	----



# EASTER EGG SHAPE COLOR IN 2 COMPLETED

Red	Pink	Blue	Green	Yellow	Purple
					



## IN THE BOX ANSWERS


Sally has 3 boxes: a blue box, a red box and a yellow box.

**She has 10 cubes which she puts into the boxes.**

**Each box gets a different number of cubes.**

**The blue box gets the most cubes, the red box gets the second most and the yellow box gets the least cubes.**

How many cubes could there be in each box?



*There are 4 possibilities. Can you find the other three?*

Blue box	7	Red box	2	Yellow box	1	= 10 cubes
Blue box	6	Red box	3	Yellow box	1	= 10 cubes
Blue box	5	Red box	4	Yellow box	1	= 10 cubes
Blue box	5	Red box	3	Yellow box	2	= 10 cubes

*What if Sally had 11 cubes instead of 10? Can you find the 5 possibilities?*

Blue box	8	Red box	2	Yellow box	1	= 11 cubes
Blue box	7	Red box	3	Yellow box	1	= 11 cubes
Blue box	6	Red box	4	Yellow box	1	= 11 cubes
Blue box	6	Red box	3	Yellow box	2	= 11 cubes
Blue box	5	Red box	4	Yellow box	2	= 11 cubes

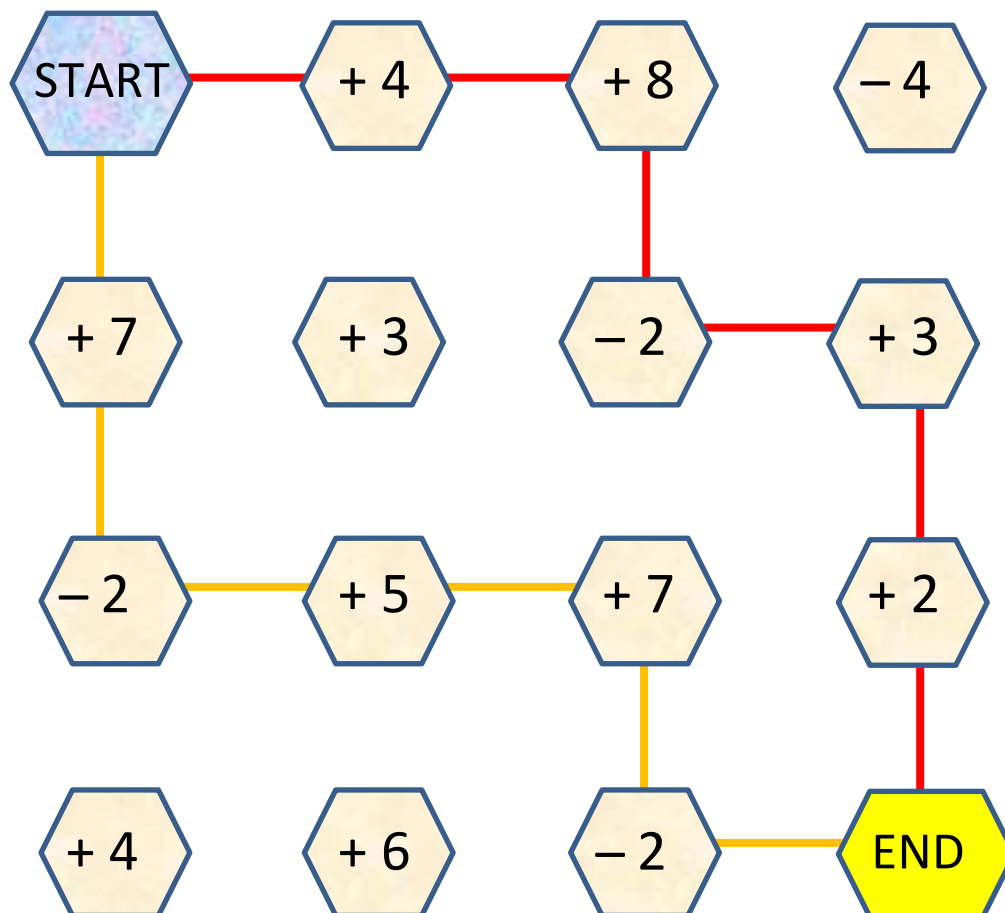
# NUMBER MAZE: TARGET 15 ANSWERS

Start the maze with zero.

You have to finish the maze with a total of 15.

You must follow one of the arrows each time.

There are two possible routes. Can you find them?



## Extra Challenge

Find the route with the highest total. **Highest total is 24**

Find the route with the lowest total. **Lowest total is 10.**



## PARKING SPACES 1 ANSWERS

- There are 3 cars: a red car, a blue car and a yellow car.
- There are 3 parking lots for the cars.
- There are 6 different ways for the cars to park in the spaces.

How many can you find?

1
2
3



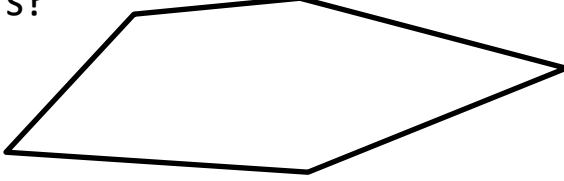


SPACE 1	SPACE 2	SPACE 3
RED	YELLOW	BLUE
RED	BLUE	YELLOW
YELLOW	RED	BLUE
YELLOW	BLUE	RED
BLUE	RED	YELLOW
BLUE	YELLOW	RED



## ORDERING NUMBERS TO 100 SHEET 1 ANSWERS

A)	56 <b>23</b> smallest	23 <b>45</b>	72 <b>56</b>	45 <b>72</b> largest	
B)	74 <b>35</b> smallest	35 <b>63</b>	63 <b>74</b>	81 <b>81</b> largest	
C)	72 <b>16</b> smallest	16 <b>27</b>	27 <b>30</b>	30 <b>42</b>	42 <b>72</b> largest
D)	90 <b>8</b> smallest	55 <b>24</b>	24 <b>55</b>	8 <b>63</b>	63 <b>90</b> largest
E)	32 <b>32</b> smallest	79 <b>51</b>	51 <b>66</b>	66 <b>79</b>	80 <b>80</b> largest
F)	41 <b>24</b> smallest	95 <b>41</b>	24 <b>60</b>	81 <b>81</b>	60 <b>95</b> largest

# MENTAL MATHS QUIZ 1:2 ANSWERS

1)	10 plus 10	<b>20</b>						
2)	Write down the number thirty-four.	<b>34</b>						
3)	How many corners? 	<b>5</b>						
4)	$20 + 6 = \underline{26}$	<b>26</b>						
5)	How much money? 	<b>40c</b>						
6)	What is the missing number? <table border="1" style="margin-left: auto; margin-right: auto;"> <tr> <td>18</td> <td>17</td> <td><u>16</u></td> <td>15</td> <td>14</td> <td>13</td> </tr> </table>	18	17	<u>16</u>	15	14	13	<b>16</b>
18	17	<u>16</u>	15	14	13			
7)	Circle the biggest number.  36 <b>(51)</b> 29 43 18							
8)	What number comes <b>before</b> 70?	<b>69</b>						
9)	Frazer eats 8 pies. He eats 4 more. How many has he eaten?	<b>12</b>						
10)	Write am or pm in the correct place 7:30 in the morning = 7:30 <u>am</u> 4:20 in the afternoon = 4:20 <u>pm</u>							
11)	I have 12 toy cars. I lose 4 of them. How many do I have left?	<b>8 cars</b>						
12)	A beetle has 6 legs. How many legs do 2 beetles have? 	<b>12 legs</b>						



