


MATH SALAMANDERS GRADE 5 MATHS GRAB PACK 2 ANSWERS



Here are answers to all the worksheets in Grade 5 Maths Grab Pack 2.

| CONTENTS | | | |
|----------|----------------------------|----|--|
| 1 | Place Value to 3dp Sheet 1 | 6 | Total-Difference Puzzle 5A |
| 2 | Newton's Crosses Puzzle 5 | 7 | Easter Colour by number Addition to 20 |
| 3 | Easter Codebreaker 1C | 8 | Who Chose Which? Puzzle |
| 4 | Balloon symmetry | 9 | Multiplying by tenths sheet 1 |
| 5 | Number Fill In Puzzle 3 | 10 | Mental Math Quiz 5:2 |

Please give us feedback on our pack – both what you liked and what sheets you would like to see more of by leaving a comment on the link below.

<https://www.math-salamanders.com/maths-grab-packs.html>



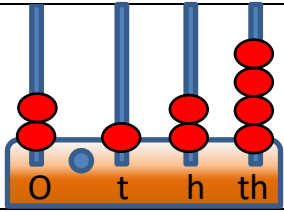
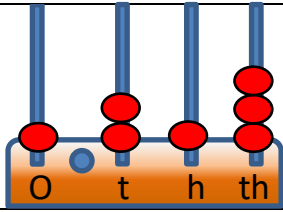
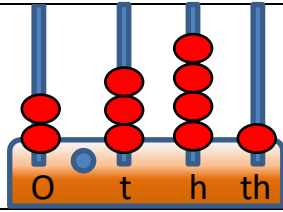
Free Math Sheets, Math Games and Math Help

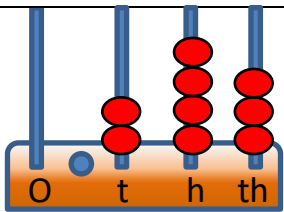
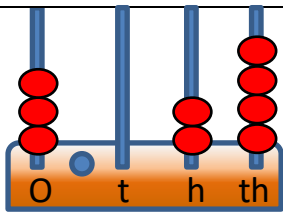
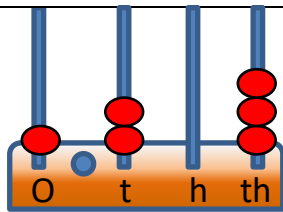
MATH-SALAMANDERS.COM



PLACE VALUE TO 3DP SHEET 1 ANSWERS

Use the abacus to work out the numbers shown.

| | | |
|---|---|---|
| 1) | 2) | 3) |
|  |  |  |
| = 2.124 | <u>1.213</u> | <u>2.341</u> |

| | | |
|---|---|---|
| 4) | 5) | 6) |
|  |  |  |
| <u>0.243</u> | <u>3.024</u> | <u>1.203</u> |

| | |
|--|----------|
| 7) 3 ones + 2 tenths + 5 hundredths | = 3.25 |
| 8) 2 tenths + 6 hundredths + 1 thousandth | = 0.261 |
| 9) 5 ones + 2 tenths + 4 hundredths + 2 thousandths | = 5.242 |
| 10) 7 ones + 4 tenths + 3 hundredths + 8 thousandths | = 7.438 |
| 11) 8 tenths + 2 hundredths + 1 thousandth | = 0.821 |
| 12) 5 ones + 4 hundredths + 2 thousandths | = 5.042 |
| 13) 7 tenths + 4 thousandths | = 0.704 |
| 14) 8 ones + 6 tenths + 3 thousandths | = 8.603 |
| 15) 3 ones + 4 hundredths + 9 thousandths | = 3.049 |
| 16) 5 tens + 2 ones + 6 hundredths | = 52.06 |
| 17) 3 tens + 7 tenths + 2 hundredths + 8 thousandths | = 30.728 |
| 18) 5 ones + 6 hundredths + 2 thousandths | = 5.062 |
| 19) 6 tens + 8 ones + 4 hundredths | = 68.04 |
| 20) 4 ones + 3 thousandths | = 4.003 |

NEWTON'S CROSSES PUZZLE 5 ANSWERS

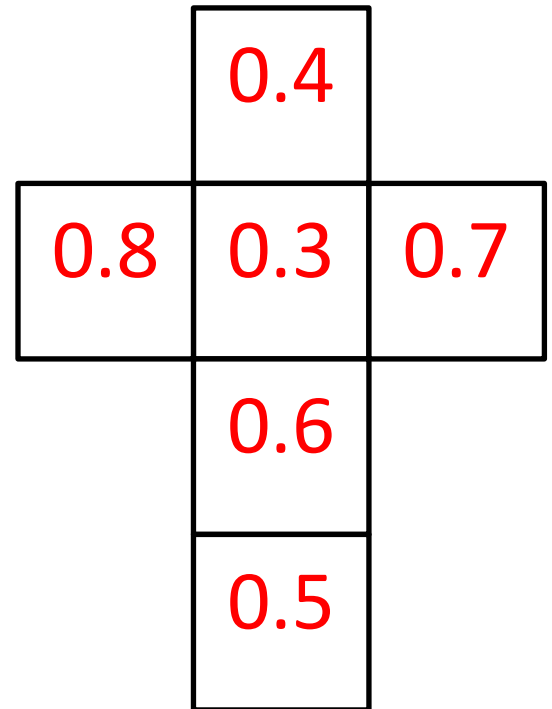
Please note that there are several solutions for each cross puzzle. As long as the number in the centre of the cross is the same as the solution below, and the rows and columns contain the same numbers then the answer should work even if the numbers are in a different place.

One possible solution for each puzzle is given.

1)

0.3 0.4 0.5 0.6 0.7 0.8

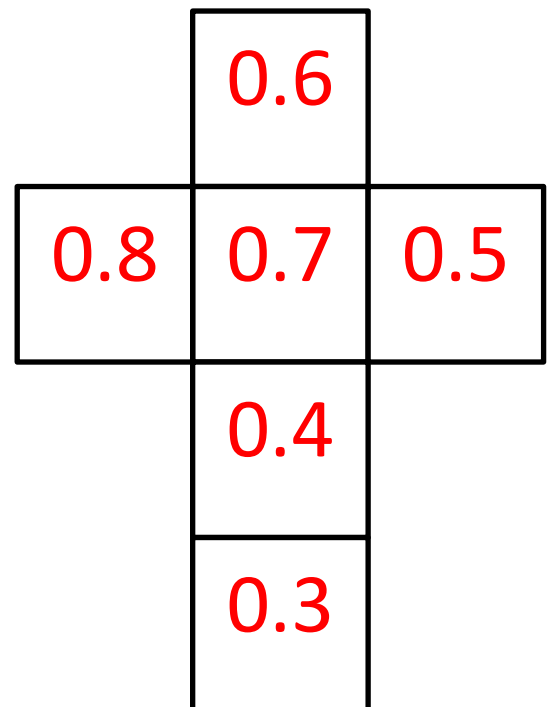
Total must be 1.8



2)

0.3 0.4 0.5 0.6 0.7 0.8

Total must be 2



EASTER CODEBREAKER 1C ANSWERS

ADDITION AND SUBTRACTION TO 1DP

Use the clues to work out the answer to the Easter joke.

| | | | | | | | | | | | | | | | |
|-----|-----|-----|-----|-----|-----|-----|-----|-----|-----|-----|-----|-----|-----|-----|-----|
| A | B | C | D | E | F | H | K | N | O | P | R | S | T | U | ! |
| 2.0 | 1.4 | 0.6 | 0.8 | 1.1 | 1.6 | 0.5 | 1.3 | 0.7 | 0.2 | 1.8 | 1.5 | 0.1 | 0.4 | 1.2 | 1.7 |

Why couldn't the Easter Rabbit go to the barbers?

| | | | | | | | | | |
|--------|-----------|-----------|---------|-----------|-----------|-----------|-----------|--|--|
| Letter | B | E | C | A | U | S | E | | |
| Number | 1.4 | 1.1 | 0.6 | 2.0 | 1.2 | 0.1 | 1.1 | | |
| Fact | $0.7+0.7$ | $1.5-0.4$ | $2-1.4$ | $0.5+1.5$ | $0.3+0.9$ | $1.4-1.3$ | $0.3+0.8$ | | |

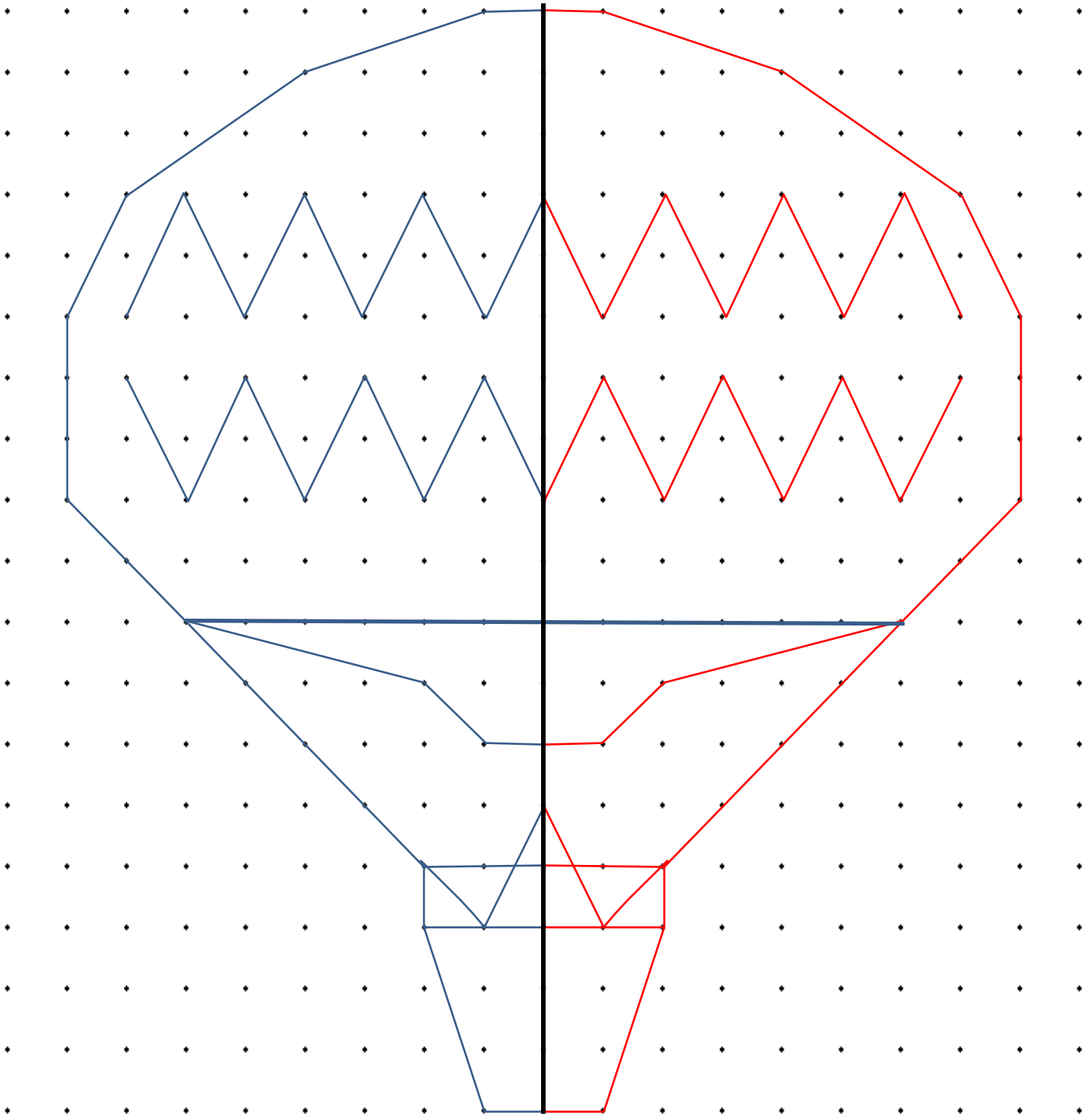
| | | | | | | | | | |
|--------|-----------|-----------|--|-----------|-----------|-----------|--|---------|-----------|
| Letter | H | E | | H | A | D | | N | O |
| Number | 0.5 | 1.1 | | 0.5 | 2.0 | 0.8 | | 0.7 | 0.2 |
| Fact | $1.3-0.8$ | $1.6-0.5$ | | $1.7-1.2$ | $0.8+1.2$ | $1.3-0.5$ | | $2-1.3$ | $1.3-1.1$ |

| | | | | | | | | | |
|--------|-----------|-----------|-----------|-----------|--|-----------|-----------|--|--|
| Letter | H | A | R | E | | T | O | | |
| Number | 0.5 | 2.0 | 1.5 | 1.1 | | 0.4 | 0.2 | | |
| Fact | $1.4-0.9$ | $1.4+0.6$ | $0.6+0.9$ | $0.8+0.3$ | | $1.5-1.1$ | $1.7-1.5$ | | |

| | | | | | | | | | |
|--------|---------|-----------|-----------|-----------|-----------|--|-----------|-----------|-----------|
| Letter | S | P | E | A | K | | O | F | ! |
| Number | 0.1 | 1.8 | 1.1 | 2.0 | 1.3 | | 0.2 | 1.6 | 1.7 |
| Fact | $2-1.9$ | $0.9+0.9$ | $0.6+0.5$ | $1.1+0.9$ | $1.7-0.4$ | | $0.8-0.6$ | $1.2+0.4$ | $0.8+0.9$ |



1 LINE SYMMETRY BALLOON ANSWERS



NUMBER FILL IN PUZZLE 3 ANSWERS

| | | | | | | | | | | | |
|---|---|---|---|---|---|---|---|---|---|---|---|
| 5 | | 8 | | 9 | 4 | 1 | 0 | 2 | | | 9 |
| 6 | 7 | 0 | 3 | 7 | | 0 | | 3 | 2 | 6 | 5 |
| 2 | | 6 | | 4 | | 9 | | 7 | | | 4 |
| 9 | | 3 | 9 | 6 | 7 | 8 | | 6 | | | 7 |
| 7 | | | 7 | | 6 | | 2 | 5 | 9 | 7 | 1 |
| 1 | 5 | 9 | 3 | 0 | 4 | | 6 | | | 3 | |
| | 0 | | | | 9 | 7 | 0 | 2 | | 8 | |
| 4 | 6 | 7 | 1 | | | 2 | | | 3 | 6 | 5 |
| | 9 | | 8 | 7 | 1 | 9 | 7 | | 5 | | 9 |
| 9 | | | 0 | | 9 | | 0 | | 8 | | 3 |
| 6 | 2 | 7 | 9 | | 4 | | 5 | 3 | 7 | 8 | 4 |
| 3 | | | 1 | 8 | 7 | | | | 6 | | |

| 3 DIGITS | 4 DIGITS | | 5 DIGITS | | 6 DIGITS |
|----------|----------|-----------------|----------|-------|-------------------|
| 187 | 1098 | 6279 | 18091 | 53784 | 159304 |
| 260 | 1947 | 7386 | 23765 | 67037 | 562971 |
| 365 | 3265 | 7649 | 25971 | 87197 | |
| 705 | 4671 | 8063 | 35876 | 94102 | |
| 729 | 5069 | 9702 | 39678 | 95471 | |
| 963 | 5934 | 9746 | | | |
| 973 | | | | | |



TOTAL DIFFERENCE PUZZLE 5A ANSWERS

| | | |
|---|---|--|
| <p> $3.9 + 2.7 - 1.2 = 1.5$ </p> | <p> $6.8 + 4.5 - 2.3 = 2.2$ </p> | <p> $5.2 + 1.8 - 3.4 = 1.6$ </p> |
| <p> $3.5 + 0.8 - 2.7 = 1.9$ </p> | <p> $9.7 + 6.5 - 3.2 = 3.3$ </p> | <p> $11.3 + 4.7 - 6.6 = 1.9$ </p> |
| <p> $9.7 + 6.3 - 3.4 = 2.9$ </p> | <p> $5.3 + 2.6 - 2.7 = 0.1$ </p> | <p> $9.3 + 7.8 - 1.5 = 6.3$ </p> |



EASTER COLOUR BY NUMBER: CROSS ADDITION TO 20 COMPLETED

| | | | | | | | | | | | | | | | |
|------|------|------|------|------|------|------|------|------|------|------|------|------|------|------|------|
| 6+6 | 10+3 | 4+8 | 5+4 | 1+8 | 5+6 | 0+2 | 1+4 | 6+4 | 5+7 | 10+4 | 6+7 | 2+11 | 6+6 | 7+5 | 3+10 |
| 6+7 | 2+11 | 4+1 | 2+2 | 1+3 | 1+0 | 3+1 | 4+9 | 7+7 | 5+8 | 8+3 | 2+7 | 7+5 | 3+11 | 6+8 | 4+9 |
| 0+1 | 2+2 | 7+5 | 3+2 | 6+5 | 10+1 | 3+8 | 4+5 | 9+0 | 7+3 | 6+6 | 8+5 | 10+4 | 5+9 | 2+11 | 13+0 |
| 4+10 | 6+7 | 2+8 | 10+1 | 3+6 | 5+4 | 8+5 | 10+2 | 5+9 | 4+8 | 11+2 | 3+10 | 9+5 | 4+8 | 6+6 | 4+10 |
| 6+8 | 3+10 | 7+6 | 8+6 | 10+4 | 6+7 | 11+2 | 8+8 | 4+9 | 2+12 | 6+8 | 4+8 | 11+3 | 8+2 | 3+7 | 5+6 |
| 7+6 | 9+4 | 8+6 | 2+10 | 14+0 | 4+9 | 5+7 | 4+11 | 2+12 | 5+5 | 7+4 | 3+8 | 4+6 | 6+3 | 2+8 | 9+2 |
| 4+6 | 1+9 | 8+5 | 9+3 | 1+11 | 4+8 | 6+8 | 13+2 | 2+2 | 9+0 | 4+0 | 1+2 | 2+2 | 5+5 | 1+8 | 3+8 |
| 7+4 | 6+5 | 4+6 | 3+1 | 8+6 | 10+6 | 7+9 | 6+10 | 8+9 | 4+13 | 5+5 | 1+4 | 2+2 | 1+8 | 3+7 | 6+4 |
| 2+8 | 3+2 | 1+4 | 6+6 | 4+9 | 7+7 | 6+5 | 5+12 | 1+10 | 8+3 | 2+7 | 4+5 | 5+0 | 2+1 | 3+6 | 1+8 |
| 2+11 | 6+8 | 9+3 | 3+10 | 7+5 | 4+8 | 3+9 | 15+2 | 7+7 | 9+4 | 7+5 | 3+9 | 8+1 | 1+3 | 5+7 | 11+2 |
| 9+5 | 4+10 | 6+6 | 7+6 | 2+8 | 7+3 | 2+12 | 2+14 | 9+4 | 3+11 | 6+3 | 1+10 | 5+13 | 10+9 | 5+14 | 7+12 |
| 10+1 | 4+6 | 5+5 | 6+4 | 3+6 | 7+4 | 9+2 | 10+5 | 1+9 | 4+7 | 2+9 | 6+12 | 15+4 | 17+2 | 6+14 | 9+10 |
| 7+2 | 1+8 | 4+6 | 3+8 | 7+3 | 6+3 | 5+15 | 7+8 | 7+12 | 9+9 | 13+6 | 11+8 | 10+9 | 7+12 | 13+5 | 14+4 |
| 4+2 | 8+0 | 1+7 | 13+6 | 12+8 | 4+15 | 13+7 | 11+4 | 8+12 | 5+15 | 18+2 | 9+10 | 5+15 | 7+13 | 4+15 | 16+4 |
| 3+3 | 8+11 | 13+7 | 12+6 | 5+15 | 1+7 | 5+10 | 8+8 | 11+4 | 4+4 | 2+6 | 7+0 | 6+14 | 8+12 | 15+4 | 7+11 |
| 4+4 | 1+7 | 6+0 | 2+4 | 5+2 | 9+8 | 4+13 | 2+13 | 8+7 | 6+10 | 9+7 | 7+1 | 2+6 | 0+8 | 14+4 | 6+12 |
| 3+4 | 1+6 | 4+4 | 7+1 | 5+10 | 12+4 | 8+9 | 7+8 | 11+5 | 6+9 | 11+5 | 3+13 | 2+4 | 5+1 | 5+3 | 4+3 |
| 8+0 | 7+9 | 5+10 | 9+8 | 5+11 | 6+9 | 14+2 | 8+8 | 4+12 | 7+8 | 11+6 | 2+15 | 14+2 | 3+14 | 3+4 | 1+7 |
| 6+10 | 9+6 | 4+11 | 15+2 | 4+12 | 7+9 | 8+7 | 5+12 | 3+13 | 7+10 | 2+15 | 0+16 | 8+8 | 6+11 | 4+13 | 0+8 |
| 11+6 | 2+13 | 5+10 | 4+11 | 7+8 | 9+7 | 5+12 | 6+10 | 8+8 | 6+9 | 2+13 | 9+7 | 14+2 | 3+13 | 7+9 | 11+5 |

| KEY | | |
|---------------|----------------|----------------|
| 0 to 5 white | 6 to 8 orange | 9 to 11 gray |
| 12 to 14 blue | 15 to 17 black | 18 to 20 brown |



WHO CHOSE WHICH? ANSWERS

Sally, Captain, Tyger, Flame and Newton all chose a different number from the list below.



Sally




Captain



Tyger



Flame



Newton



Use the clues below to work out which number each of them chose, and which number was not chosen by any of them.

- Flame's number was even and it was not the smallest number.
- The salamander who chose the smallest number was not the Captain or Newton.
- Captain's number was odd, but it was not prime.
- Sally chose a number that was divisible by both 4 and 6.
- Newton's number is a multiple of 13.
- Tyger's number was larger than the average.

Sally 24

Captain 75

Tyger 47

Flame 36

Newton 52

The number 29 was not chosen by any of them.



MULTIPLYING BY TENTHS SHEET 1 ANSWERS

1) $\boxed{\times 0.4}$

| | | |
|---|---|------------|
| 2 | → | 0.8 |
| 5 | → | 2.0 |
| 7 | → | <u>2.8</u> |
| 3 | → | <u>1.2</u> |
| 9 | → | <u>3.6</u> |
| 6 | → | <u>2.4</u> |
| 4 | → | <u>1.6</u> |

2) $\boxed{\times 0.1}$

| | | |
|---|---|------------|
| 2 | → | 0.2 |
| 5 | → | <u>0.5</u> |
| 7 | → | <u>0.7</u> |
| 3 | → | <u>0.3</u> |
| 9 | → | <u>0.9</u> |
| 6 | → | <u>0.6</u> |
| 4 | → | <u>0.4</u> |

3) $\boxed{\times 0.2}$

| | | |
|---|---|------------|
| 2 | → | 0.4 |
| 5 | → | <u>1.0</u> |
| 7 | → | <u>1.4</u> |
| 3 | → | <u>0.6</u> |
| 9 | → | <u>1.8</u> |
| 6 | → | <u>1.2</u> |
| 4 | → | <u>0.8</u> |

4) $\boxed{\times 0.6}$

| | | |
|---|---|------------|
| 5 | → | <u>3.0</u> |
| 3 | → | <u>1.8</u> |
| 4 | → | <u>2.4</u> |
| 6 | → | <u>3.6</u> |
| 2 | → | <u>1.2</u> |
| 8 | → | <u>4.8</u> |
| 4 | → | <u>2.4</u> |

5) $\boxed{\times 0.8}$

| | | |
|---|---|------------|
| 5 | → | <u>4.0</u> |
| 3 | → | <u>2.4</u> |
| 4 | → | <u>3.2</u> |
| 6 | → | <u>4.8</u> |
| 2 | → | <u>1.6</u> |
| 8 | → | <u>6.4</u> |
| 4 | → | <u>3.2</u> |

6) $\boxed{\times 0.3}$

| | | |
|---|---|------------|
| 5 | → | <u>1.5</u> |
| 3 | → | <u>0.9</u> |
| 4 | → | <u>1.2</u> |
| 6 | → | <u>1.8</u> |
| 2 | → | <u>0.6</u> |
| 8 | → | <u>2.4</u> |
| 4 | → | <u>1.2</u> |

7) $\boxed{\times 0.9}$

| | | |
|---|---|------------|
| 8 | → | <u>7.2</u> |
| 3 | → | <u>2.7</u> |
| 9 | → | <u>8.1</u> |
| 6 | → | <u>5.4</u> |
| 4 | → | <u>3.6</u> |
| 7 | → | <u>6.3</u> |
| 4 | → | <u>3.6</u> |

8) $\boxed{\times 0.5}$

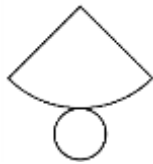

| | | |
|---|---|------------|
| 8 | → | <u>4</u> |
| 3 | → | <u>1.5</u> |
| 9 | → | <u>4.5</u> |
| 6 | → | <u>3.0</u> |
| 4 | → | <u>2.0</u> |
| 7 | → | <u>3.5</u> |
| 4 | → | <u>2</u> |

9) $\boxed{\times 0.7}$

| | | |
|---|---|------------|
| 8 | → | <u>5.6</u> |
| 3 | → | <u>2.1</u> |
| 9 | → | <u>6.3</u> |
| 6 | → | <u>4.2</u> |
| 4 | → | <u>2.8</u> |
| 7 | → | <u>4.9</u> |
| 4 | → | <u>2.8</u> |



MENTAL MATHS QUIZ 5:2 ANSWERS

| | | |
|-----|--|----------------------------------|
| 1) | Find $\frac{3}{4}$ of \$32. | \$24 |
| 2) | $1 - 0.92$ | 0.08 |
| 3) | Find the value of $(x - 6)/3$ if $x = 21$. | 5 |
| 4) | $10 \times 4 = 26 + \underline{\quad}$ | 14 |
| 5) | Round 6.283 to 1dp | 6.3 |
| 6) | What is the missing number? 7.3 <u> </u> 8.1 8.5 8.9 | 7.7 |
| 7) | What 3d shape is this the net for?  | cone |
| 8) | How many faces does a triangular prism have? | 5 |
| 9) | In a group of children, $\frac{3}{5}$ like to play tennis. If there are 25 children, how many do not like tennis? | 10 |
| 10) | Timmy and Tommy are two boys whose ages add up to 23. Timmy is 5 years older than Tommy. How old are they? | Tommy 9 Timmy 14 |
| 11) | How long is the line?  | 6.4cm |
| 12) | What is the mean of 13, 7, 8 and 4? | 8 |
| 13) | Which is the smallest ? 0.37 0.194 0.6 0.473 0.29 | 0.194 |
| 14) | $3\frac{2}{5} + 2\frac{1}{5}$ | $5\frac{3}{5}$ |
| 15) | How much is half of a quarter? | $\frac{1}{8}$ |
| 16) | A rectangular swimming pool measures $5\frac{1}{2}$ metres by $3\frac{1}{2}$ metres. What is the perimeter ? | 18m |
| 17) | What do angles around a point add up to? | 360° |
| 18) | The ratio of lions to tigers in a zoo is 1:3. If there are 4 lions, how many tigers will there be? | 12 |

