


MATH SALAMANDERS GRADE 1

MATHS GRAB PACK 3 ANSWERS



Here are the answers to all the sheets in our Grade 1 Maths Grab Pack 3.

CONTENTS			
1	Counting by 1s and 10s	7	Number Grid Challenge 1
2	Easter Colour by Number Two Chicks	8	Counting Objects to 50 Sheet 1A
3	Compare Numbers to 100 Sheet 3	9	Bar Graph Sheet 1B
4	Easter Codebreaker 1A	10	Mental Math Sheet 1:3
5	Who Chose Which Shape 1	11	Classify It! Game 1
6	Subtract with Tens Sheet 3		

Please give us feedback on our pack – both what you liked and what sheets you would like to see more of by leaving a comment on the link below.

<https://www.math-salamanders.com/maths-grab-packs.html>



COUNTING BY 1s AND 10s SHEET 1 ANSWERS

Each of these sequences goes up in either ones or tens.

Fill in the missing numbers.

1)

36	<u>37</u>	38	<u>39</u>	<u>40</u>	41	<u>42</u>	<u>43</u>
----	-----------	----	-----------	-----------	----	-----------	-----------

2)

14	24	<u>34</u>	<u>44</u>	54	<u>64</u>	<u>74</u>	84
----	----	-----------	-----------	----	-----------	-----------	----

3)

58	<u>59</u>	<u>60</u>	61	<u>62</u>	<u>63</u>	<u>64</u>	65
----	-----------	-----------	----	-----------	-----------	-----------	----

4)

22	<u>32</u>	42	<u>52</u>	<u>62</u>	72	<u>82</u>	<u>92</u>
----	-----------	----	-----------	-----------	----	-----------	-----------

5)

15	<u>25</u>	<u>35</u>	45	<u>55</u>	<u>65</u>	<u>75</u>	85
----	-----------	-----------	----	-----------	-----------	-----------	----

6)

18	<u>19</u>	<u>20</u>	<u>21</u>	22	<u>23</u>	24	<u>25</u>
----	-----------	-----------	-----------	----	-----------	----	-----------

7)


<u>86</u>	87	<u>88</u>	<u>89</u>	<u>90</u>	91	<u>92</u>	93
-----------	----	-----------	-----------	-----------	----	-----------	----

8)

<u>21</u>	31	<u>41</u>	<u>51</u>	61	<u>71</u>	<u>81</u>	91
-----------	----	-----------	-----------	----	-----------	-----------	----



EASTER COLOUR BY NUMBER TWO CHICKS COMPLETED



KEY			
1 pale yellow	2 orange	3 light brown	4 light orange
5 brown	6 light green	7 green	8 dark green



COMPARING NUMBERS TO 100 SHEET 3 ANSWERS

- | | | | | | | | |
|-----|----|---|----|-----|----|---|----|
| 1) | 9 | > | 7 | 11) | 20 | < | 30 |
| 2) | 12 | > | 5 | 12) | 13 | > | 11 |
| 3) | 14 | = | 14 | 13) | 10 | < | 17 |
| 4) | 11 | < | 15 | 14) | 22 | = | 22 |
| 5) | 12 | < | 13 | 15) | 12 | < | 19 |
| 6) | 17 | > | 8 | 16) | 30 | > | 10 |
| 7) | 10 | < | 14 | 17) | 60 | > | 50 |
| 8) | 16 | = | 16 | 18) | 50 | < | 70 |
| 9) | 20 | > | 16 | 19) | 23 | < | 27 |
| 10) | 14 | < | 18 | 20) | 29 | > | 21 |



EASTER CODEBREAKER 1A ANSWERS

ADDITION AND SUBTRACTION FACTS TO 20

Use the clues to work out the answer to the Easter joke.

A	B	C	D	E	H	I	L	M	O	R	S	T	U	W	Y	-	!
1	2	3	4	5	6	7	8	9	10	11	12	13	14	15	16	17	18

Why couldn't the Easter Egg Chicks watch tv?

Letter	B	E	C	A	U	S	E		T	H	-
Number	2	5	3	1	14	12	5		13	6	17
Fact	10-8	2+3	12-9	10-9	7+7	2+10	15-10		8+5	15-9	8+9

Letter	E	I	R		C	A	B	L	E		
Number	5	7	11		3	1	2	8	5		
Fact	13-8	11-4	3+8		17-14	8-7	15-13	2+6	14-9		

Letter	W	A	S		T	O	T	A	L	L	Y
Number	15	1	12		13	10	13	1	8	8	16
Fact	3+12	7-6	20-8		4+9	19-9	5+8	5-4	14-6	17-9	4+12

Letter	S	C	R	A	M	B	L	E	D	!	
Number	12	3	11	1	9	2	8	5	4	18	
Fact	5+7	12-9	8+3	8-7	16-7	11-9	20-12	2+3	12-8	10+8	



WHO CHOSE WHICH SHAPE? #1 ANSWERS

Each of the Salamanders chose a different shape from the table below.

Can you use the clues to work out who chose which shape?



Captain



Frazer



Tyger




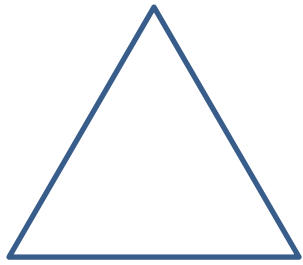


Sally

CLUES

- Captain's shape had sides that were not all the same size.
- Frazer's shape had 4 sides.
- Tyger's shape was not a square.
- Sally chose a curved shape.

Here are the shapes they chose.

A) 	B) 	C) 	D) 
Sally	Frazer	Captain	Tyger



SUBTRACT WITH TENS SHEET 3 ANSWERS

$1) \quad 30 - 20 = \underline{10}$

$2) \quad 40 - 10 = \underline{30}$

$3) \quad 60 - 30 = \underline{30}$

$4) \quad 50 - 20 = \underline{30}$

$5) \quad 30 - 30 = \underline{0}$

$6) \quad 80 - 10 = \underline{70}$

$7) \quad 70 - 20 = \underline{50}$

$8) \quad 100 - 0 = \underline{100}$

$9) \quad 50 - 40 = \underline{10}$

$10) \quad 80 - 30 = \underline{50}$

$11) \quad 60 - 40 = \underline{20}$

$12) \quad 90 - 20 = \underline{70}$

$13) \quad 20 - 20 = \underline{0}$

$14) \quad 40 - 0 = \underline{40}$

$15) \quad 40 - 20 = \underline{20}$

$16) \quad 80 - 40 = \underline{40}$

$17) \quad 70 - 30 = \underline{40}$

$18) \quad 100 - 30 = \underline{70}$

$19) \quad 90 - 10 = \underline{80}$

$20) \quad 60 - 50 = \underline{10}$

$21) \quad 40 - 30 = \underline{10}$

$22) \quad 90 - 40 = \underline{50}$

$23) \quad 100 - 50 = \underline{50}$

$24) \quad 70 - 60 = \underline{10}$

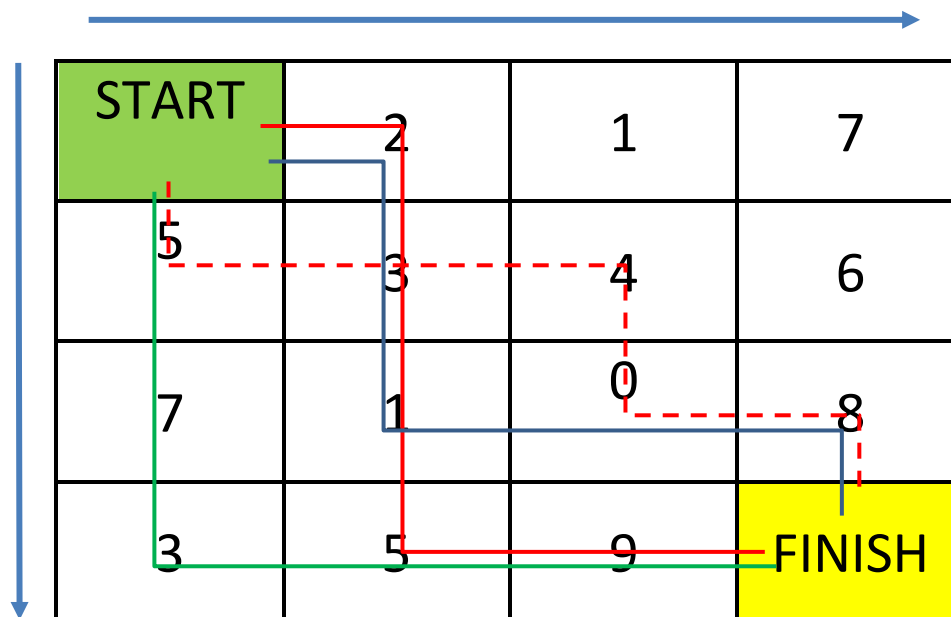
NUMBER GRID CHALLENGE 1: TARGET 20 ANSWERS

Start the maze with zero.

You have to finish the maze with a total of 20.

Your route can go **right** or **down** at each turn.

There are 2 possible routes. Can you find them? Marked in red.








Extra Challenge

Find the route with the highest total. Highest total is 29 (green route)

Find the route with the lowest total. Lowest total is 14 (blue route)

COUNTING OBJECTS TO 50 SHEET 1A ANSWERS



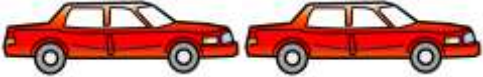
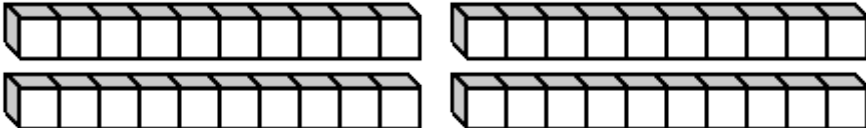
1)		<p>How many?</p> <p><u>23</u></p>
2)		<p>How many?</p> <p><u>35</u></p>
3)		<p>How many?</p> <p><u>29</u></p>
4)		<p>How many?</p> <p><u>42</u></p>
5)		<p>How many?</p> <p><u>38</u></p>



BAR GRAPHS SHEET 1B - PET SURVEY ANSWERS

- 1) Which pet got the most votes? rabbit
- 2) How many votes did the dog get? 7
- 3) How many votes did the fish get? 4
- 4) How many votes did the hamster get? 1
- 5) How many votes did the bird get? 3
- 6) How many votes did the cat get? 5
- 7) Which pet got the least votes? hamster

MENTAL MATH QUIZ 1:3 ANSWERS

1)	10 plus 8	18
2)	Circle all the even numbers. 17 15 8 9 11 10	
3)	What is the next number? 5, 7, 9, 11, 13, ___	15
4)	Write the number forty-five.	45
5)	Tick the triangle. 	
6)	How much money? 	35c
7)	I have \$12. I spend \$8. How much money do I have left?	\$4
8)	13 subtract 0	13
9)	What number comes after 69?	70
10)	A toy car costs \$7. How much do two cars cost? 	\$14
11)	The date is June 26. What was the date three days ago?	June 23
12)	How many cubes? 	40

