


MATH SALAMANDERS YEAR 1

MATHS GRAB PACK 3 ANSWERS



Here are the answers to all the sheets in our Year 1 Maths Grab Pack 3.

CONTENTS – ANSWER SHEETS			
1	Easter Colour By Number Rabbit and Egg	7	Domino Addition Sheet 4
2	Addition Sentences to 10 Sheet 4	8	How Many cm Sheet 1
3	Count 5p and 1p Sheet 2	9	Rocket + and – within 10 Sheet 2
4	Count and Colour to 20 Sheet 2	10	Colour By Number Rabbit in Grass
5	Name and Trace 3		
6	One Less Sheet 8		

Please give us feedback on our pack – both what you liked and what sheets you would like to see more of by leaving a comment on the link below.

<https://www.math-salamanders.com/maths-grab-packs.html>



EASTER COLOUR BY NUMBER: RABBIT WITH EGG COMPLETED

10	10	10	11	11	11	10	10	10	10	10	11	11	11	10	10
10	10	10	11	11	12	11	10	10	10	11	12	11	11	10	10
10	10	11	11	11	10	12	11	10	11	12	12	11	11	11	10
10	10	11	11	11	10	10	11	11	11	10	10	11	11	11	10
10	10	11	11	11	10	10	11	11	11	10	10	11	11	11	10
10	11	11	11	12	10	11	11	12	11	11	10	12	11	11	11
10	10	11	12	10	11	11	17	12	17	11	11	10	12	11	10
10	10	10	10	10	11	11	11	12	11	11	11	10	10	10	10
10	10	10	10	10	10	11	11	13	11	11	10	10	10	10	10
10	10	10	11	11	11	11	11	12	11	11	10	10	10	10	10
10	10	10	11	11	14	14	14	11	11	11	11	10	10	10	10
10	10	10	11	14	14	14	15	15	14	11	11	10	10	10	10
10	11	10	10	14	15	15	15	14	16	16	11	10	10	10	10
11	13	11	10	15	15	14	14	14	16	14	14	10	11	11	10
13	13	11	11	14	14	14	16	16	14	14	16	10	11	13	11
11	11	11	11	14	16	16	16	14	14	16	16	14	11	13	13
10	11	11	13	16	16	14	14	14	16	16	14	14	13	11	10
10	10	11	13	13	14	14	16	16	16	14	14	15	11	10	10
10	10	10	11	13	14	16	16	14	14	14	15	13	11	10	10
10	10	10	10	13	13	10	14	14	14	15	14	11	10	10	10



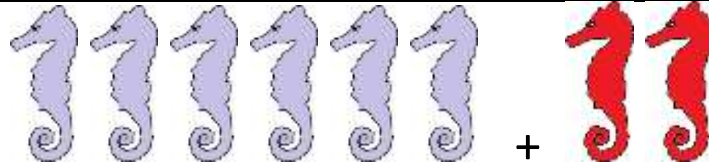
ADDITION SENTENCES TO 10 SHEET 4 ANSWERS

1)



$$4 + 3 = 7$$

2)



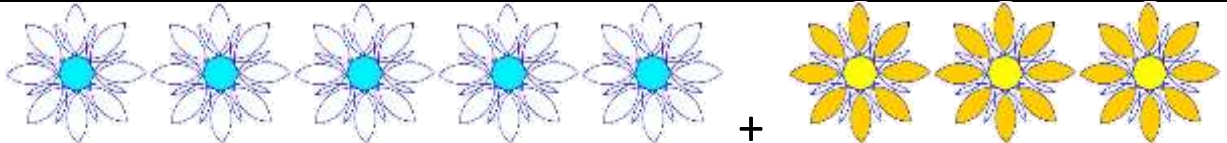
$$\underline{6} + \underline{2} = \underline{8}$$

3)




$$\underline{2} + \underline{5} = \underline{7}$$

4)



$$\underline{5} + \underline{3} = \underline{8}$$

5)



$$\underline{4} + \underline{5} = \underline{9}$$

6)









$$\underline{1} + \underline{7} = \underline{8}$$



COUNTING MONEY: 5p AND 1p COINS

SHEET 2 ANSWERS

	<u>8</u> p
	<u>13</u> p
	<u>16</u> p
	<u>14</u> p
	<u>18</u> p
	<u>23</u> p

Fill in the correct amounts, remember to count the 5p coins first.

$$1\text{p} + 5\text{p} + 1\text{p} = \underline{7} \text{ p}$$

$$5\text{p} + 1\text{p} + 1\text{p} + 5\text{p} = \underline{12} \text{ p}$$

$$1\text{p} + 1\text{p} + 5\text{p} + 1\text{p} = \underline{8} \text{ p}$$

$$5\text{p} + 1\text{p} + 5\text{p} + 5\text{p} = \underline{16} \text{ p}$$

$$1\text{p} + 5\text{p} + 1\text{p} + 1\text{p} + 5\text{p} = \underline{13} \text{ p}$$

$$5\text{p} + 1\text{p} + 1\text{p} + 5\text{p} + 5\text{p} = \underline{17} \text{ p}$$


$$1\text{p} + 5\text{p} + 5\text{p} + 1\text{p} + 5\text{p} + 1\text{p} = \underline{18} \text{ p}$$

$$5\text{p} + 1\text{p} + 5\text{p} + 5\text{p} + 5\text{p} = \underline{21} \text{ p}$$



















COUNT AND COLOUR TO 20 SHEET 2 ANSWERS

	Tens frame	How many?
1)		14
2)		12
3)		18
4)		15
5)		11
6)		16
7)		20



ONE LESS SHEET 8

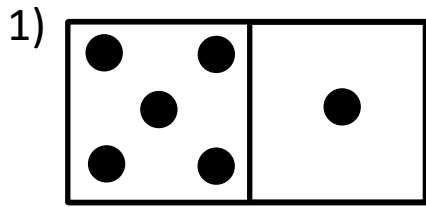
Shade the card that has **one less** than the first card.

1)				
2)				
3)				
4)				

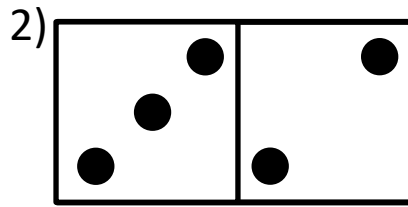


DOMINO ADDITION SHEET 4 ANSWERS

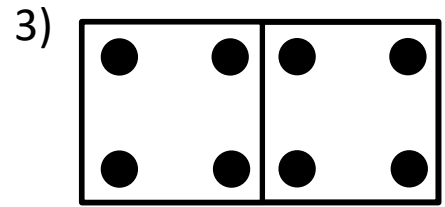
Count the number of dots on each domino and fill in the total.



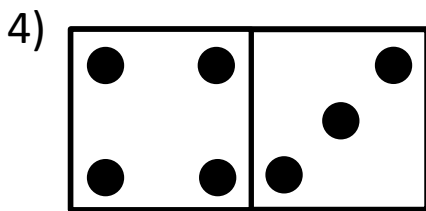
$$\underline{5} + \underline{1} = \underline{6}$$



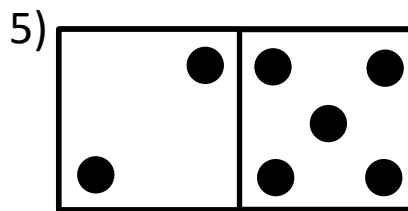
$$\underline{3} + \underline{2} = \underline{5}$$



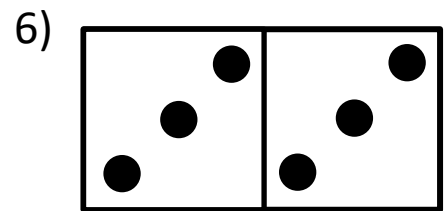
$$\underline{4} + \underline{4} = \underline{8}$$



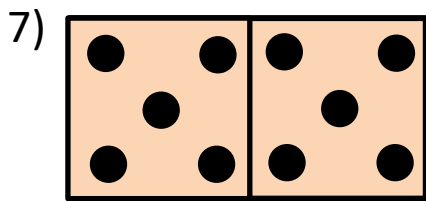
$$\underline{4} + \underline{3} = \underline{7}$$



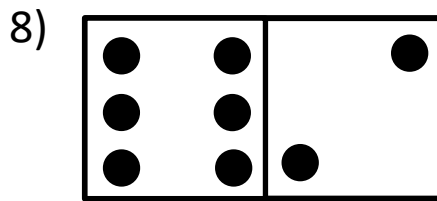
$$\underline{2} + \underline{5} = \underline{7}$$




$$\underline{3} + \underline{3} = \underline{6}$$



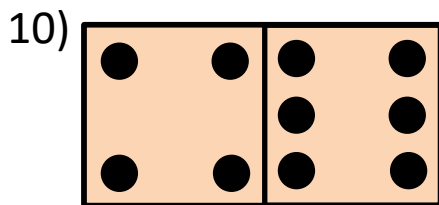
$$\underline{5} + \underline{5} = \underline{10}$$




$$\underline{6} + \underline{2} = \underline{8}$$



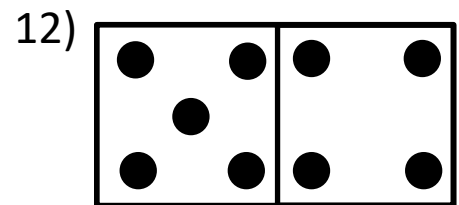
$$\underline{3} + \underline{6} = \underline{9}$$



$$\underline{4} + \underline{6} = \underline{10}$$




$$\underline{6} + \underline{5} = \underline{11}$$

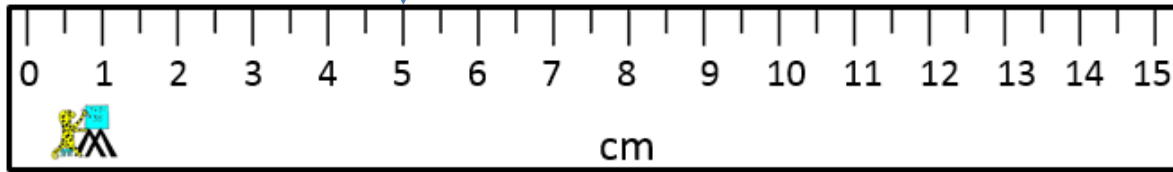
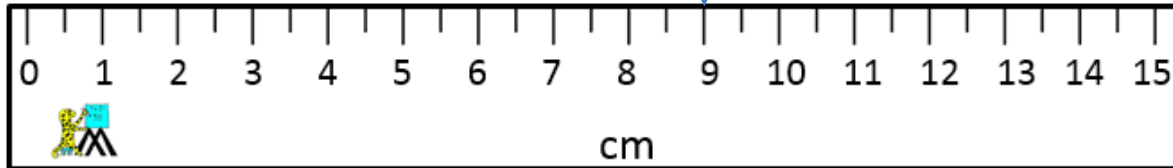
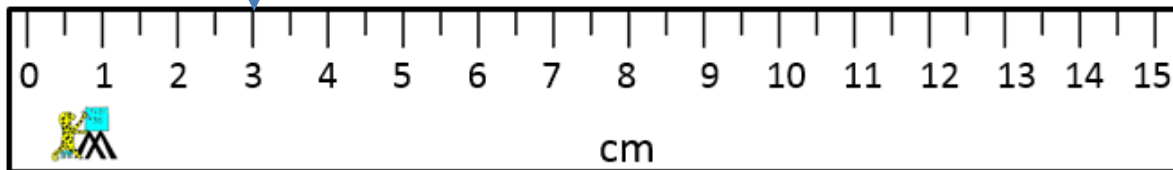
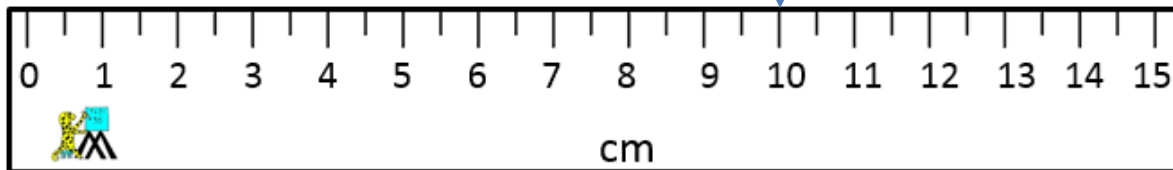
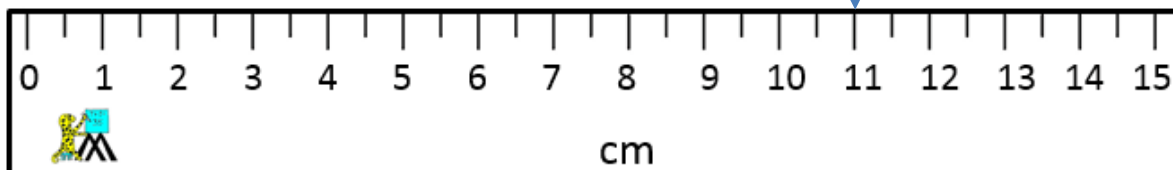
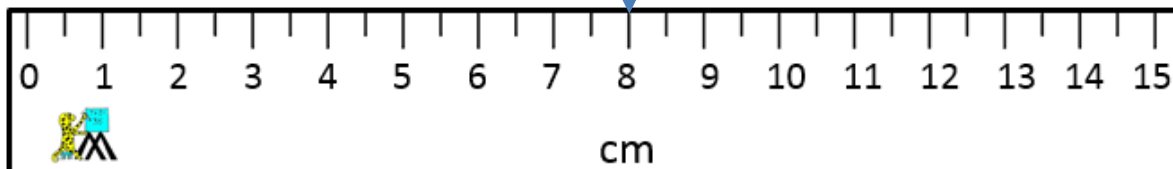


$$\underline{5} + \underline{4} = \underline{9}$$

Shade the dominoes which have a total of 10.



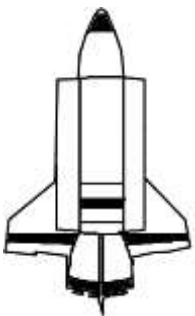
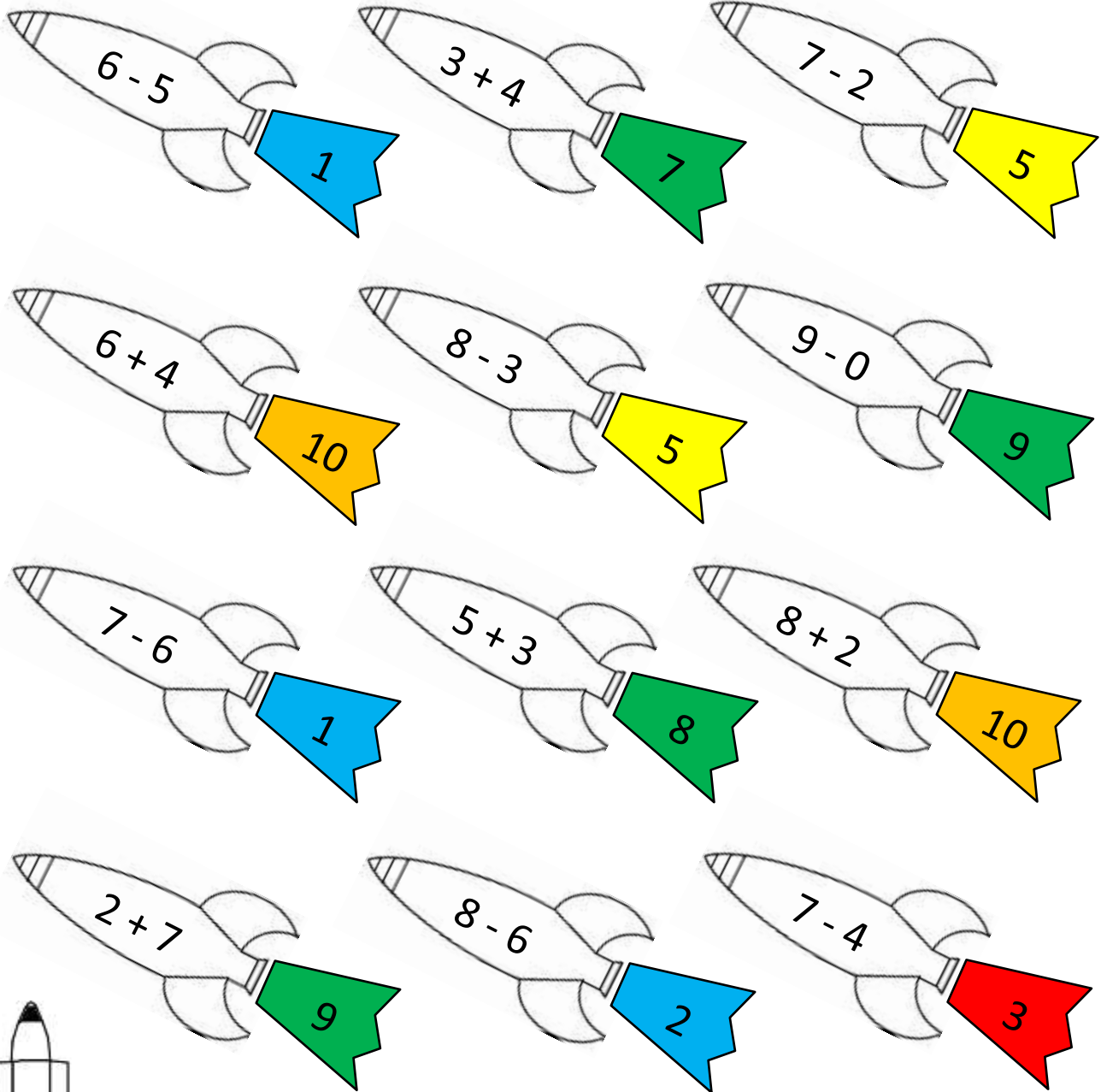
HOW MANY CM SHEET 1 ANSWERS

5 cm9 cm3 cm10 cm11 cm8 cm


ROCKET ADDITION & SUBTRACTION TO 10

SHEET 2 ANSWERS

Shade in the answers from 0 to 2 blue, 3 to 4 red, 5 to 6 yellow, 7 to 9 green, 10 orange.



EASTER COLOUR BY NUMBER RABBIT IN GRASS COMPLETED



KEY

1 pale yellow	2 orange	3 light brown	4 light orange
5 brown	6 light green	7 green	8 dark green

