


MATH SALAMANDERS YEAR 2

MATHS GRAB PACK 4 ANSWERS



Here are the answers to all the sheets in our Year 2 Maths Grab Pack 4.

CONTENTS			
1	Count and Colour Ones and Tens #3	7	Problem Solving Captain's Party
2	Place It Right #1	8	Share the Treasure 1
3	Easter Egg Shape Colour in 2	9	Counting Money to £1 Sheet 1
4	Easter Codebreaker 1B	10	Mental Maths Sheet 2:4
5	Picture Graphs 1B		
6	Count the Objects to 30 Sheet 2A		

Please give us feedback on our pack – both what you liked and what sheets you would like to see more of by leaving a comment on the link below.

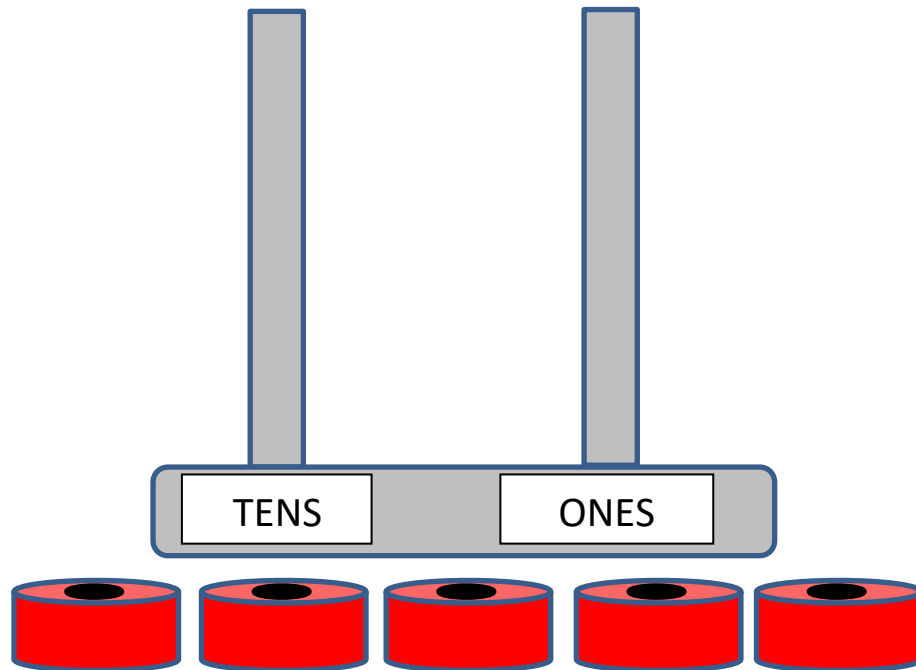
<https://www.math-salamanders.com/maths-grab-packs.html>



COUNT AND COLOUR ONES AND TENS SHEET 3 ANSWERS

1)			Colour 34
2)			Colour 27
3)			Colour 43
4)			Colour 18
5)			Colour 57
6)			Colour 65

PLACE IT RIGHT 1 ANSWERS



- Use your place value skills to put the beads in the correct place.
- **You have to use all 5 beads each time.**


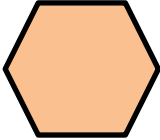
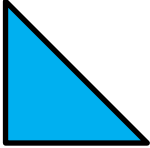



- 1) What is the largest 2-digit number you can make? 50
- 2) What is the smallest 2-digit number you can make? 14
- 3) Make a number between 21 and 25. 23
- 4) Write down all the numbers you can make between 20 and 50.

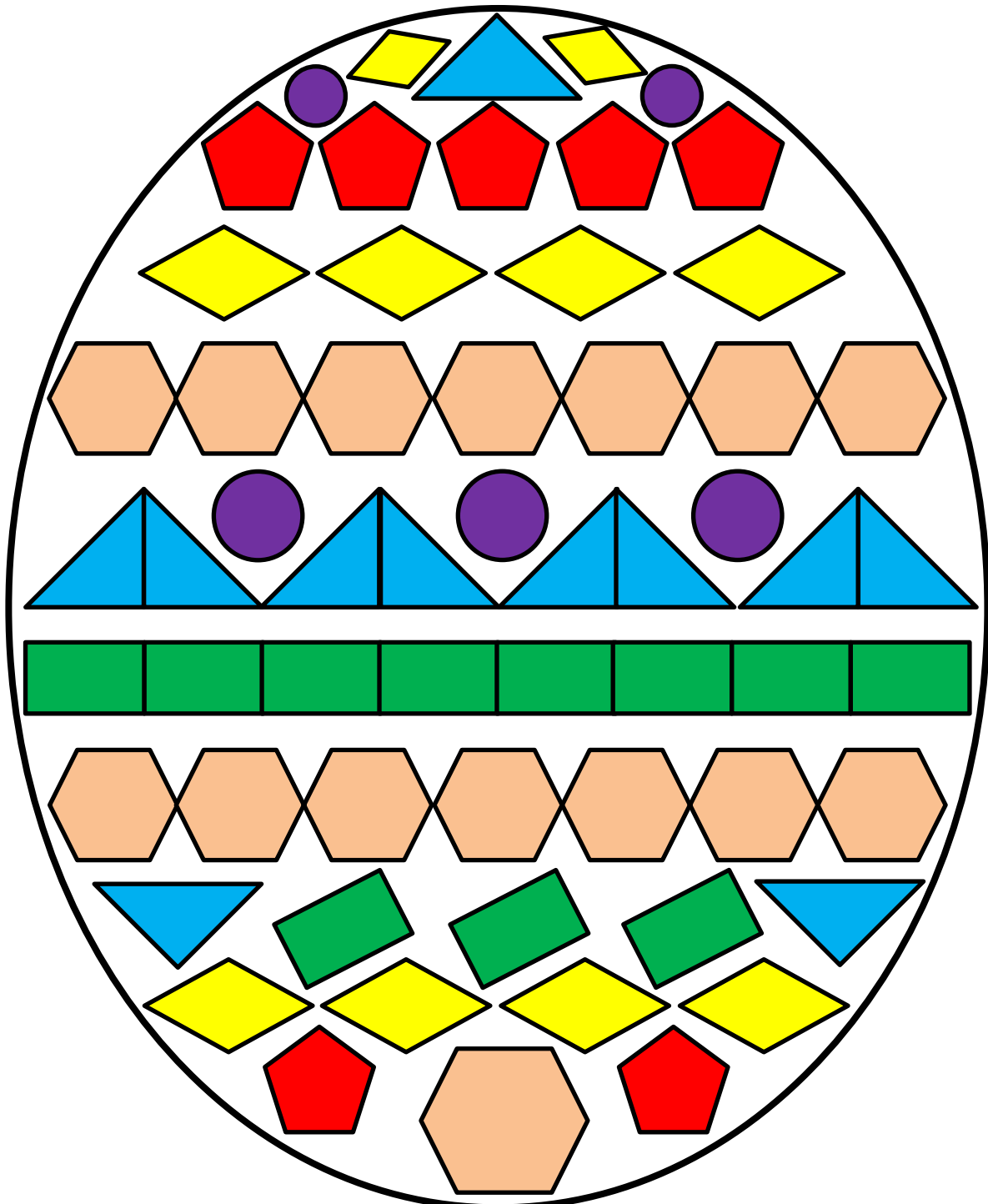
23 32 41 50

- 5) Make a number as close to 30 as you can. 32
- 6) Which of these numbers can you make using all 5 beads? Tick them

21 32 41 24 14 5 33

EASTER EGG SHAPE COLOUR IN 2 COMPLETED

Red	Pink	Blue	Green	Yellow	Purple
					



EASTER CODEBREAKER 1B ANSWERS

ADDITION AND SUBTRACTION FACTS TO 20

Use the clues to work out the answer to the Easter joke.

A	B	C	E	G	H	I	K	N	O	P	Q	S	T	U	!
20	14	7	3	5	9	11	2	6	8	12	15	19	1	18	10

Why did the duck give up making the Easter dessert?

Letter	B	E	C	A	U	S	E		H	E
Number	14	3	7	20	18	19	3		9	3
Fact	4+10	12-9	15-8	11+9	3+15	15+4	11-8		14-5	18-15



Letter	K	E	P	T		O	N			
Number	2	3	12	1		8	6			
Fact	9-7	11-8	3+9	10-9		16-8	13-7			



Letter	Q	U	A	C	K	I	N	G		
Number	15	18	20	7	2	11	6	5		
Fact	9+6	6+12	13+7	3+4	11-9	18-7	12-6	8-3		



Letter	T	H	E		E	G	G	S	!	
Number	1	9	3		3	5	5	19	10	
Fact	7-6	16-7	15-12		8-5	12-7	2+3	9+10	18-8	

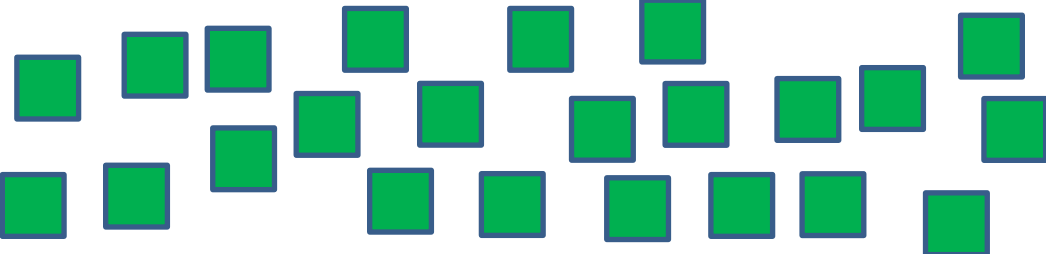



COUNTING OBJECTS TO 30 SHEET 2A ANSWERS

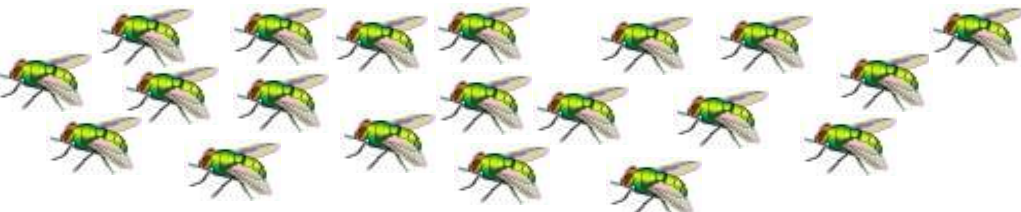

1)  How many?
14 

2)  How many?
13 

3)  How many?
16 

4)  How many?
23 

5)  How many?
18 

6)  How many?
20 



PICTURE GRAPHS 1B - WEATHER SURVEY ANSWERS

- 1) How many days was it sunny? 8
- 2) How many days was it cloudy? 10
- 3) How many days was it rainy? 6
- 4) How many days was it snowy? 4
- 5) How many days was it stormy? 3
- 6) What was the most common weather? cloudy
- 7) What was the least common weather? stormy
- 8) Which sort of weather do you like best? _____

PROBLEM SOLVING - CAPTAIN'S PARTY ANSWERS

<p>1) At the party, 6 guests come during the first hour and 5 more guests come during the second hour.</p>	<p>How many guests come in total? 11 guests</p>
<p>2) Captain Salamander gets 4 presents to open in the morning, and 6 more to open in the afternoon.</p>	<p>How many presents does he get in total? 10 presents</p>
<p>3) Captain Salamander's cake has 3 blue candles, 4 red candles and 5 white candles.</p>	<p>How many candles are there altogether? 12 candles</p>
<p>4) The cake is cut into 12 slices. Captain and his friends eat 5 of the slices.</p>	<p>How many slices are left? 7 slices</p>
<p>5) Captain Salamander gets two bags of jelly frogs. The first bag has 8 jelly frogs in and the second bag has 7 jelly frogs in.</p>	<p>How many jelly frogs does he get in total? 15 jelly frogs</p>
<p>6) In the game of pass the parcel, there are 13 presents. After the 4th round, four of the presents have gone.</p>	<p>How many are left in the parcel? 9 presents</p>







SHARE THE TREASURE 1 ANSWERS

Captain Salamander and his crew have found 20 bars of gold.

His three crew share the bars into 4 equal piles.

How many bars are in each pile?

There are 5 bars in each pile.





			
Captain	Bert	Barry	Bill



Captain decides that everyone should get a different amount.








- The Captain should have the most bars.
- Bert should have 1 fewer bar than him.
- Barry should have the least bars (because he is lazy).
- Bill should have 1 more bar than Barry.

Who should get which pile? Write the name above the pile.

Bert	Barry	Bill	Captain
			

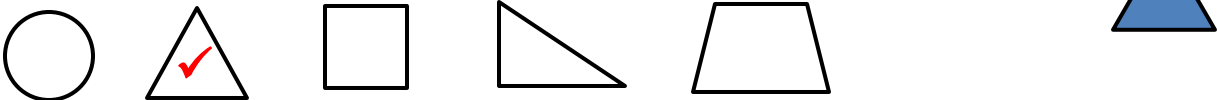





COUNTING MONEY TO £1 SHEET 1 ANSWERS

	62p
	71p
	56p
	57p
	85p
	87p
	73p



MENTAL MATHS QUIZ 2:4 ANSWERS

1)	16 - 4	12
2)	Half of 8	4
3)	Which month comes after May? January March June October	June
4)	Tick the object below which has the same shapes as this: 	
5)	How much money? 	42p
6)	How many sides does this shape have? 	6
7)	Circle the 3rd number in the list below: 52 27 18 46 50 14 71	
8)	Bob is 3 years older than Sam. If Sam is 11 years old, how old is Bob?	14 years old
9)	A pack of pencils has 4 pencils. I buy 3 packs. How many pencils? 	12
10)	Write down the number one hundred and seventy-eight.	178
11)	What is the next number: 2, 4, 6, 8, 10, _____	12
12)	Today is Friday. What will the day be in 2 days' time? Saturday Monday Thursday Sunday	Sunday

