

Name

Date



ADDITION SUBTRACTION PROBLEMS UP TO 100 SHEET 2A

















Work out these addition and subtraction word problems with no regrouping.

		WORKING OUT
1)	<p>There are 46 walking in the park.</p> <p>22 more come into the park.</p> <p>How many are there in total? _____</p>	
2)	<p>I pick 65 .</p> <p>I eat 12 .</p> <p>How many do I have left? _____</p>	
3)	<p>Sally reads 53 .</p> <p>Captain reads 21 .</p> <p>How many more books did Sally read? _____</p>	
4)	<p>There are 62 in a pond.</p> <p>There are 23 more in the grass.</p> <p>How many are there altogether? _____</p>	
5)	<p>A pie shop has 75 .</p> <p>I buy 34 from the shop.</p> <p>How many are left in the shop? _____</p>	
6)	<p>Newton builds 43 on the beach.</p> <p>Quadra builds 35 .</p> <p>What is the sum? _____</p>	



ADDITION SUBTRACTION PROBLEMS UP TO 100

SHEET 2A ANSWERS

		WORKING OUT
1)	There are 46  walking in the park. 22 more  come into the park. How many  are there in total? <u>68</u>	<u>$46 + 22 = 68$</u>
2)	I pick 65  . I eat 12  . How many  do I have left? <u>53</u>	<u>$65 - 12 = 53$</u>
3)	Sally reads 53  . Captain reads 21  . How many more books did Sally read? <u>32</u>	<u>$53 - 21 = 32$</u>
4)	There are 62  in a pond. There are 23 more  in the grass. How many  are there altogether? <u>85</u>	<u>$62 + 23 = 85$</u>
5)	A pie shop has 75  . I buy 34  from the shop. How many  are left in the shop? <u>41</u>	<u>$75 - 34 = 41$</u>
6)	Newton builds 43  on the beach. Quadra builds 35  . What is the sum? <u>78</u>	<u>$43 + 35 = 78$</u>