

Name _____

Date _____



ADDITION SUBTRACTION PROBLEMS UP TO 100 SHEET 2B

Work out the answers to these addition and subtraction word problems.

		WORKING OUT
1)	<p>There are 46 walking in the park.</p> <p>27 more come into the park.</p> <p>How many are there in total? _____</p>	
2)	<p>I pick 65 .</p> <p>I eat 18 .</p> <p>How many do I have left? _____</p>	
3)	<p>Sally reads 53 .</p> <p>Captain reads 24 .</p> <p>How many more books did Sally read? _____</p>	
4)	<p>There are 62 in a pond.</p> <p>There are 29 more in the grass.</p> <p>How many are there altogether? _____</p>	
5)	<p>A pie shop has 75 .</p> <p>I buy 38 from the shop.</p> <p>How many are left in the shop? _____</p>	
6)	<p>Newton builds 47 on the beach.</p> <p>Quadra builds 35 .</p> <p>What is the sum? _____</p>	

















Name

Date



ADDITION SUBTRACTION PROBLEMS UP TO 100

SHEET 2B ANSWERS

		WORKING OUT
1)	There are 46  walking in the park. 27 more  come into the park. How many  are there in total? <u>73</u>	<u>$46 + 27 = 73$</u>
2)	I pick 65  . I eat 18  . How many  do I have left? <u>47</u>	<u>$65 - 18 = 47$</u>
3)	Sally reads 53  . Captain reads 24  . How many more books did Sally read? <u>29</u>	<u>$53 - 24 = 29$</u>
4)	There are 62  in a pond. There are 29 more  in the grass. How many  are there altogether? <u>91</u>	<u>$62 + 29 = 91$</u>
5)	A pie shop has 75  . I buy 38  from the shop. How many  are left in the shop? <u>37</u>	<u>$75 - 38 = 37$</u>
6)	Newton builds 47  on the beach. Quadra builds 35  . What is the sum? <u>82</u>	<u>$47 + 35 = 82$</u>