
















Name \_\_\_\_\_

Date \_\_\_\_\_



## ADDITION SUBTRACTION PROBLEMS UP TO 100 SHEET 3A
















Work out these addition and subtraction word problems with no regrouping.

		WORKING OUT
1)	<p>There were 86  walking on the ground.</p> <p>45  got squashed.</p> <p>How many  are left? _____</p>	
2)	<p>I have \$95.</p> <p>I spend \$43.</p> <p>How much do I have left? \$ _____</p>	
3)	<p>There are 45  in a pod.</p> <p>There are 32  in another pod.</p> <p>How many  are there in all? _____</p>	
4)	<p>There are 62  in a farmyard.</p> <p>24 more  come along.</p> <p>How many  are there in total? _____</p>	
5)	<p>A shop has 78 .</p> <p>It sells 58 .</p> <p>How many  does it have left? _____</p>	
6)	<p>There are 52  on one tree.</p> <p>There are 45  on another tree.</p> <p>How many  altogether on both trees? _____</p>	



# ADDITION SUBTRACTION PROBLEMS UP TO 100

## SHEET 3A ANSWERS

		WORKING OUT
1)	<p>There were 86  walking on the ground.</p> <p>45  got squashed.</p> <p>How many  are left? <u>41</u></p>	<u><math>86 - 45 = 41</math></u>
2)	<p>I have \$95.</p> <p>I spend \$43.</p> <p>How much do I have left? \$ <u>\$52</u></p>	<u><math>\\$95 - \\$43 = \\$52</math></u>
3)	<p>There are 45  in a pod.</p> <p>There are 32  in another pod.</p> <p>How many  are there in all? <u>77</u></p>	<u><math>45 + 32 = 77</math></u>
4)	<p>There are 62  in a farmyard.</p> <p>24 more  come along.</p> <p>How many  are there in total? <u>86</u></p>	<u><math>62 + 24 = 86</math></u>
5)	<p>A shop has 78 .</p> <p>It sells 58 .</p> <p>How many  does it have left? <u>20</u></p>	<u><math>78 - 58 = 20</math></u>
6)	<p>There are 52  on one tree.</p> <p>There are 45  on another tree.</p> <p>How many  altogether on both trees? <u>97</u></p>	<u><math>52 + 45 = 97</math></u>