
















Name

Date



## ADDITION SUBTRACTION PROBLEMS UP TO 100 SHEET 3B
















Work out the answers to these addition and subtraction word problems.

		WORKING OUT
1)	<p>There were 86  walking on the ground.</p> <p>49  got squashed.</p> <p>How many  are left? _____</p>	
2)	<p>I have \$95.</p> <p>I spend \$43.</p> <p>How much do I have left? \$ _____</p>	
3)	<p>There are 45  in a pod.</p> <p>There are 38  in another pod.</p> <p>How many  are there in all? _____</p>	
4)	<p>There are 62  in a farmyard.</p> <p>29 more  come along.</p> <p>How many  are there in total? _____</p>	
5)	<p>A shop has 71 .</p> <p>It sells 58 .</p> <p>How many  does it have left? _____</p>	
6)	<p>There are 49  on one tree.</p> <p>There are 45  on another tree.</p> <p>How many  altogether on both trees? _____</p>	



# ADDITION SUBTRACTION PROBLEMS UP TO 100

## SHEET 3B ANSWERS

		WORKING OUT
1)	<p>There were 86  walking on the ground.</p> <p>49  got squashed.</p> <p>How many  are left? <u>37</u></p>	<u><math>86 - 49 = 37</math></u>
2)	<p>I have \$95.</p> <p>I spend \$43.</p> <p>How much do I have left? \$ <u>\$52</u></p>	<u><math>\\$95 - \\$43 = \\$52</math></u>
3)	<p>There are 45  in a pod.</p> <p>There are 38  in another pod.</p> <p>How many  are there in all? <u>83</u></p>	<u><math>45 + 38 = 83</math></u>
4)	<p>There are 62  in a farmyard.</p> <p>29 more  come along.</p> <p>How many  are there in total? <u>91</u></p>	<u><math>62 + 29 = 91</math></u>
5)	<p>A shop has 71 .</p> <p>It sells 58 .</p> <p>How many  does it have left? <u>13</u></p>	<u><math>71 - 58 = 13</math></u>
6)	<p>There are 49  on one tree.</p> <p>There are 45  on another tree.</p> <p>How many  altogether on both trees? <u>94</u></p>	<u><math>49 + 45 = 94</math></u>