

















Name

Date



ADDITION SUBTRACTION PROBLEMS UP TO 100 SHEET 4A

Try these 2-step addition and subtraction word problems with no regrouping.

		WORKING OUT
1)	<p>Sally picks 25  . Tyger picks 32  .</p> <p>They use 10  to make an apple pie.</p> <p>How many  are left? _____</p>	
2)	<p>A sports store sells 35  on Monday. It sells 21  on Tuesday and 30  on Wednesday.</p> <p>How many  has it sold altogether? _____</p>	
3)	<p>Tyger plants 68  .</p> <p>32 of the  are red . 14 of the  are blue.</p> <p>How many  are not red or blue? _____</p>	
4)	<p>There are 52  in a tree.</p> <p>25 more  fly into the tree.</p> <p>A loud noise scares 12  away.</p> <p>How many  are left in the tree? _____</p>	
5)	<p>Alyssa is 14 years older than Brianna.</p> <p>Brianna is 35 years younger than Clara who is 58 years old.</p> <p>How old is Alyssa? _____ years old</p>	



ADDITION SUBTRACTION PROBLEMS UP TO 100

SHEET 4A ANSWERS

		WORKING OUT
1)	<p>Sally picks 25 . Tyger picks 32 .</p> <p>They use 10 to make an apple pie.</p> <p>How many are left? <u>47</u></p>	$\underline{25 + 32 = 57}$ $\underline{57 - 10 = 47}$
2)	<p>A sports store sells 35 on Monday. It sells 21 on Tuesday and 30 on Wednesday.</p> <p>How many has it sold altogether? <u>86</u></p>	$\underline{35 + 21 = 56}$ $\underline{56 + 30 = 86}$
3)	<p>Tyger plants 68 .</p> <p>32 of the are red . 14 of the are blue.</p> <p>How many are not red or blue? <u>22</u></p>	$\underline{32 + 14 = 46}$ $\underline{68 - 46 = 22}$ <p style="text-align: center;"><u>OR</u></p> $\underline{68 - 32 = 36}$ $\underline{36 - 14 = 22}$
4)	<p>There are 52 in a tree.</p> <p>25 more fly into the tree.</p> <p>A loud noise scares 12 away.</p> <p>How many are left in the tree? <u>65</u></p>	$\underline{52 + 25 = 77}$ $\underline{77 - 12 = 65}$
5)	<p>Alyssa is 14 years older than Brianna.</p> <p>Brianna is 35 years younger than Clara who is 58 years old.</p> <p>How old is Alyssa? <u>37 years old</u></p>	$\underline{58 - 35 = 23}$ $\underline{23 + 14 = 37}$