

















Name

Date



ADDITION SUBTRACTION PROBLEMS UP TO 100 SHEET 4B

Try these 2-step addition and subtraction word problems.

		WORKING OUT
1)	<p>Sally picks 25  . Tyger picks 38  .</p> <p>They use 9  to make an apple pie.</p> <p>How many  are left? _____</p>	
2)	<p>A sports store sells 35  on Monday. It sells 24  on Tuesday and 32  on Wednesday.</p> <p>How many  has it sold altogether? _____</p>	
3)	<p>Tyger plants 61  .</p> <p>32 of the  are red . 14 of the  are blue.</p> <p>How many  are not red or blue? _____</p>	
4)	<p>There are 52  in a tree.</p> <p>28 more  fly into the tree.</p> <p>A loud noise scares 12  away.</p> <p>How many  are left in the tree? _____</p>	
5)	<p>Alice is 14 years older than Brianna. Brianna is 35 years younger than Clara who is 53 years old.</p> <p>How old is Alice? _____ years old.</p>	



ADDITION SUBTRACTION PROBLEMS UP TO 100

SHEET 4B ANSWERS

		WORKING OUT
1)	<p>Sally picks 25 . Tyger picks 38 .</p> <p>They use 9 to make an apple pie.</p> <p>How many are left? <u>54</u></p>	$\underline{25 + 38 = 63}$ $\underline{63 - 9 = 54}$
2)	<p>A sports store sells 35 on Monday. It sells 24 on Tuesday and 32 on Wednesday.</p> <p>How many has it sold altogether? <u>91</u></p>	$\underline{35 + 24 = 59}$ $\underline{59 + 32 = 91}$
3)	<p>Tyger plants 61 .</p> <p>32 of the are red . 14 of the are blue.</p> <p>How many are not red or blue? <u>15</u></p>	$\underline{32 + 14 = 46}$ $\underline{61 - 46 = 15}$ <p style="text-align: center;"><u>OR</u></p> $\underline{61 - 32 = 29}$ $\underline{29 - 14 = 15}$
4)	<p>There are 52 in a tree.</p> <p>28 more fly into the tree.</p> <p>A loud noise scares 12 away.</p> <p>How many are left in the tree? <u>68</u></p>	$\underline{52 + 28 = 80}$ $\underline{80 - 12 = 68}$
5)	<p>Alice is 14 years older than Brianna. Brianna is 35 years younger than Clara who is 53 years old.</p> <p>How old is Alice? <u>32 years old.</u></p>	$\underline{53 - 35 = 18}$ $\underline{18 + 14 = 32}$