













Name

Date



## ADDITION SUBTRACTION PROBLEMS UP TO 100 SHEET 5A













Try these 2-step addition and subtraction word problems with no regrouping.

		WORKING OUT
1)	<p>There are 63  in a field. 24 more  join them. A loud noise scares 52  away.</p> <p>How many  are there left? _____</p>	
2)	<p>A sport store has 88 .</p> <p>It sells 23  in one week and 34 more  in the next week.</p> <p>How many  does it have now? _____</p>	
3)	<p>Tyger and Quadra go crabbing. Tyger catches 42 . Quadra catches 27 . They let 54  go.</p> <p>How many do they have now? _____</p>	
4)	<p>There are 41 kids on the school bus .</p> <p>At the next stop 15 more kids get on.</p> <p>After that, 22 more kids get on.</p> <p>How many kids on the bus now? _____</p>	
5)	<p>Sally has \$25 more than Captain. Captain has \$46 less than Frazer. Frazer has \$78.</p> <p>How much money does Sally have? \$ _____</p>	



# ADDITION SUBTRACTION PROBLEMS UP TO 100

## SHEET 5A ANSWERS

		WORKING OUT
1)	There are 63  in a field. 24 more  join them. A loud noise scares 52  away. How many  are there left? <u>35</u>	<u><math>63 + 24 = 87</math></u> <u><math>87 - 52 = 35</math></u>
2)	A sport store has 88  . It sells 23  in one week and 34 more  in the next week. How many  does it have now? <u>31</u>	<u><math>88 - 23 = 65</math></u> <u><math>65 - 34 = 31</math></u> <u>OR</u> <u><math>23 + 34 = 57</math></u> <u><math>88 - 57 = 31</math></u>
3)	Tyger and Quadra go crabbing. Tyger catches 42  . Quadra catches 27  . They let 54  go. How many do they have now? <u>15</u>	<u><math>42 + 27 = 69</math></u> <u><math>69 - 54 = 15</math></u>
4)	There are 41 kids on the school bus  . At the next stop 15 more kids get on. After that, 22 more kids get on. How many kids on the bus now? <u>78</u>	<u><math>41 + 15 = 56</math></u> <u><math>56 + 22 = 78</math></u>
5)	Sally has \$25 more than Captain. Captain has \$46 less than Frazer. Frazer has \$78. How much money does Sally have? \$ <u>57</u>	<u><math>78 - 46 = 32</math></u> <u><math>32 + 25 = 57</math></u>