













Name

Date



## ADDITION SUBTRACTION PROBLEMS UP TO 100 SHEET 5B













Try these 2-step addition and subtraction word problems.

		WORKING OUT
1)	<p>There are 67  in a field. 24 more  join them. A loud noise scares 52  away.</p> <p>How many  are there left? _____</p>	
2)	<p>A sport store has 81 .</p> <p>It sells 28  in one week and 34 more  in the next week.</p> <p>How many  does it have now? _____</p>	
3)	<p>Tyger and Quadra go crabbing. Tyger catches 46 . Quadra catches 27 . They let 58  go.</p> <p>How many do they have now? _____</p>	
4)	<p>There are 48 kids on the school bus .</p> <p>At the next stop 15 more kids get on.</p> <p>After that, 19 more kids get on.</p> <p>How many kids on the bus now? _____</p>	
5)	<p>Sally has \$27 more than Captain. Captain has \$46 less than Frazer. Frazer has \$78.</p> <p>How much money does Sally have? \$ _____</p>	



# ADDITION SUBTRACTION PROBLEMS UP TO 100

## SHEET 5B ANSWERS

		WORKING OUT
1)	There are 67  in a field. 24 more  join them. A loud noise scares 52  away. How many  are there left? <u>39</u>	$67 + 24 = 91$ $91 - 52 = 39$
2)	A sport store has 81  . It sells 28  in one week and 34 more  in the next week. How many  does it have now? <u>19</u>	$81 - 28 = 53$ $53 - 34 = 19$ <u>OR</u> $28 + 34 = 62$ $81 - 62 = 19$
3)	Tyger and Quadra go crabbing. Tyger catches 46  . Quadra catches 27  . They let 58  go. How many do they have now? <u>15</u>	$46 + 27 = 73$ $73 - 58 = 15$
4)	There are 48 kids on the school bus  . At the next stop 15 more kids get on. After that, 19 more kids get on. How many kids on the bus now? <u>82</u>	$48 + 15 = 63$ $63 + 19 = 82$
5)	Sally has \$27 more than Captain. Captain has \$46 less than Frazer. Frazer has \$90. How much money does Sally have? \$ <u>71</u>	$90 - 46 = 44$ $44 + 27 = 71$