





2-STEP ADDITION AND SUBTRACTION PROBLEMS UP TO 3-DIGITS SHEET 1


Work out these 2-step addition and subtraction problems.

WORKING OUT


- 1)  Tyger has a collection of 673 coins. He gives 126 coins to Frazer and 258 coins to Newton. How many coins does he have left?

He has _____ coins left.

- 2)  A fruit stall sells 354 apples, 217 oranges and 264 bananas. How many pieces of fruit have been sold altogether?

- 3)  Newton is reading a 527 page book which has been split into 3 parts. Part 1 has 236 pages and Part 2 has 178 pages. How many pages in Part 3?





There are _____ pages in Part 3.

- 4)  Captain needs 1000 points to get to the next level in a space game. He scores 295 points in round 1 and 367 points in round 2. How many more points does he need to reach the next level?

He needs another _____ points.



2-STEP ADDITION AND SUBTRACTION PROBLEMS UP TO 3-DIGITS SHEET 1 ANSWERS

		WORKING OUT
1)	 <p>Tyger has a collection of 673 coins. He gives 126 coins to Frazer and 258 coins to Newton. How many coins does he have left?</p> <p>He has _____ coins left.</p>	$673 - 126 = 547$ $547 - 258 = 289$ OR $126 + 258 = 384$ $673 - 384 = 289$
2)	 <p>A fruit stall sells 354 apples, 217 oranges and 264 bananas. How many pieces of fruit have been sold altogether?</p>	$354 + 217 + 264 = 835$
3)	 <p>Newton is reading a 527 page book which has been split into 3 parts. Part 1 has 236 pages and Part 2 has 178 pages. How many pages in Part 3?</p> <p>There are _____ pages in Part 3.</p>	$527 - 236 = 291$ $291 - 178 = 113$ OR $236 + 178 = 414$ $527 - 414 = 113$
4)	 <p>Captain needs 1000 points to get to the next level in a space game. He scores 295 points in round 1 and 367 points in round 2. How many more points does he need to reach the next level?</p> <p>He needs another _____ points.</p>	$1000 - 295 = 705$ $705 - 367 = 338$ OR $295 + 367 = 662$ $1000 - 662 = 338$