

Name \_\_\_\_\_

Date \_\_\_\_\_



## 3-DIGIT ADDITION SUBTRACTION PROBLEMS SHEET 1B

*Work out these addition and subtraction problems.*

WORKING OUT

- 1) There were 507 crows in a field. A loud noise scares 224 of them away. How many crows are left?



*There are \_\_\_\_\_ crows left.*

- 2) Frazer and Newton collect coins. Frazer has 378 coins. Newton has 443 coins. How many coins do they have altogether?



*There are \_\_\_\_\_ coins altogether.*

- 3) A market sells 476 apples in one week and 342 apples the next week. How many apples have been sold in total?



*The market sells \_\_\_\_\_ apples in total.*

- 4) A sea turtle lays 615 eggs in the sand and buries them. 522 eggs hatch after 60 days. How many eggs are left in the sand?



*There are \_\_\_\_\_ eggs left.*

- 5) Captain is going on a road trip. He travels 385 miles and then another 252 miles before arriving back home. How far was his trip?




*His trip was \_\_\_\_\_ miles.*




## 3-DIGIT ADDITION SUBTRACTION PROBLEMS SHEET 1B ANSWERS


## WORKING OUT

- 1)  There were 507 crows in a field. A loud noise scares 224 of them away. How many crows are left?  $507 - 224 = 283$


*There are 283 crows left.*

- 2)  Frazer and Newton collect coins. Frazer has 378 coins. Newton has 443 coins. How many coins do they have altogether?  $378 + 443 = 821$


*There are 821 coins altogether.*

- 3)  A market sells 476 apples in one week and 342 apples the next week. How many apples have been sold in total?  $476 + 342 = 818$

*The market sells 818 apples in total.*

- 4)  A sea turtle lays 615 eggs in the sand and buries them. 522 eggs hatch after 60 days. How many eggs are left in the sand?  $615 - 522 = 93$

*There are 93 eggs left.*

- 5)  Captain is going on a road trip. He travels 385 miles and then another 252 miles before arriving back home. How far was his trip?  $385 + 252 = 637$

*His trip was 637 miles.*