





# 3-DIGIT ADDITION PROBLEMS SHEET 1


## WORKING OUT

- 1) Sally tosses a coin. She tosses 85 heads and 76 tails.  
 How many times was the coin tossed?


*The coin was tossed \_\_\_\_\_ times.*

- 2) There are 175 frogs in one pond and 53 frogs in another pond. How many frogs in all?  



*There are \_\_\_\_\_ frogs in all.*

- 3) In a baseball game, 258 adult tickets and 125 children tickets are sold.  
 How many tickets are sold altogether?


*There are \_\_\_\_\_ tickets sold altogether.*

- 4) Jasmine counts 151 cars going to school.  
 She counts 123 cars coming back home.  
How many cars does she count in total?

*She counts \_\_\_\_\_ cars in total.*

- 5) There are 165 girls and 125 boys on a school trip.  
 How many students in all?







*There are \_\_\_\_\_ students on the trip.*

- 6) Tyger plants 427 trees in one field and 369 trees in another field. How many trees has he planted in all?  


*He has planted \_\_\_\_\_ trees in all.*



# 3-DIGIT ADDITION PROBLEMS SHEET 1 ANSWERS

		WORKING OUT
1)	 Sally tosses a coin. She tosses 85 heads and 76 tails. How many times was the coin tossed?  <i>The coin was tossed <u>161</u> times.</i>	<u><math>85 + 76 = 161</math></u>
2)	 There are 175 frogs in one pond and 53 frogs in another pond. How many frogs in all?  <i>There are <u>228</u> frogs in all.</i>	<u><math>175 + 53 = 228</math></u>
3)	 In a baseball game, 258 adult tickets and 125 children tickets are sold. How many tickets are sold altogether?  <i>There are <u>383</u> tickets sold altogether.</i>	<u><math>258 + 125 = 383</math></u>
4)	 Jasmine counts 151 cars going to school. She counts 123 cars coming back home. How many cars does she count in total?  <i>She counts <u>274</u> cars in total.</i>	<u><math>151 + 123 = 274</math></u>
5)	 There are 165 girls and 125 boys on a school trip. How many students in all?  <i>There are <u>290</u> students on the trip.</i>	<u><math>165 + 125 = 290</math></u>
6)	 Tyger plants 427 trees in one field and 369 trees in another field. How many trees has he planted in all?  <i>He has planted <u>796</u> trees in all.</i>	<u><math>427 + 369 = 796</math></u>