





4-DIGIT ADDITION PROBLEMS SHEET 3

WORKING OUT

- 1)  Captain is counting his steps. In the 1st hour he walks 2824 steps, in the 2nd hour he walks 3177 steps and in the 3rd hour he walks 968 steps.


How many steps has he walked so far?

He has walked _____ steps.

- 2)  A book is split into 3 parts. Part 1 has 675 pages. Part 2 has 547 pages. Part 3 has 498 pages.


How many pages in the book?

The books has _____ pages.

- 3)  In a zoo there are 3247 mammals, 2018 reptiles and 764 amphibians.


How many animals in total?

There are _____ animals in the zoo.

- 4)  On a fishing trip, Tyger catches 1345 fish. Frazer catches 827 fish and Sally catches 1086 fish.

How many fish were caught in all?

There were _____ fish caught in total.






- 5)  A pie shop sells some pies over a 3-month period. In Month 1, it sells 3856 pies. In Month 2, it sells 4294 pies. In Month 3, it sells 2683 pies.

How many pies were sold in the 3 months?

There were _____ pies sold in the 3 days.



4-DIGIT ADDITION PROBLEMS SHEET 3 ANSWERS

		WORKING OUT
1)	<p> Captain is counting his steps. In the 1st hour he walks 2824 steps, in the 2nd hour he walks 3177 steps and in the 3rd hour he walks 968 steps. How many steps has he walked so far?</p> <p>He has walked <u>6,969</u> steps.</p>	$\underline{2824 + 3177 + 968 =}$ $\underline{6,969}$
2)	<p> A book is split into 3 parts. Part 1 has 675 pages. Part 2 has 547 pages. Part 3 has 498 pages. How many pages in the book?</p> <p>The books has <u>1,720</u> pages.</p>	$\underline{675 + 547 + 498 =}$ $\underline{1,720}$
3)	<p> In a zoo there are 3247 mammals, 2018 reptiles and 764 amphibians. How many animals in total?</p> <p>There are <u>6,029</u> animals in the zoo.</p>	$\underline{3247 + 2018 + 764 =}$ $\underline{6,029}$
4)	<p> On a fishing trip, Tyger catches 1345 fish. Frazer catches 827 fish and Sally catches 1086 fish. How many fish were caught in all?</p> <p>There were <u>3,258</u> fish caught in total.</p>	$\underline{1345 + 827 + 1086 =}$ $\underline{3,258}$
5)	<p> A pie shop sells some pies over a 3-month period. In Month 1, it sells 3856 pies. In Month 2, it sells 4294 pies. In Month 3, it sells 2683 pies. How many pies were sold in the 3 months?</p> <p>There were <u>10,833</u> pies sold in the 3 days.</p>	$\underline{3856 + 4294 + 2683 =}$ $\underline{10,833}$