




Name

Date



# 4-DIGIT ADDITION PROBLEMS SHEET 4

This table shows the number of different types of fruit sold in a market for the first 3 days of the week.	Fruit Sales	Apples 	Oranges 	Bananas 
	Monday	4,326	5,148	3,189
	Tuesday	2,265	3,976	5,146
	Wednesday	978	1,064	2,703

## WORKING OUT

1) How many apples were sold on Monday and Tuesday?  
There were \_\_\_\_\_ apples sold.

2) How many oranges were sold on Tuesday and Wednesday?  
There were \_\_\_\_\_ oranges sold.




3) How many oranges and bananas were sold on Wednesday?  
There were \_\_\_\_\_ oranges and bananas sold.

4) How many pieces of fruit were sold on Monday?  
There were \_\_\_\_\_ pieces of fruit sold on Monday.

5) How many bananas were sold in total?  
There were \_\_\_\_\_ bananas sold in total.



## 4-DIGIT ADDITION PROBLEMS SHEET 4 ANSWERS

This table shows the number of different types of fruit sold in a market for the first 3 days of the week.	Fruit Sales	Apples 	Oranges 	Bananas 
	Monday	4,326	5,148	3,189
	Tuesday	2,265	3,976	5,146
	Wednesday	978	1,064	2,703

### WORKING OUT

- 1) How many apples were sold on Monday and Tuesday?  
There were \_\_\_\_\_ apples sold.  $326 + 265 = 591$
- 2) How many oranges were sold on Tuesday and Wednesday?  
There were \_\_\_\_\_ oranges sold.  $76 + 275 = 349$
- 3) How many oranges and bananas were sold on Wednesday?  
There were \_\_\_\_\_ oranges and bananas sold.  $273 + 95 = 368$
- 4) How many pieces of fruit were sold on Monday?  
There were \_\_\_\_\_ pieces of fruit sold on Monday.  $326 + 148 + 189 = 663$
- 5) How many bananas were sold in total?  
There were \_\_\_\_\_ bananas sold in total.  $189 + 146 + 95 = 430$