



# 3-DIGIT SUBTRACTION PROBLEMS SHEET 1A

Work out these subtraction problems with no regrouping.

WORKING OUT

- 1) There are 675 ants in a colony. 241 ants leave.



How many ants are there now?

There are \_\_\_\_\_ ants now.

- 2) A farmer plants 429 trees in a plantation. He cuts down 315 of the trees. How many trees are left?



There are \_\_\_\_\_ trees left.

- 3) Frazer has 486 marbles. Sally has 273 marbles.



How many more marbles does Frazer have?

Frazer has \_\_\_\_\_ more marbles than Sally.

- 4) There are 597 cars in a parking lot. 153 cars drive away. How many cars are there now?



There are \_\_\_\_\_ cars now.

- 5) Captain's electric car can travel 414 miles on a single charge. Tyger's car can travel 312 miles. What is the difference?



The difference is \_\_\_\_\_ miles.







- 6) In a zoo, there are 343 reptiles and 567 amphibians. How many more amphibians than reptiles are there?



There are \_\_\_\_\_ more amphibians.



## 3-DIGIT SUBTRACTION PROBLEMS SHEET 1A ANSWERS

		WORKING OUT
1)	There are 675 ants in a colony. 241 ants leave.  How many ants are there now?  <i>There are <u>434</u> ants now.</i>	<u><math>675 - 241 = 434</math></u>
2)	A farmer plants 429 trees in a plantation. He cuts  down 315 of the trees. How many trees are left?  <i>There are <u>114</u> trees left.</i>	<u><math>429 - 315 = 114</math></u>
3)	Frazer has 486 marbles. Sally has 273 marbles.  How many more marbles does Frazer have?  <i>Frazer has <u>213</u> more marbles than Sally.</i>	<u><math>486 - 273 = 213</math></u>
4)	There are 597 cars in a parking lot. 153 cars drive  away. How many cars are there now?  <i>There are <u>444</u> cars now.</i>	<u><math>597 - 153 = 444</math></u>
5)	Captain's electric car can travel 414 miles on a single  charge. Tyger's car can travel 312 miles. What is the difference?  <i>The difference is <u>102</u> miles.</i>	<u><math>414 - 312 = 102</math></u>
6)	In a zoo, there are 343 reptiles and 567 amphibians.  How many more amphibians than reptiles are there?  <i>There are <u>224</u> more amphibians.</i>	<u><math>567 - 343 = 224</math></u>