





## 3-DIGIT SUBTRACTION PROBLEMS SHEET 2A

*Work out these subtraction problems with no regrouping.*


WORKING OUT

- 1)  There are 678 clownfish and angelfish in a tank. 425 of the fish are clownfish. How many are angelfish?


There are \_\_\_\_\_ angelfish.

- 2)  Season 1 of the show Salamanderville lasts 759 minutes. I have watched 412 minutes of the show. How many more minutes is there to watch?


There is \_\_\_\_\_ more minutes to watch.

- 3)  Tyger and Frazer collect stamps. Tyger has 875 stamps. Frazer has 243 stamps fewer. How many stamps does Frazer have?


Frazer has \_\_\_\_\_ stamps.

- 4)  679 people are at Main Street Station. 213 people board different trains. How many people are at the station now?

There are \_\_\_\_\_ people at the station now.

- 5)  Sally and Newton go fishing and catch 577 fish. Newton catches 316 of the fish. How many does Sally catch?







Sally catches \_\_\_\_\_ fish.

- 6)  There are 589 adult puffin and 273 pufflings (puffin chicks) on an island. How many more adults than pufflings?

There are \_\_\_\_\_ more adult puffin.



## 3-DIGIT SUBTRACTION PROBLEMS SHEET 2A ANSWERS

		WORKING OUT
1)	 <p>There are 678 clownfish and angelfish in a tank. 425 of the fish are clownfish. How many are angelfish?</p> <p>There are <u>253</u> angelfish.</p>	$\begin{array}{r} 678 - 425 = \\ \underline{253} \end{array}$
2)	 <p>Season 1 of the show Salamanderville lasts 759 minutes. I have watched 412 minutes of the show. How many more minutes is there to watch?</p> <p>There is <u>347</u> more minutes to watch.</p>	$\begin{array}{r} 759 - 412 = \\ \underline{347} \end{array}$
3)	 <p>Tyger and Frazer collect stamps. Tyger has 875 stamps. Frazer has 243 stamps fewer. How many stamps does Frazer have?</p> <p>Frazer has <u>632</u> stamps.</p>	$\begin{array}{r} 875 - 243 = \\ \underline{632} \end{array}$
4)	 <p>679 people are at Main Street Station. 213 people board different trains. How many people are at the station now?</p> <p>There are <u>462</u> people at the station now.</p>	$\begin{array}{r} 679 - 213 = \\ \underline{466} \end{array}$
5)	 <p>Sally and Newton go fishing and catch 577 fish. Newton catches 316 of the fish. How many does Sally catch?</p> <p>Sally catches <u>261</u> fish.</p>	$\begin{array}{r} 577 - 316 = \\ \underline{261} \end{array}$
6)	 <p>There are 589 adult puffin and 273 pufflings (puffin chicks) on an island. How many more adults than pufflings?</p> <p>There are <u>316</u> more adult puffin.</p>	$\begin{array}{r} 589 - 273 = \\ \underline{316} \end{array}$