





3-DIGIT SUBTRACTION PROBLEMS SHEET 2B

Work out these subtraction problems.


WORKING OUT

- 1)  There are 671 clownfish and angelfish in a tank. 425 of the fish are clownfish. How many are angelfish?


There are _____ angelfish.

- 2)  Season 1 of the show Salamanderville lasts 706 minutes. I have watched 412 minutes of the show. How many more minutes is there to watch?


There is _____ more minutes to watch.

- 3)  Tyger and Frazer collect stamps. Tyger has 812 stamps. Frazer has 243 stamps fewer. How many stamps does Frazer have?


Frazer has _____ stamps.

- 4)  675 people are at Main Street Station. 219 people board different trains. How many people are at the station now?

There are _____ people at the station now.

- 5)  Sally and Newton go fishing and catch 500 fish. Newton catches 316 of the fish. How many does Sally catch?

Sally catches _____ fish.

- 6)  There are 521 adult puffin and 273 pufflings (puffin chicks) on an island. How many more adults than pufflings?







There are _____ more adult puffin.

Name

Date



3-DIGIT SUBTRACTION PROBLEMS SHEET 2B ANSWERS

		WORKING OUT
1)	 <p>There are 671 clownfish and angelfish in a tank. 425 of the fish are clownfish. How many are angelfish?</p> <p><i>There are <u>246</u> angelfish.</i></p>	$\begin{array}{r} 671 - 425 = \\ \underline{\quad\quad} \\ 246 \end{array}$
2)	 <p>Season 1 of the show Salamanderville lasts 706 minutes. I have watched 412 minutes of the show. How many more minutes is there to watch?</p> <p><i>There is <u>294</u> more minutes to watch.</i></p>	$\begin{array}{r} 706 - 412 = \\ \underline{\quad\quad} \\ 294 \end{array}$
3)	 <p>Tyger and Frazer collect stamps. Tyger has 812 stamps. Frazer has 243 stamps fewer. How many stamps does Frazer have?</p> <p><i>Frazer has <u>569</u> stamps.</i></p>	$\begin{array}{r} 812 - 243 = \\ \underline{\quad\quad} \\ 569 \end{array}$
4)	 <p>675 people are at Main Street Station. 219 people board different trains. How many people are at the station now?</p> <p><i>There are <u>456</u> people at the station now.</i></p>	$\begin{array}{r} 675 - 219 = \\ \underline{\quad\quad} \\ 456 \end{array}$
5)	 <p>Sally and Newton go fishing and catch 500 fish. Newton catches 316 of the fish. How many does Sally catch?</p> <p><i>Sally catches <u>184</u> fish.</i></p>	$\begin{array}{r} 500 - 316 = \\ \underline{\quad\quad} \\ 184 \end{array}$
6)	 <p>There are 521 adult puffin and 273 pufflings (puffin chicks) on an island. How many more adults than pufflings?</p> <p><i>There are <u>248</u> more adult puffin.</i></p>	$\begin{array}{r} 521 - 273 = \\ \underline{\quad\quad} \\ 248 \end{array}$