

Name

Date



MULTIPLICATION PROBLEMS 3.3A

Have a go at solving these multiplication problems.

Can you spot the 'trick' problem which is not a multiplication problem?

1) Donuts come in packs of 6. I buy 2 packs. How many have I bought?




2) How many days in 2 weeks?



3) Tyger takes 10 minutes to run a mile. How long would it take him to run 3 miles at the same pace?

4) Bulbs come in packs of 10. How many bulbs in 5 packs?



5) A lighthouse flashes its light 5 times a minute. How many times would it flash in 6 minutes?




6) A spider has 8 legs. How many legs would 3 spiders have?



7) In a field there are 5 sheep and 7 cows. How many animals in total?

8) I buy 4 bunches of bananas. There are 6 bananas in each bunch. How many bananas have I bought?



Did you spot the
trick problem?



Free Math Sheets, Math Games and Math Help

MATH-SALAMANDERS.COM



Name

Date



MULTIPLICATION PROBLEMS 3.3A ANSWERS

1) Donuts come in packs of 6. I buy 2 packs. How many have I bought?

$6 \times 2 = 12$ donuts

2) How many days in 2 weeks?

$7 \times 2 = 14$ days

3) Tyger takes 10 minutes to run a mile. How long would it take him to run 3 miles at the same pace?

$10 \times 3 = 30$ minutes

4) Bulbs come in packs of 10. How many bulbs in 5 packs?

$10 \times 5 = 50$ bulbs

5) A lighthouse flashes its light 5 times a minute. How many times would it flash in 6 minutes?

$5 \times 6 = 30$ times

6) A spider has 8 legs. How many legs would 3 spiders have?

$8 \times 3 = 24$ legs

7) In a field there are 5 sheep and 7 cows. How many animals in total?

$5 + 7 = 12$ animals

***** Trick questions - this was an addition question *****

8) I buy 4 bunches of bananas. There are 6 bananas in each bunch. How many bananas have I bought?

$6 \times 4 = 24$ bananas

Name

Date



MULTIPLICATION PROBLEMS 3.3B

Have a go at solving these multiplication problems.

Can you spot the 'trick' problem which is not a multiplication problem?

1) Donuts come in packs of 6. I buy 8 packs. How many have I bought?




2) How many days in 8 weeks?



3) Tyger takes 9 minutes to run a mile. How long would it take him to run 6 miles at the same pace?

4) Bulbs come in packs of 12. How many bulbs in 5 packs?



5) A lighthouse flashes its light 8 times a minute. How many times would it flash in 6 minutes?




6) A spider has 8 legs. How many legs would 11 spiders have?



7) In a field there are 5 sheep and 12 cows. How many animals in total?

8) I buy 7 bunches of bananas. There are 6 bananas in each bunch. How many bananas have I bought?



Did you spot the
trick problem?



Free Math Sheets, Math Games and Math Help

MATH-SALAMANDERS.COM





MULTIPLICATION PROBLEMS 3.3B ANSWERS

1) Donuts come in packs of 6. I buy 8 packs. How many have I bought?

$6 \times 8 = 48$ donuts

2) How many days in 8 weeks?

$7 \times 8 = 56$ days

3) Tyger takes 9 minutes to run a mile. How long would it take him to run 6 miles at the same pace?

$9 \times 6 = 54$ minutes

4) Bulbs come in packs of 12. How many bulbs in 5 packs?

$12 \times 5 = 60$ bulbs

5) A lighthouse flashes its light 8 times a minute. How many times would it flash in 6 minutes?

$8 \times 6 = 48$ times

6) A spider has 8 legs. How many legs would 11 spiders have?

$8 \times 11 = 88$ legs

7) In a field there are 5 sheep and 12 cows. How many animals in total?

$5 + 12 = 17$ animals in total

*** Trick question - this was an addition question ***

8) I buy 7 bunches of bananas. There are 6 bananas in each bunch. How many bananas have I bought?

$6 \times 7 = 42$ bananas

Name

Date



MULTIPLICATION PROBLEMS 3.3C

Have a go at solving these multiplication problems.

Can you spot the 'trick' problem which is not a multiplication problem?

1) Donuts come in packs of 6. I buy 13 packs. How many have I bought?




2) How many days in 15 weeks?



3) Tyger takes 9 minutes to run a mile. How long would it take him to run 12 miles at the same pace?

4) Bulbs come in packs of 12. How many bulbs in 12 packs?



5) A lighthouse flashes its light 8 times a minute. How many times would it flash in 20 minutes?




6) A spider has 8 legs. How many legs would 16 spiders have?



7) In a field there are 15 sheep and 12 cows. How many animals in total?

8) I buy 18 bunches of bananas. There are 6 bananas in each bunch. How many bananas have I bought?



Did you spot the
trick problem?



Free Math Sheets, Math Games and Math Help

MATH-SALAMANDERS.COM



Name

Date



MULTIPLICATION PROBLEMS 3.3C ANSWERS

1) Donuts come in packs of 6. I buy 13 packs. How many have I bought?

$6 \times 13 = 81$ donuts

2) How many days in 15 weeks?

$7 \times 15 = 105$ days

3) Tyger takes 9 minutes to run a mile. How long would it take him to run 12 miles at the same pace?

$9 \times 12 = 108$ minutes or 1 hour 48 minutes

4) Bulbs come in packs of 12. How many bulbs in 12 packs?

$12 \times 12 = 144$ bulbs

5) A lighthouse flashes its light 8 times a minute. How many times would it flash in 20 minutes?

$8 \times 20 = 160$ times

6) A spider has 8 legs. How many legs would 16 spiders have?

$8 \times 16 = 128$ legs

7) In a field there are 15 sheep and 12 cows. How many animals in total?

$15 + 12 = 27$ animals

8) I buy 18 bunches of bananas. There are 6 bananas in each bunch. How many bananas have I bought?

$6 \times 18 = 108$ bananas