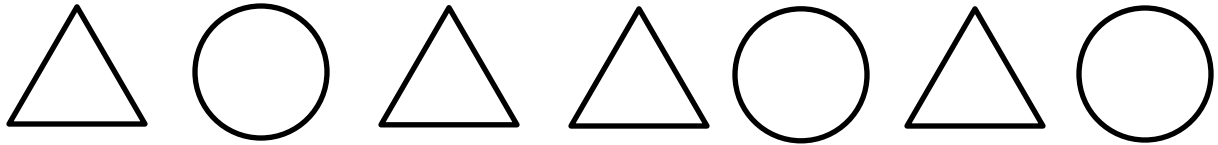




RATIO PROBLEMS 1

A ratio is a comparison of 2 or more quantities.

The ratio of triangles to circles below is 4 to 3 or 4:3. This means that there are 4 triangles to 3 circles. We can also say that the ratio of circles to triangles is 3 to 4 or 3:4.

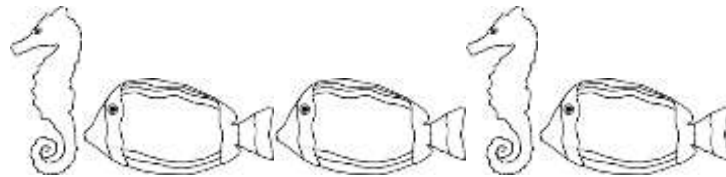


Look at the pictures of frogs and crickets below.



1) What is the ratio of frogs to crickets? ____ : ____

2) What is the ratio of crickets to frogs? ____ : ____



3) What is the ratio of seahorses to angel fish? ____ : ____

4) What is the ratio of angel fish to seahorses? ____ : ____



5) What is the ratio of spiders to snakes? ____ : ____

6) What is the ration of snakes to spiders? ____ : ____





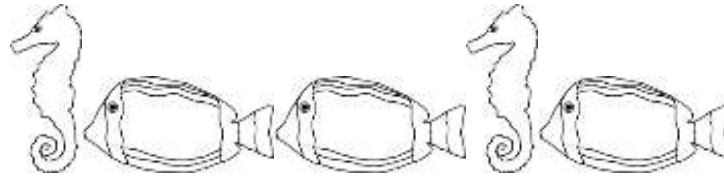
RATIO PROBLEMS 1 ANSWERS

Look at the pictures of frogs and crickets below.



1) What is the ratio of frogs to crickets? **2 : 5**

2) What is the ratio of crickets to frogs? **5 : 2**



3) What is the ratio of seahorses to angel fish? **2 : 3**

4) What is the ratio of angel fish to seahorses? **3 : 2**



5) What is the ratio of spiders to snakes? **4 : 3**

6) What is the ration of snakes to spiders? **3 : 4**