




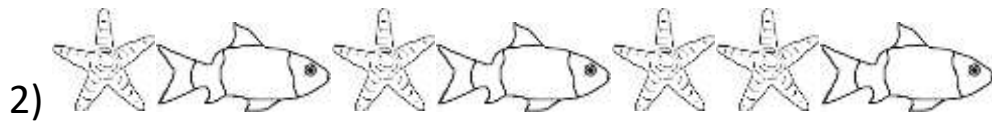
RATIO AND PROPORTION 2



a) What is the ratio of snails to butterflies? _____ : _____

b) What proportion of the minibeasts are snails? _____

c) What proportion of the minibeasts are butterflies? _____



a) What is the ratio of fish to starfish? _____ : _____

b) What proportion of the sea creatures above are fish? _____

c) What proportion of the sea creatures above are starfish? _____




a) What is the ratio of dolphins to whales? _____ : _____

b) What is the ratio of seahorses to dolphins? _____ : _____

c) What proportion of the sea creatures are:

dolphins? _____ whales? _____ seahorses? _____



a) What is the ratio of bananas to apples to pears? _____ : _____ : _____

b) What proportion of the fruit are:

bananas? _____ apples? _____ pears? _____

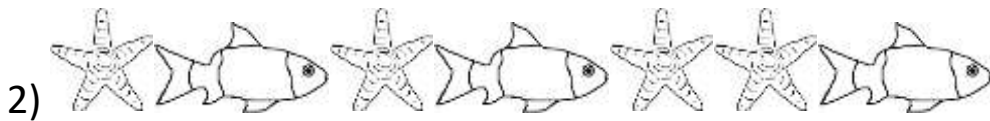




RATIO AND PROPORTION 2 ANSWERS




- a) What is the ratio of snails to butterflies? **3 : 2**
- b) What proportion of the minibeasts are snails? **$\frac{3}{5}$**
- c) What proportion of the minibeasts are butterflies? **$\frac{2}{5}$**



- a) What is the ratio of fish to starfish? **3 : 4**
- b) What proportion of the sea creatures above are fish? **$\frac{3}{7}$**
- c) What proportion of the sea creatures above are starfish? **$\frac{4}{7}$**



- a) What is the ratio of dolphins to whales? **3 : 1**
- b) What is the ratio of seahorses to dolphins? **4 : 3**
- c) What proportion of the sea creatures are:
 dolphins? **$\frac{3}{8}$** whales? **$\frac{1}{8}$** seahorses? **$\frac{4}{8}$ or $\frac{1}{2}$**



- a) What is the ratio of bananas to apples to pears? **5 : 2 : 3**
- b) What proportion of the fruit are:
 bananas? **$\frac{5}{10}$ or $\frac{1}{2}$** apples? **$\frac{2}{10}$ or $\frac{1}{5}$** pears? **$\frac{3}{10}$**