

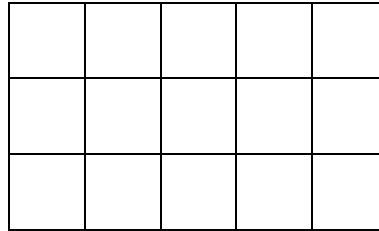
Name

Date



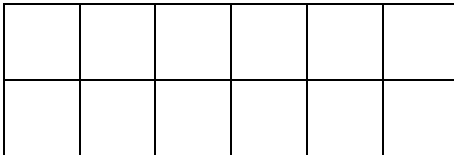
## AREA OF RECTANGLES SHEET 1

To find the area of a rectangle, simply count the number of cm squares inside the rectangle. The area of the shape below is  $5 \times 3 = 15$  square cm.



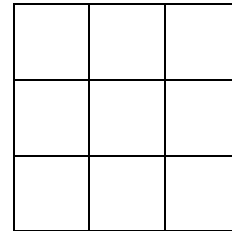
Work out the area of the following rectangles:

1)



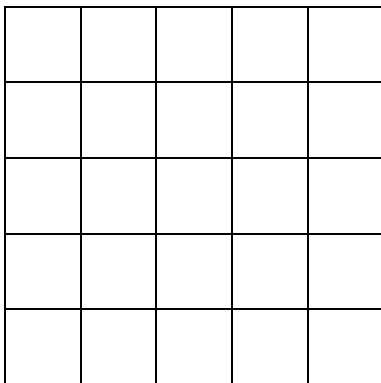
Area = \_\_\_\_\_ square cm

2)



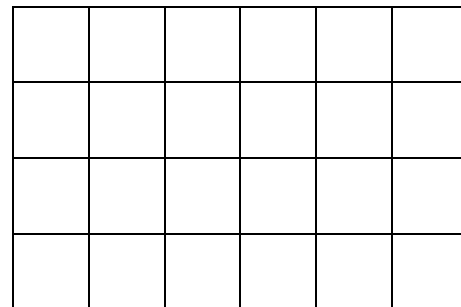
Area = \_\_\_\_\_ square cm

3)



Area = \_\_\_\_\_ square cm

4)



Area = \_\_\_\_\_ square cm



Name

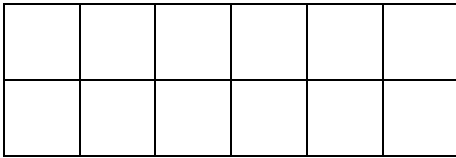
Date



# AREA OF RECTANGLES SHEET 1 ANSWERS

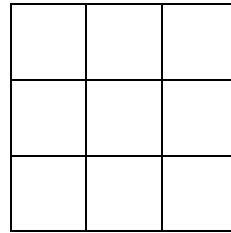
Work out the area of the following rectangles:

1)



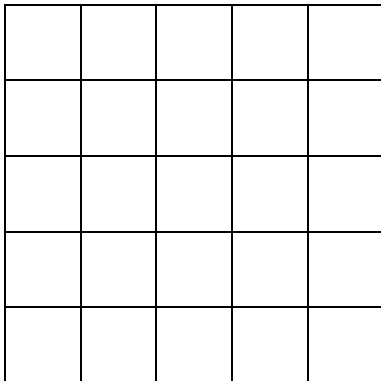
$$\text{Area} = 6 \times 2 = 12 \text{ square cm}$$

2)




$$\text{Area} = 3 \times 3 = 9 \text{ square cm}$$

3)



$$\text{Area} = 5 \times 5 = 25 \text{ square cm}$$

4)



$$\text{Area} = 6 \times 4 = 24 \text{ square cm}$$