

Name _____

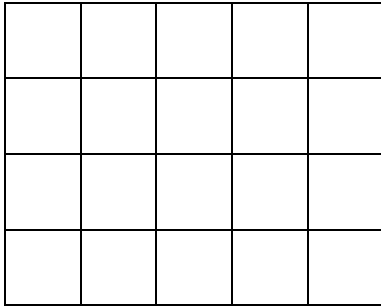
Date _____



AREA OF RECTANGLES SHEET 2

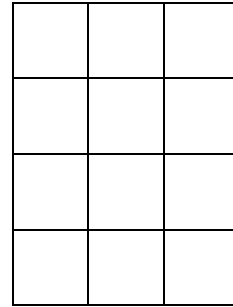
Work out the area of the following rectangles:

1)



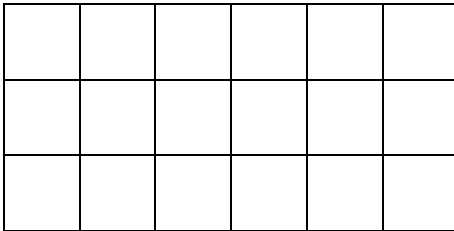
Area = _____ square cm

2)



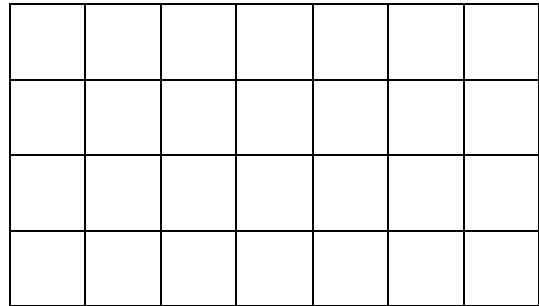
Area = _____ square cm

3)



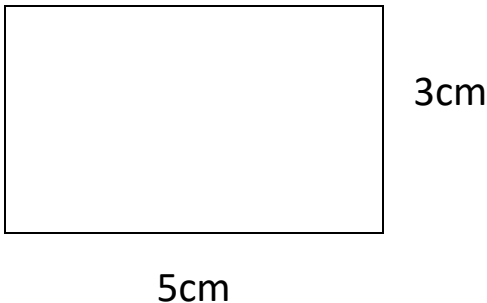
Area = _____ square cm

4)



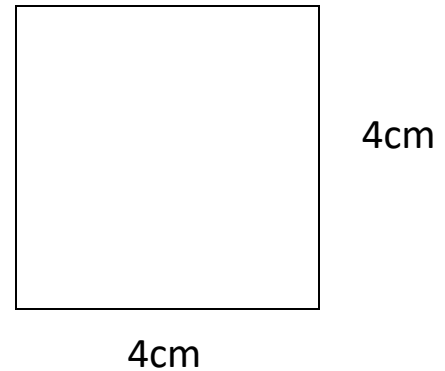
Area = _____ square cm

5)



Area = _____ square cm

6)



Area = _____ square cm



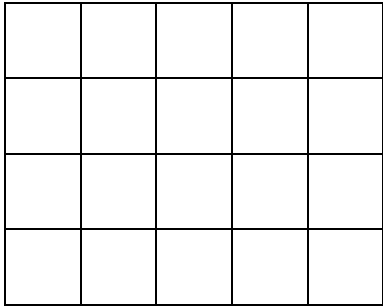
Name

Date



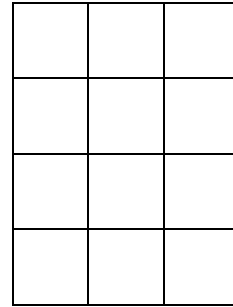
AREA OF RECTANGLES SHEET 2 ANSWERS

1)



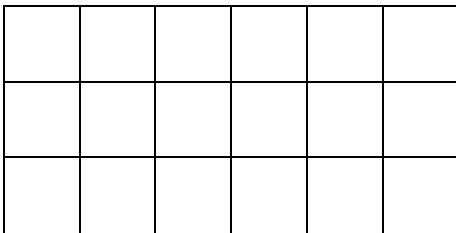
Area = $5 \times 4 = 20$ square cm

2)



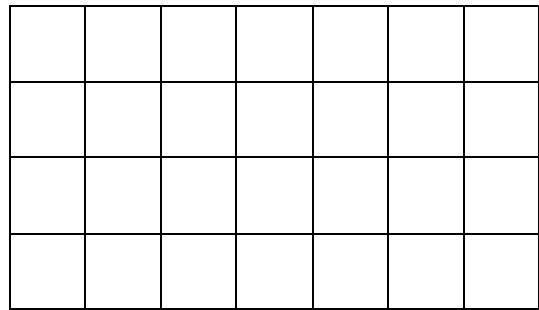
Area = $3 \times 4 = 12$ square cm

3)



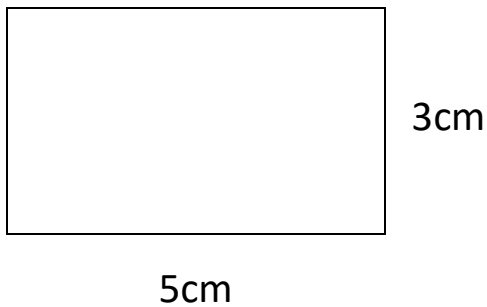
Area = $6 \times 3 = 18$ square cm

4)



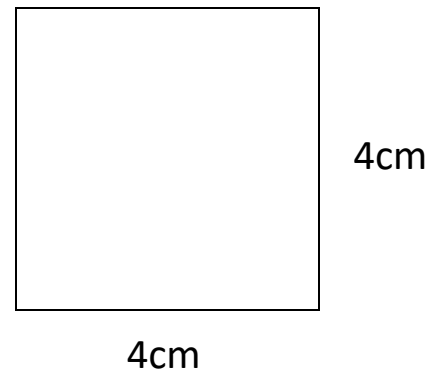
Area = $7 \times 4 = 28$ square cm

5)



Area = $3 \times 5 = 15$ square cm

6)



Area = $4 \times 4 = 16$ square cm