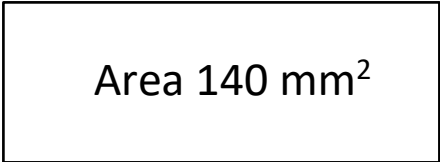

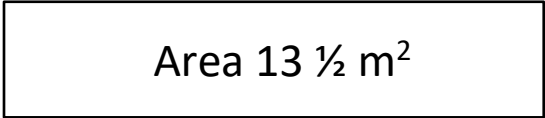





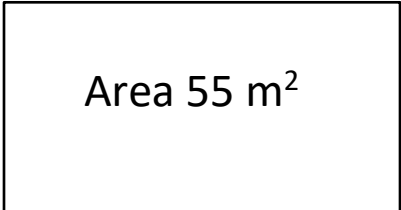
AREA OF RECTANGLES MISSING SIDES 2

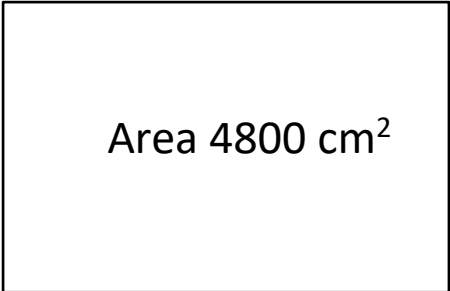
Use the area and the side measurements to find the length of the missing side.

- 1)  7mm
_____ mm
- 2)  3 ½ m

- 3)  1 ½ m

- 4)  30cm

- 5)  5 ½ m

- 6)  80cm

Don't forget to include your units of measurement!



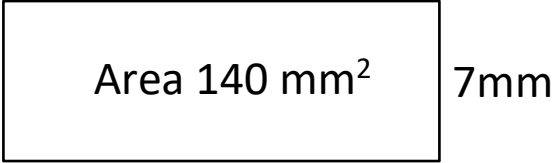

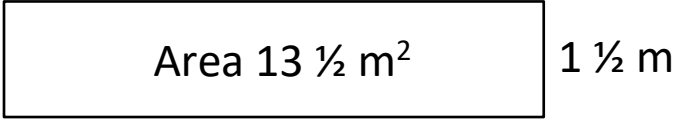

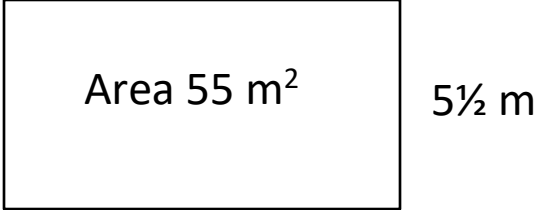

Name

Date



AREA OF RECTANGLES MISSING SIDES 2 ANSWERS

Use the area and the side measurements to find the length of the missing side.

- 1)  Area 140 mm^2 7mm
20 mm
- 2)  Area 21m^2 $3 \frac{1}{2} \text{ m}$
6 m
- 3)  Area $13 \frac{1}{2} \text{ m}^2$ $1 \frac{1}{2} \text{ m}$
9 m
- 4)  Area 1500cm^2 50 cm
30cm
- 5)  Area 55 m^2 $5 \frac{1}{2} \text{ m}$
10 m
- 6)  Area 4800 cm^2 60 cm
80cm