




AREA OF RECTILINEAR SHAPES SHEET 1


To find the area of these shapes, simply count the number of cm squares inside the shape.



The area of this shape is
8 square cm or 8cm^2 .


Work out the area of the following shapes:

1)



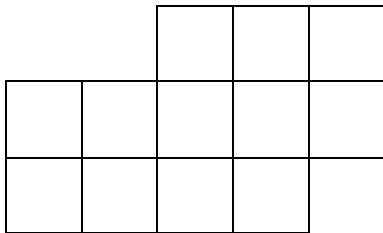
Area = _____ square cm

2)



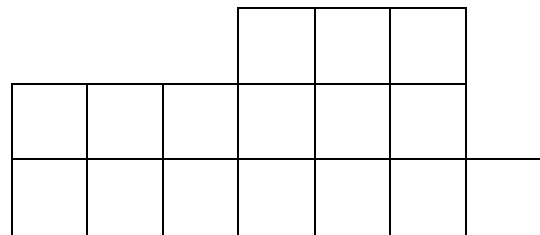
Area = _____ square cm

3)




Area = _____ square cm

4)



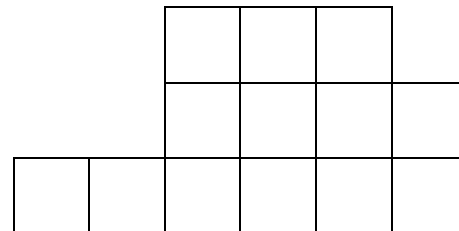
Area = _____ square cm

5)



Area = _____

6)




Area = _____



AREA OF RECTILINEAR SHAPES SHEET 1 ANSWERS

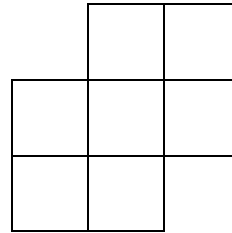
Work out the area of the following rectangles:

1)



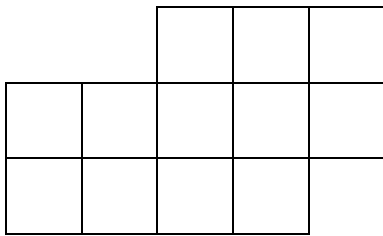
Area = 9 square cm

2)




Area = 7 square cm

3)




Area = 12 square cm

4)



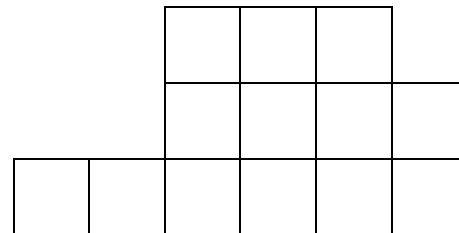
Area = 16 square cm

5)



Area = 14 square cm or 14cm²

6)



Area = 13 square cm or 13cm²