



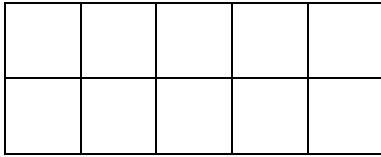
AREA AND PERIMETER OF RECTANGLES 1

Work out the area and perimeter of the following rectangles.

Each square on the sheet is 1 square cm. Remember **area** is the **number of squares inside**, and **perimeter** is the **distance round the outside** of the shape.



1)



Area = _____ square cm

Perimeter = _____ cm

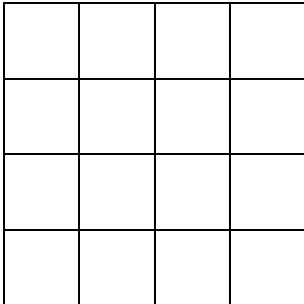
2)



Area = _____ square cm

Perimeter = _____ cm

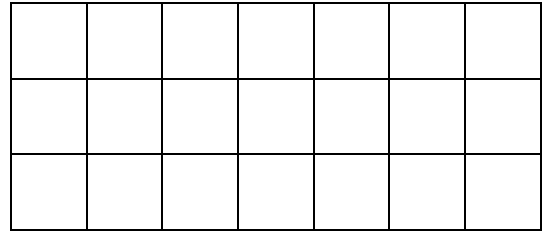
3)



Area = _____ square cm

Perimeter = _____ cm

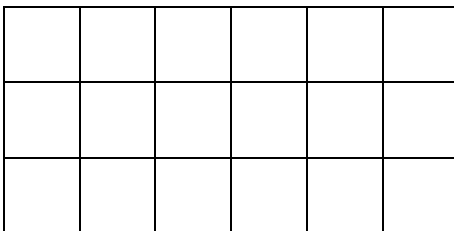
4)



Area = _____ square cm

Perimeter = _____ cm

5)



Area = _____ square cm

Perimeter = _____ cm

6)



Area = _____ square cm

Perimeter = _____ cm


Name

Date



AREA AND PERIMETER OF RECTANGLES 1 ANSWERS


1)



Area = 10 square cm

Perimeter = 14 cm

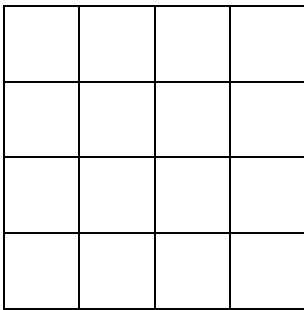
2)



Area = 6 square cm

Perimeter = 14 cm

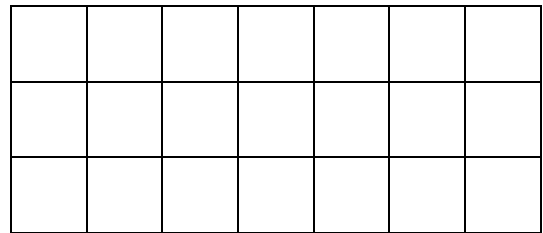
3)



Area = 16 square cm

Perimeter = 16 cm

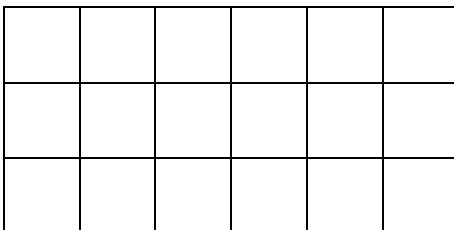
4)



Area = 21 square cm

Perimeter = 20 cm

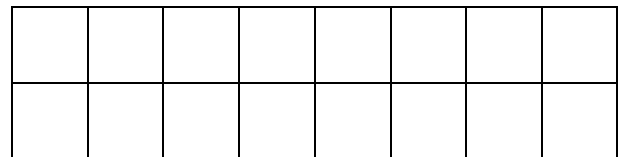
5)



Area = 18 square cm

Perimeter = 18 cm

6)



Area = 16 square cm

Perimeter = 20 cm