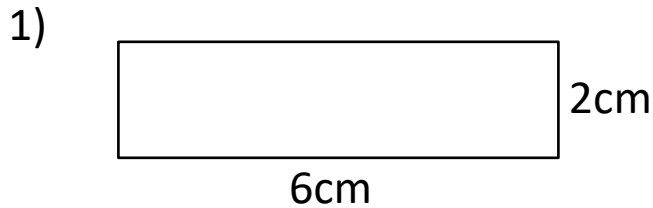




AREA AND PERIMETER OF RECTANGLES 2

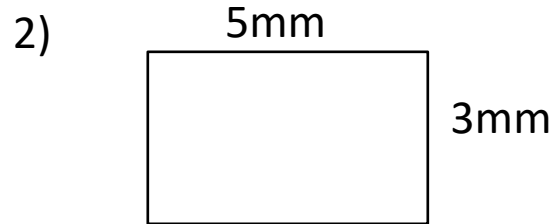
Work out the area and perimeter of the following rectangles.

They are not to scale. Remember - **area inside** and **perimeter outside**.



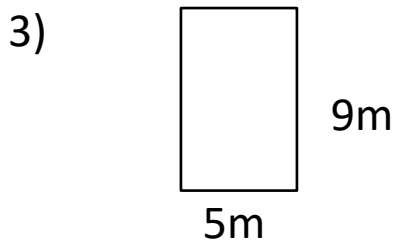
Area = _____ square cm

Perimeter = _____ cm



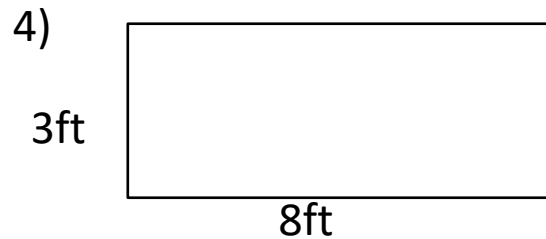
Area = _____ square mm

Perimeter = _____ mm



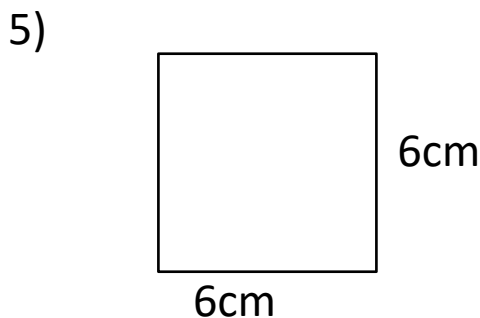
Area = _____ square m

Perimeter = _____ m



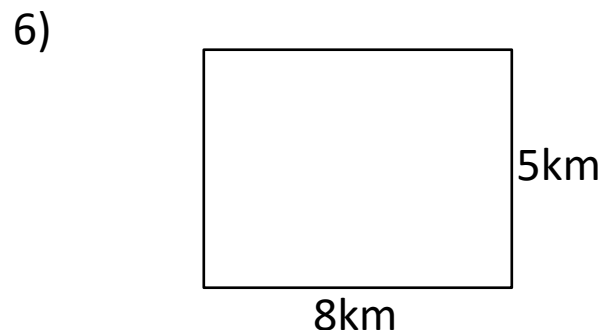
Area = _____ square ft

Perimeter = _____ ft



Area = _____ square cm

Perimeter = _____ cm



Area = _____ square km

Perimeter = _____ km




Name

Date



AREA AND PERIMETER OF RECTANGLES 2 ANSWERS

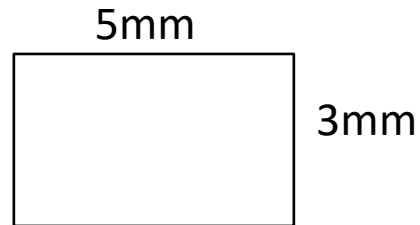
1)



Area = 12 square cm

Perimeter = 16 cm

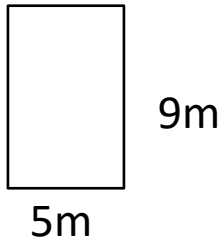
2)



Area = 15 square mm

Perimeter = 16 mm

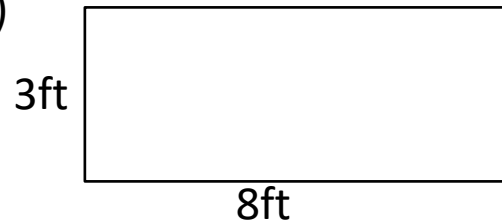
3)



Area = 45 square m

Perimeter = 28 m

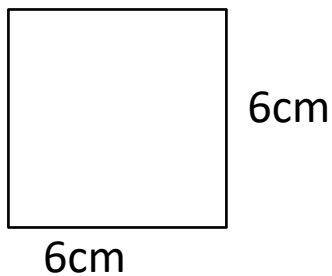
4)



Area = 24 square ft

Perimeter = 22 ft

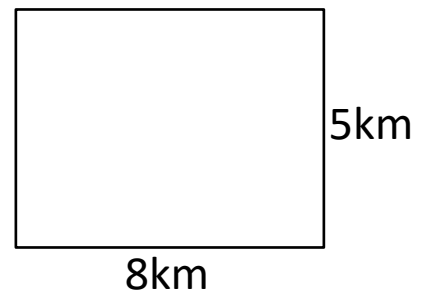
5)



Area = 36 square cm

Perimeter = 24 cm

6)



Area = 40 square km

Perimeter = 26 km

Name

Date

