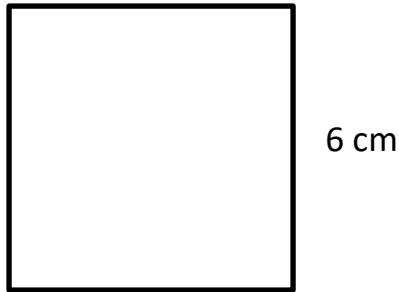




# PERIMETER OF REGULAR SHAPES 1

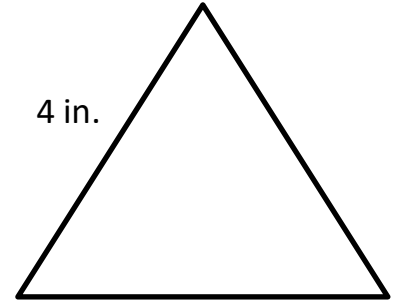
Find the perimeters of the following regular shapes. They are not to scale.

1)



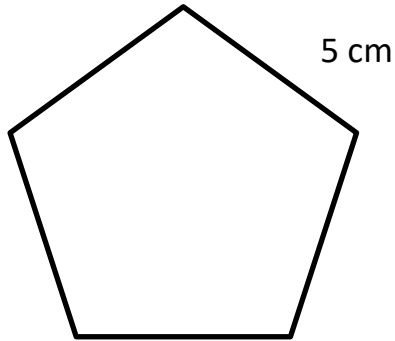
Perimeter = \_\_\_\_\_

2)



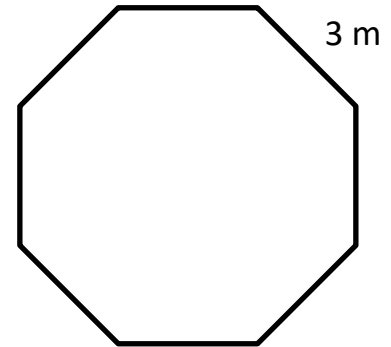
Perimeter = \_\_\_\_\_

3)



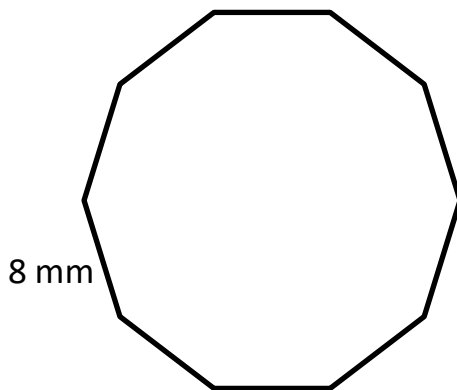
Perimeter = \_\_\_\_\_

4)



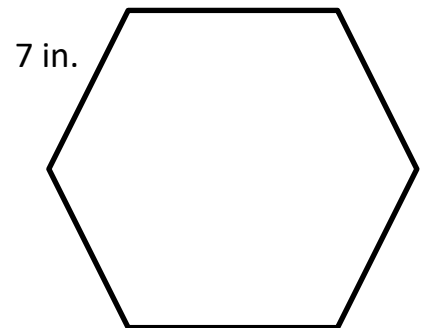
Perimeter = \_\_\_\_\_

5)



Perimeter = \_\_\_\_\_

6)



Perimeter = \_\_\_\_\_



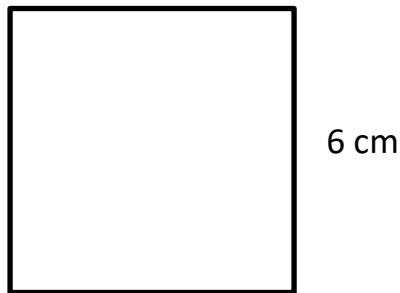
Name

Date



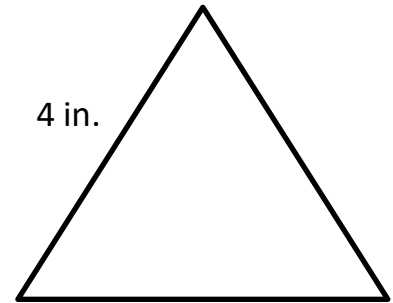
## PERIMETER OF REGULAR SHAPES 1 ANSWERS

1)



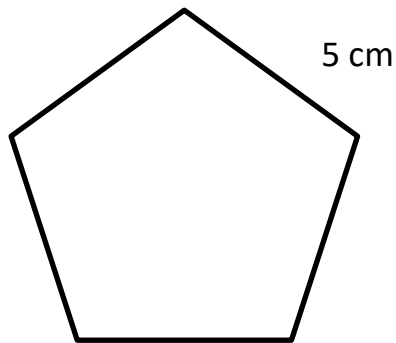
$$\text{Perimeter} = \underline{6 \times 4 = 24 \text{ cm}}$$

2)



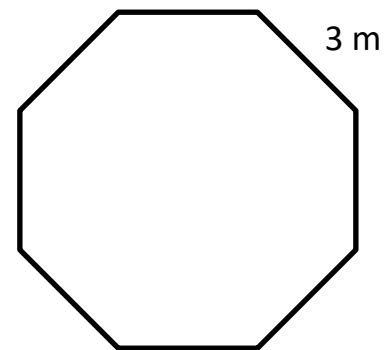
$$\text{Perimeter} = \underline{4 \times 3 = 12 \text{ in.}}$$

3)



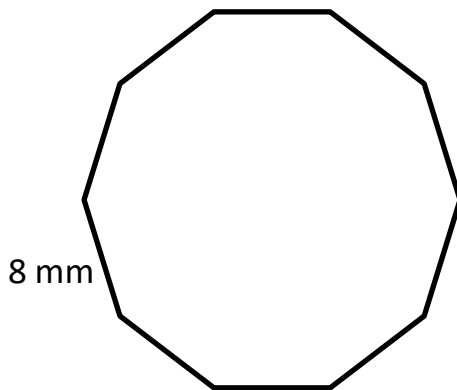
$$\text{Perimeter} = \underline{5 \times 5 = 25 \text{ cm}}$$

4)



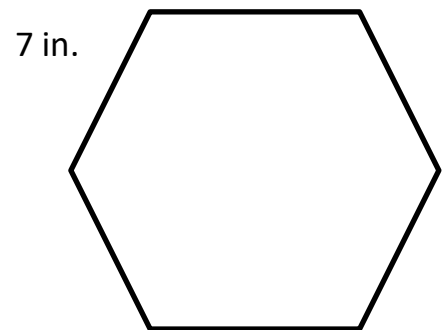
$$\text{Perimeter} = \underline{3 \times 8 = 24 \text{ m}}$$

5)



$$\text{Perimeter} = \underline{8 \times 10 = 80 \text{ mm}}$$

6)



$$\text{Perimeter} = \underline{7 \times 6 = 42 \text{ in.}}$$