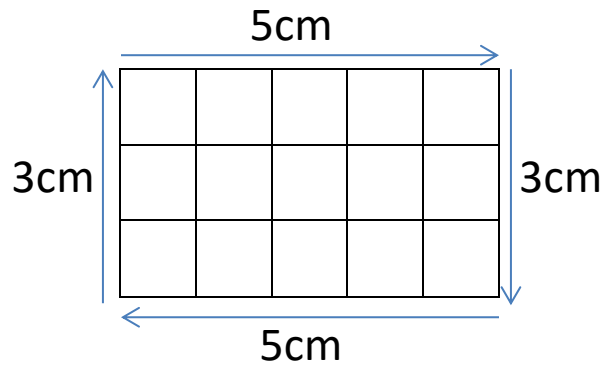




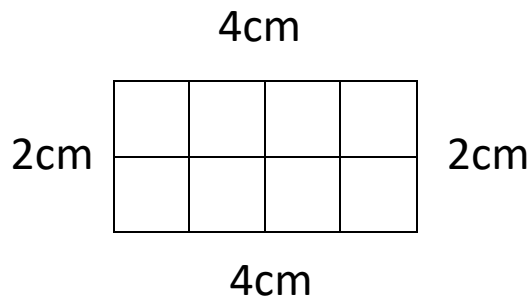
## PERIMETER OF A RECTANGLE SHEET 1

To find the perimeter of a rectangle, simply work out the distance all the way round the outside of the rectangle. The perimeter of the rectangle below is  $5 + 3 + 5 + 3 = 16\text{cm}$ .



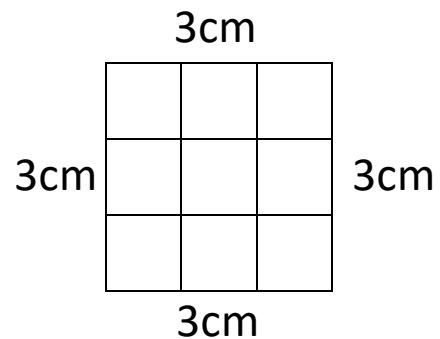
Work out the perimeter of the following rectangles:

1)



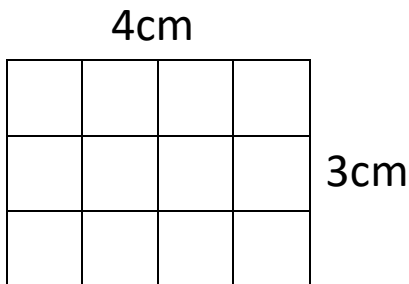
Perimeter = \_\_\_\_\_ cm

2)



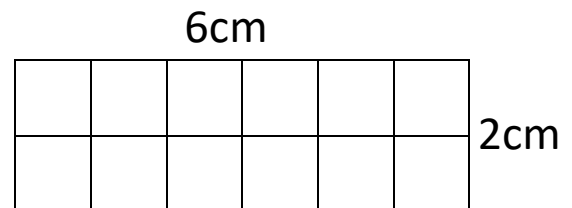
Perimeter = \_\_\_\_\_ cm

3)



Perimeter = \_\_\_\_\_ cm

4)



Perimeter = \_\_\_\_\_ cm

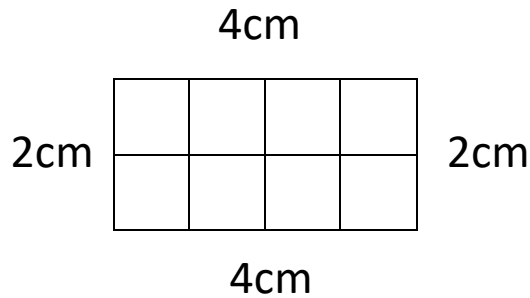




# PERIMETER OF A RECTANGLE SHEET 1 ANSWERS

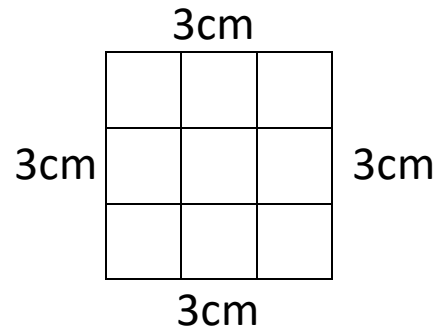
Work out the perimeter of the following rectangles:

1)



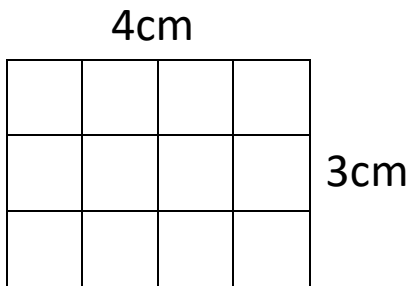
$$\text{Perimeter} = 4 + 2 + 4 + 2 = 12 \text{ cm}$$

2)



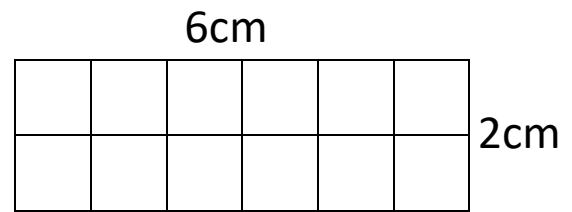
$$\text{Perimeter} = 3 + 3 + 3 + 3 = 12 \text{ cm}$$

3)



$$\text{Perimeter} = 4 + 3 + 4 + 3 = 14 \text{ cm}$$

4)



$$\text{Perimeter} = 6 + 2 + 6 + 2 = 16 \text{ cm}$$